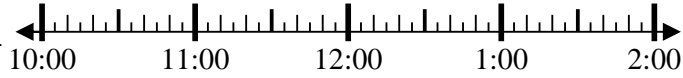




Resuelve cada problema.

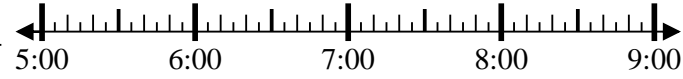
1) Inicio: 10:50

Transcurrido: _____
Final: 1:20



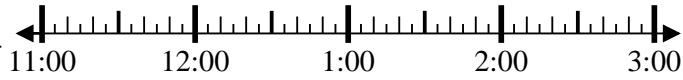
2) Inicio: 5:10

Transcurrido: _____
Final: 6:35



3) Inicio: 11:40

Transcurrido: _____
Final: 1:15



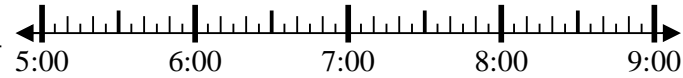
4) Inicio: 4:20

Transcurrido: _____
Final: 6:35



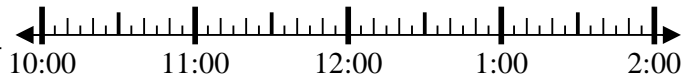
5) Inicio: 5:15

Transcurrido: _____
Final: 7:40



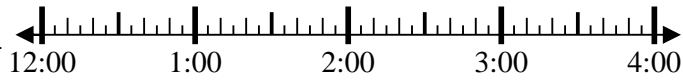
6) Inicio: 10:20

Transcurrido: _____
Final: 12:55



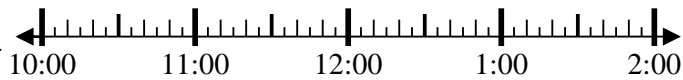
7) Inicio: 12:45

Transcurrido: _____
Final: 3:35



8) Inicio: 10:40

Transcurrido: _____
Final: 12:10



Respuestas

1. _____

2. _____

3. _____

4. _____

5. _____

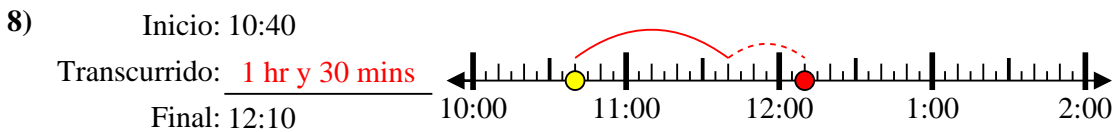
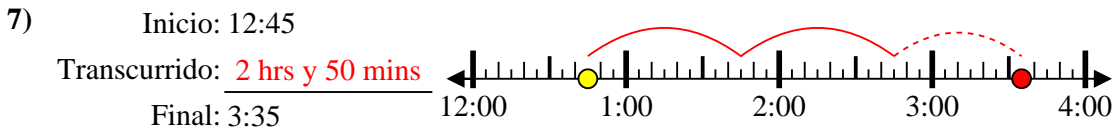
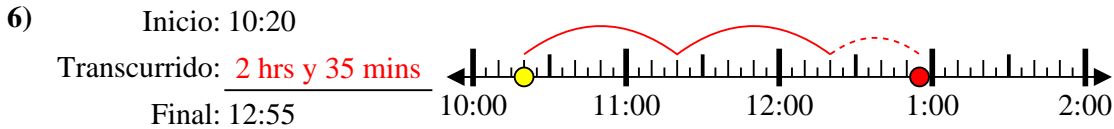
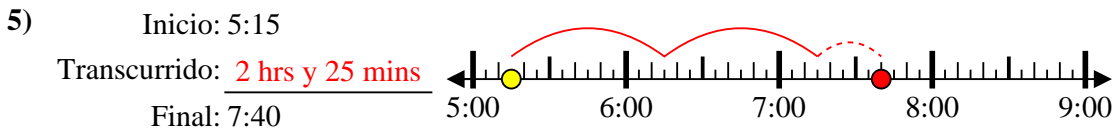
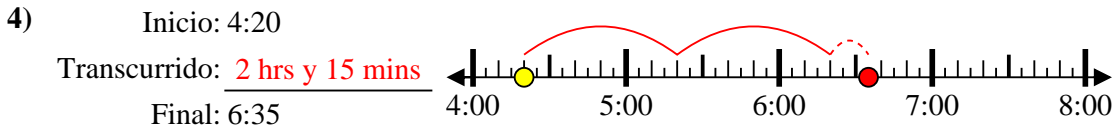
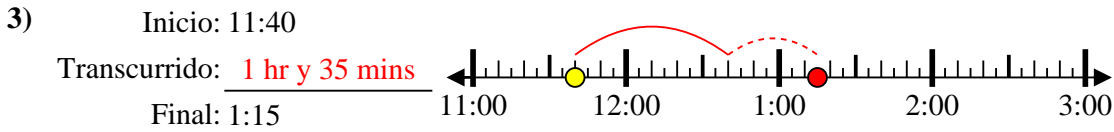
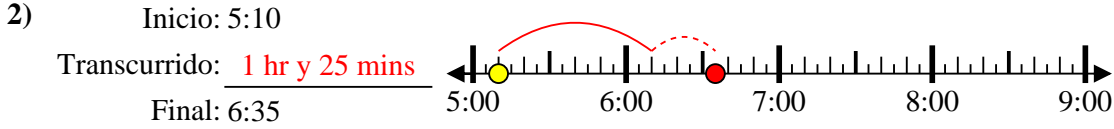
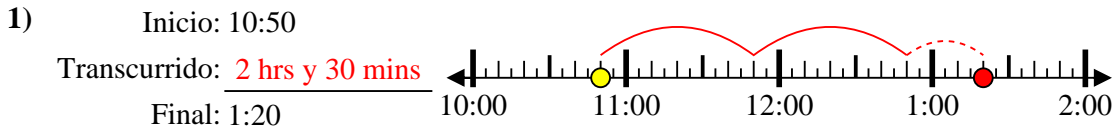
6. _____

7. _____

8. _____



Resuelve cada problema.



Respuestas

1. 2 hrs y 30 mins

2. 1 hr y 25 mins

3. 1 hr y 35 mins

4. 2 hrs y 15 mins

5. 2 hrs y 25 mins

6. 2 hrs y 35 mins

7. 2 hrs y 50 mins

8. 1 hr y 30 mins