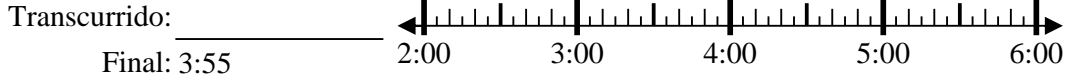


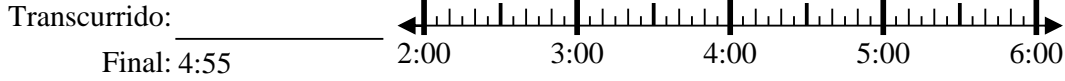


Resuelve cada problema.

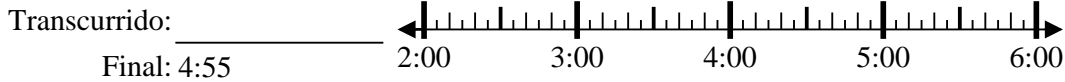
1) Inicio: 2:15



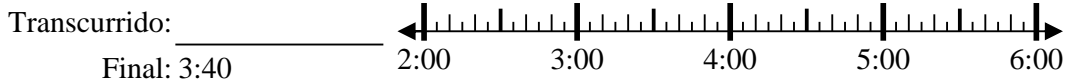
2) Inicio: 2:10



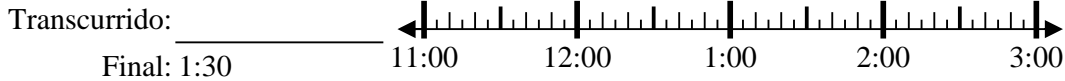
3) Inicio: 2:45



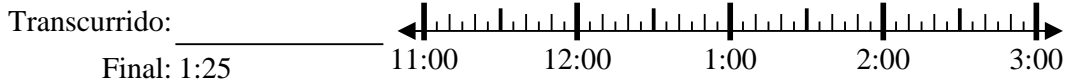
4) Inicio: 2:20



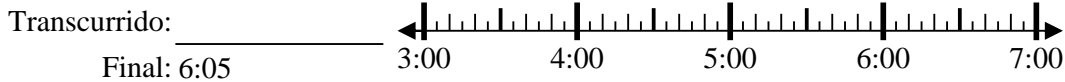
5) Inicio: 11:05



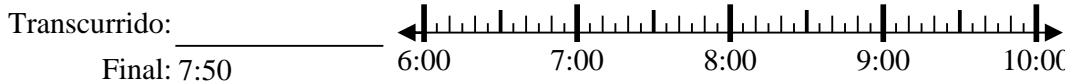
6) Inicio: 11:05



7) Inicio: 3:45



8) Inicio: 6:20



Respuestas

1. _____
2. _____
3. _____
4. _____
5. _____
6. _____
7. _____
8. _____

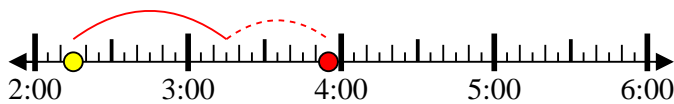


Resuelve cada problema.

1) Inicio: 2:15

Transcurrido: 1 hr y 40 mins

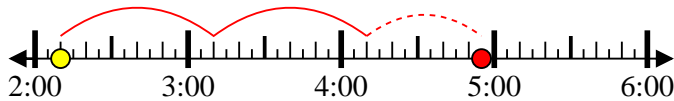
Final: 3:55



2) Inicio: 2:10

Transcurrido: 2 hrs y 45 mins

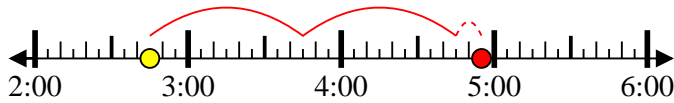
Final: 4:55



3) Inicio: 2:45

Transcurrido: 2 hrs y 10 mins

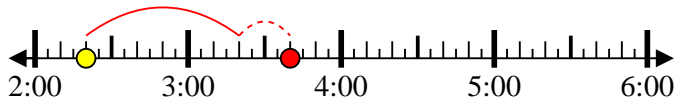
Final: 4:55



4) Inicio: 2:20

Transcurrido: 1 hr y 20 mins

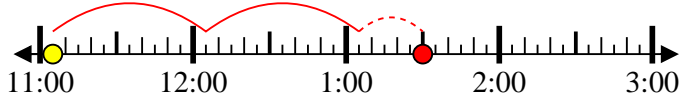
Final: 3:40



5) Inicio: 11:05

Transcurrido: 2 hrs y 25 mins

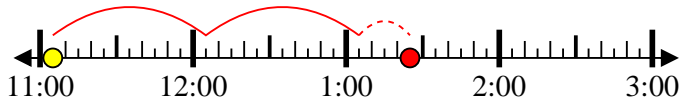
Final: 1:30



6) Inicio: 11:05

Transcurrido: 2 hrs y 20 mins

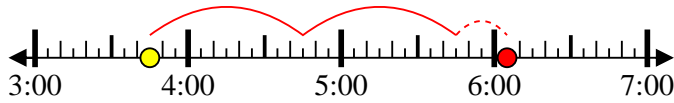
Final: 1:25



7) Inicio: 3:45

Transcurrido: 2 hrs y 20 mins

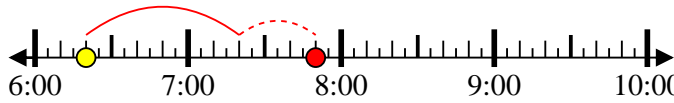
Final: 6:05



8) Inicio: 6:20

Transcurrido: 1 hr y 30 mins

Final: 7:50



Respuestas

1. 1 hr y 40 mins

2. 2 hrs y 45 mins

3. 2 hrs y 10 mins

4. 1 hr y 20 mins

5. 2 hrs y 25 mins

6. 2 hrs y 20 mins

7. 2 hrs y 20 mins

8. 1 hr y 30 mins



Resuelve cada problema.

1) Inicio: 6:45

Transcurrido: _____

Final: 7:55



2) Inicio: 6:25

Transcurrido: _____

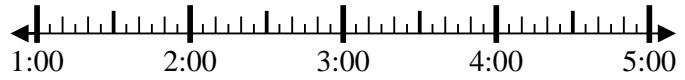
Final: 9:05



3) Inicio: 1:10

Transcurrido: _____

Final: 3:00



4) Inicio: 11:15

Transcurrido: _____

Final: 1:00



5) Inicio: 3:25

Transcurrido: _____

Final: 5:35



6) Inicio: 3:20

Transcurrido: _____

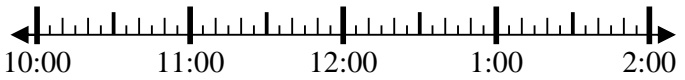
Final: 5:55



7) Inicio: 10:35

Transcurrido: _____

Final: 12:25



8) Inicio: 10:00

Transcurrido: _____

Final: 11:30



Respuestas

1. _____

2. _____

3. _____

4. _____

5. _____

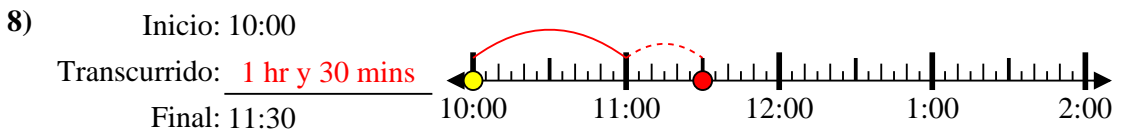
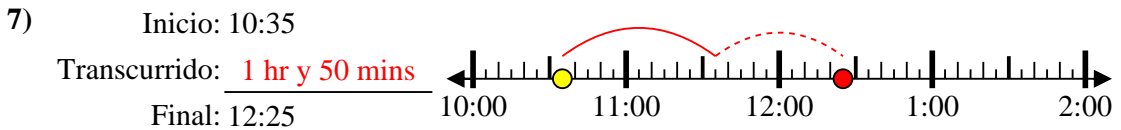
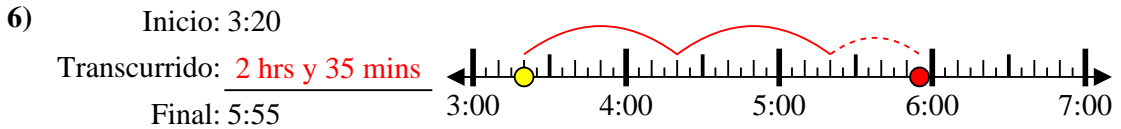
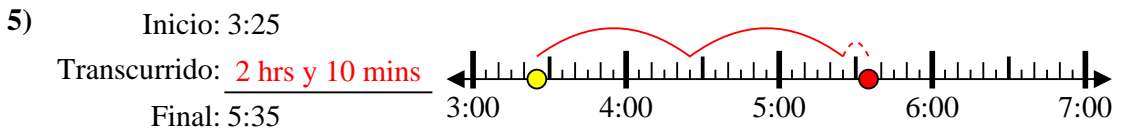
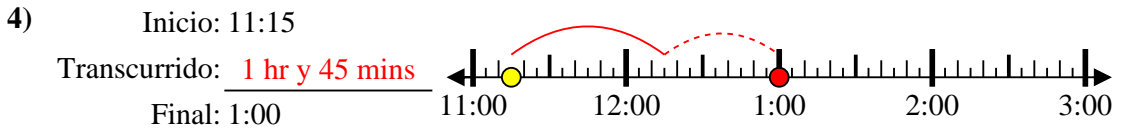
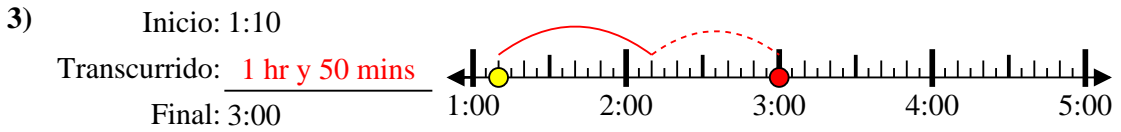
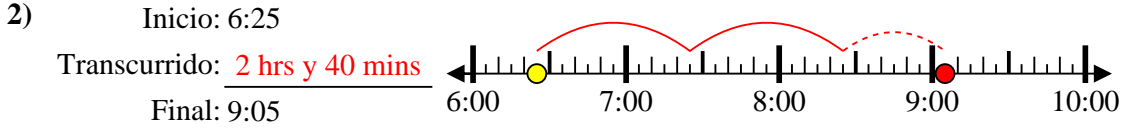
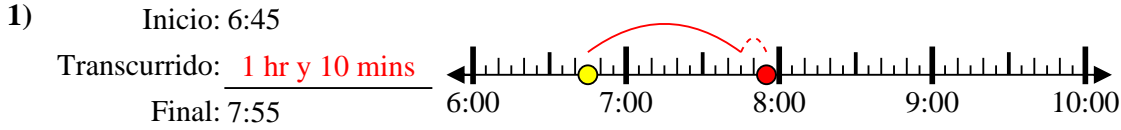
6. _____

7. _____

8. _____



Resuelve cada problema.



Respuestas

1. 1 hr y 10 mins

2. 2 hrs y 40 mins

3. 1 hr y 50 mins

4. 1 hr y 45 mins

5. 2 hrs y 10 mins

6. 2 hrs y 35 mins

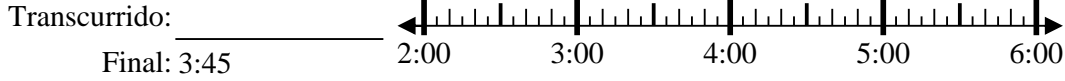
7. 1 hr y 50 mins

8. 1 hr y 30 mins

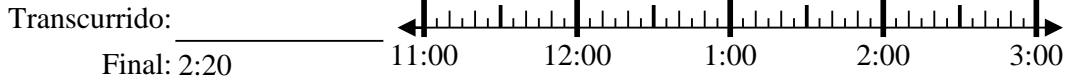


Resuelve cada problema.

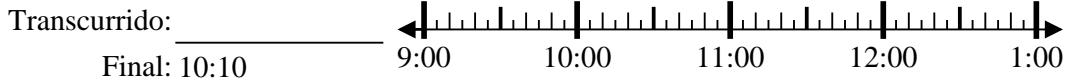
1) Inicio: 2:00



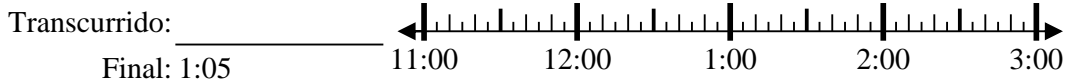
2) Inicio: 11:35



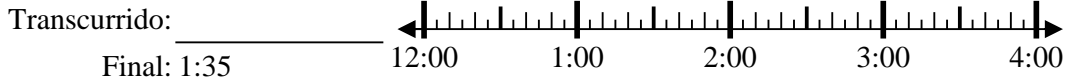
3) Inicio: 9:00



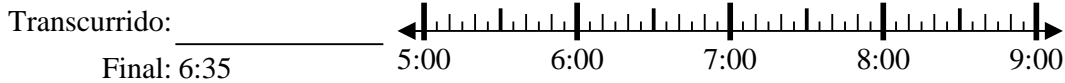
4) Inicio: 11:45



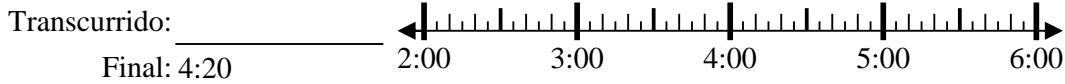
5) Inicio: 12:20



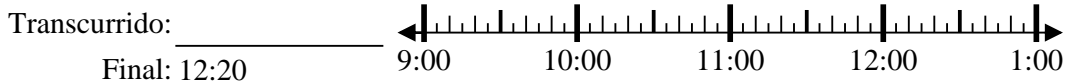
6) Inicio: 5:25



7) Inicio: 2:35



8) Inicio: 9:35



Respuestas

1. _____

2. _____

3. _____

4. _____

5. _____

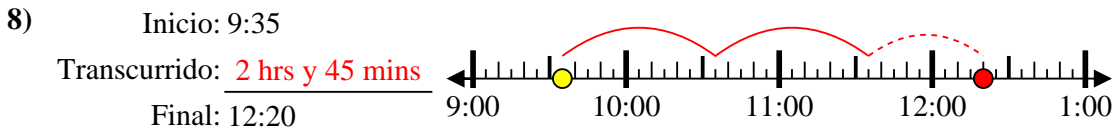
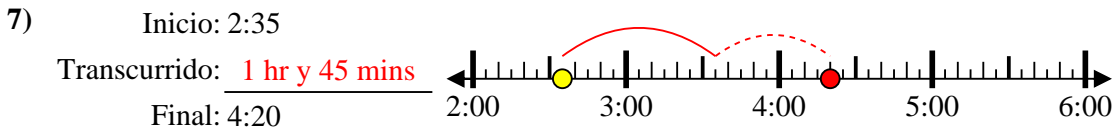
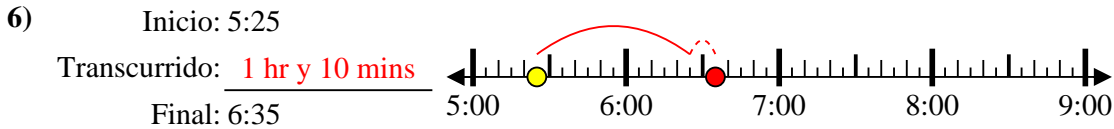
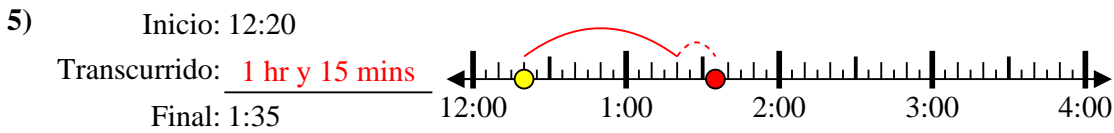
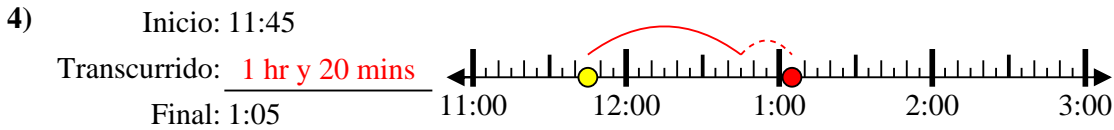
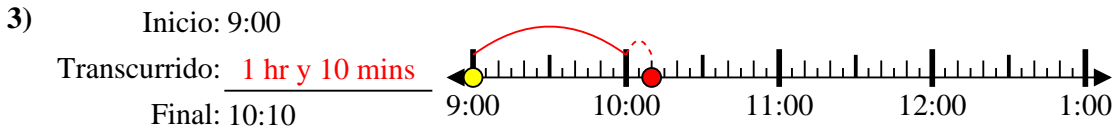
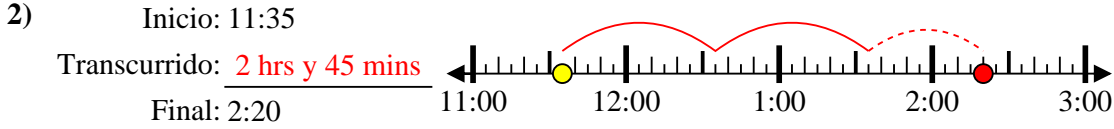
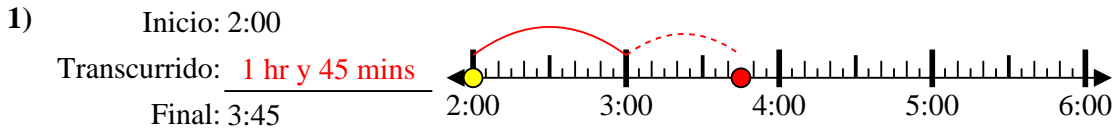
6. _____

7. _____

8. _____



Resuelve cada problema.



Respuestas

1. 1 hr y 45 mins

2. 2 hrs y 45 mins

3. 1 hr y 10 mins

4. 1 hr y 20 mins

5. 1 hr y 15 mins

6. 1 hr y 10 mins

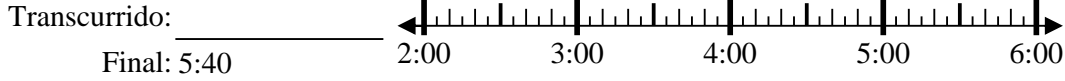
7. 1 hr y 45 mins

8. 2 hrs y 45 mins




Resuelve cada problema.

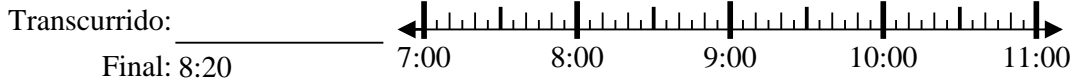
1) Inicio: 2:50



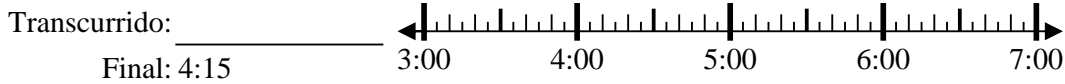
2) Inicio: 9:10



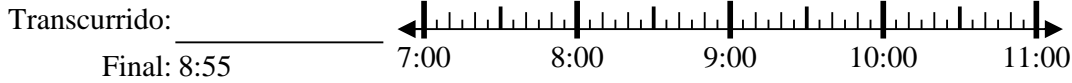
3) Inicio: 7:05



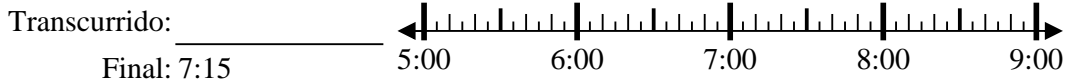
4) Inicio: 3:00



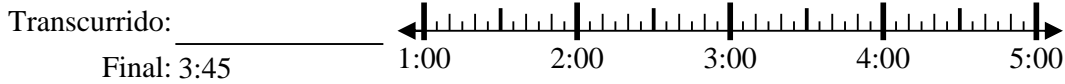
5) Inicio: 7:15



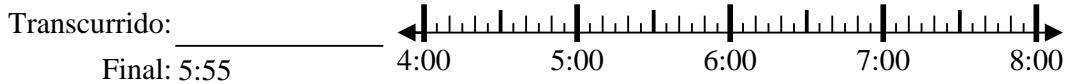
6) Inicio: 5:00



7) Inicio: 1:00



8) Inicio: 4:35



Respuestas

1. _____

2. _____

3. _____

4. _____

5. _____

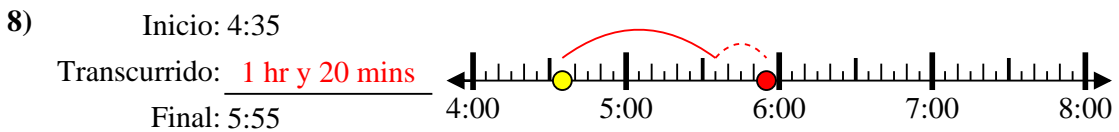
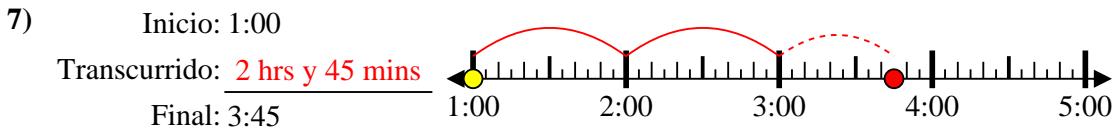
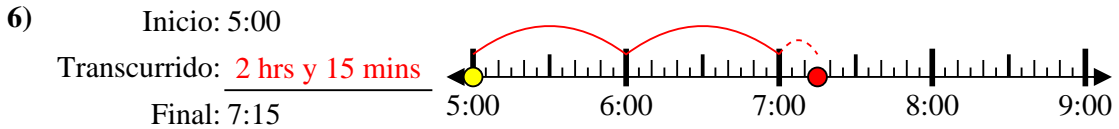
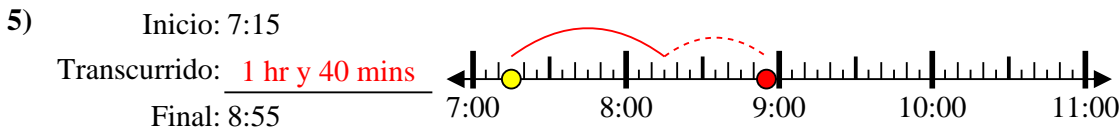
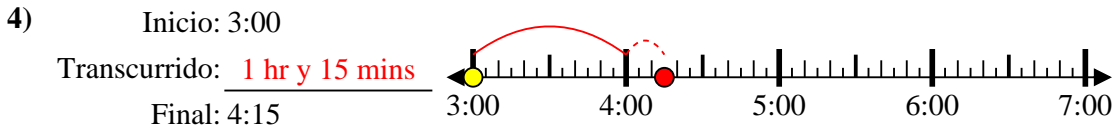
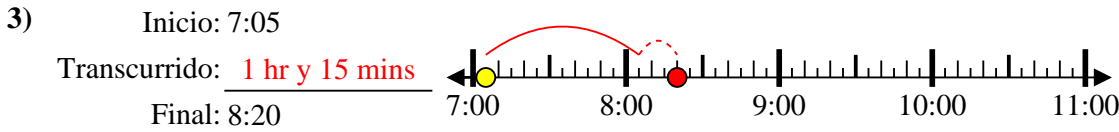
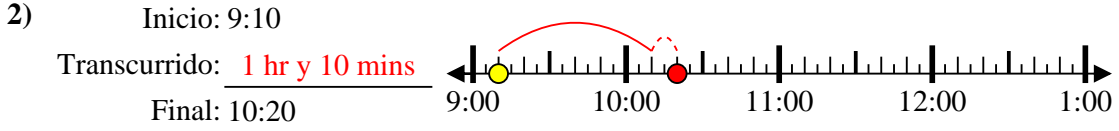
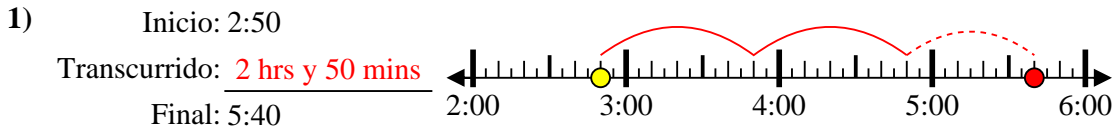
6. _____

7. _____

8. _____



Resuelve cada problema.



Respuestas

1. 2 hrs y 50 mins

2. 1 hr y 10 mins

3. 1 hr y 15 mins

4. 1 hr y 15 mins

5. 1 hr y 40 mins

6. 2 hrs y 15 mins

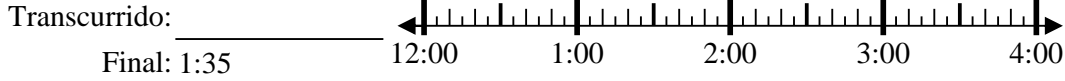
7. 2 hrs y 45 mins

8. 1 hr y 20 mins

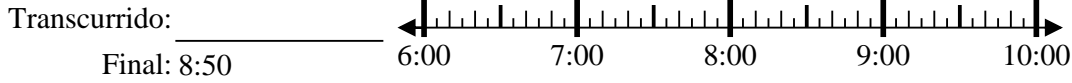


Resuelve cada problema.

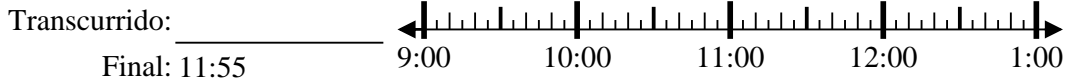
1) Inicio: 12:10



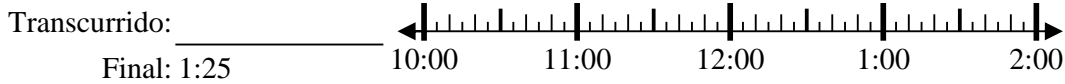
2) Inicio: 6:40



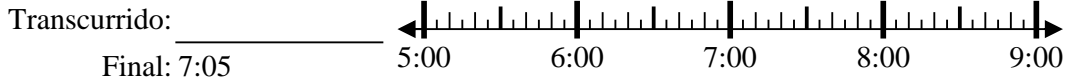
3) Inicio: 9:05



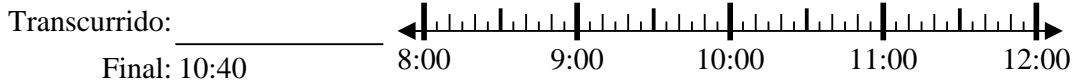
4) Inicio: 10:45



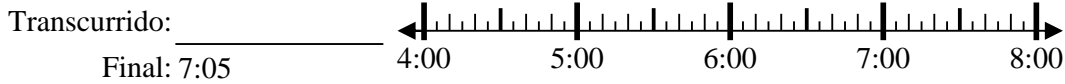
5) Inicio: 5:35



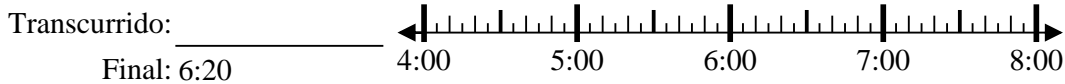
6) Inicio: 8:15



7) Inicio: 4:10



8) Inicio: 4:00



Respuestas

1. _____

2. _____

3. _____

4. _____

5. _____

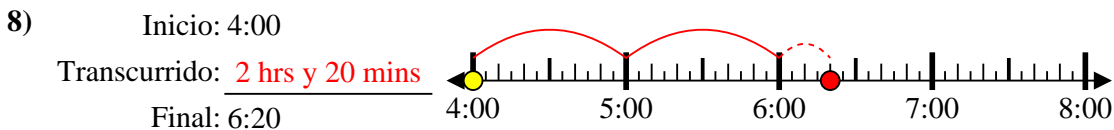
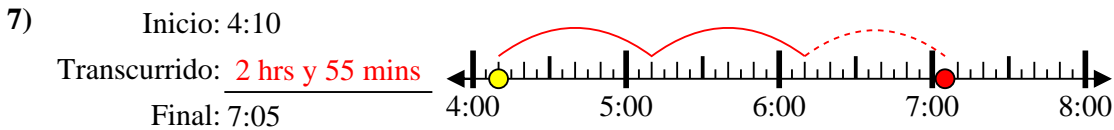
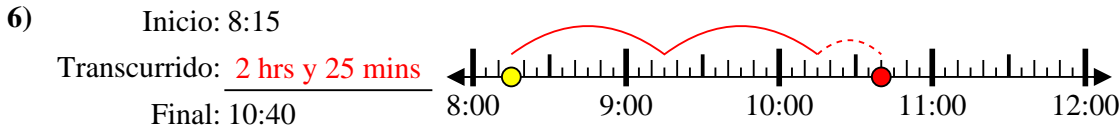
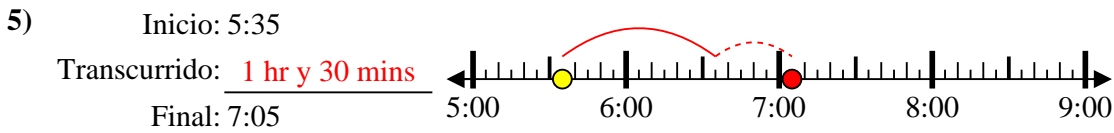
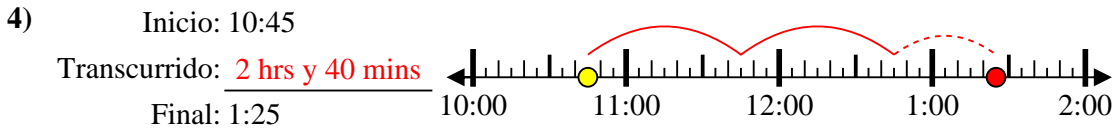
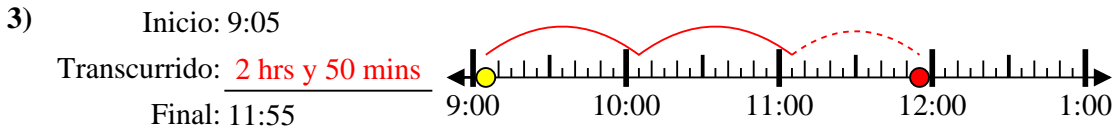
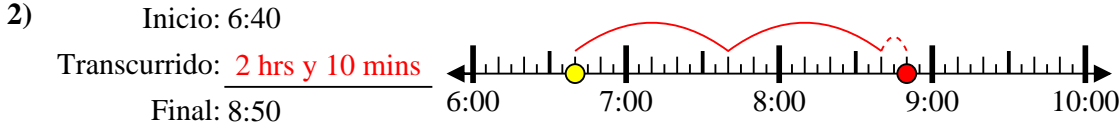
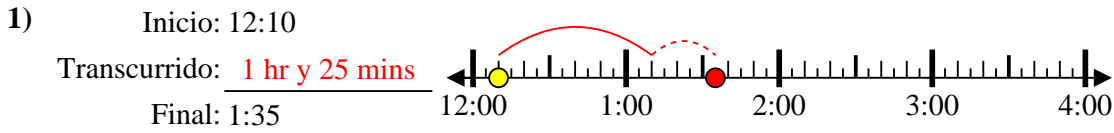
6. _____

7. _____

8. _____



Resuelve cada problema.



Respuestas

1. 1 hr y 25 mins

2. 2 hrs y 10 mins

3. 2 hrs y 50 mins

4. 2 hrs y 40 mins

5. 1 hr y 30 mins

6. 2 hrs y 25 mins

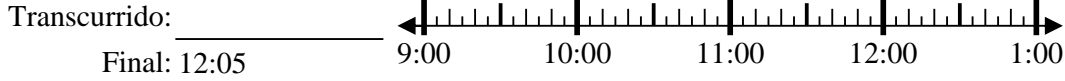
7. 2 hrs y 55 mins

8. 2 hrs y 20 mins

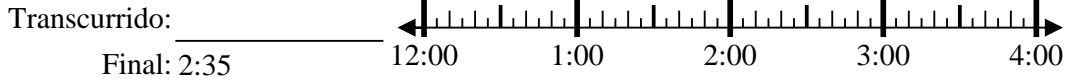


Resuelve cada problema.

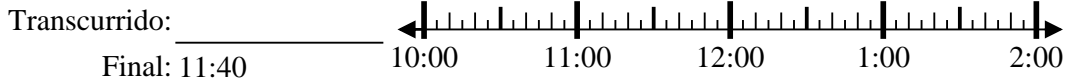
1) Inicio: 9:35



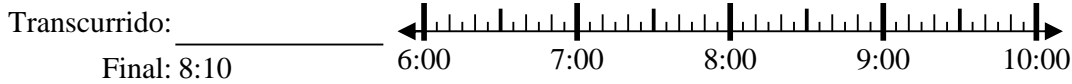
2) Inicio: 12:50



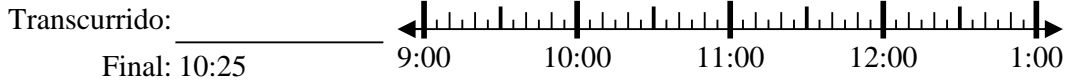
3) Inicio: 10:15



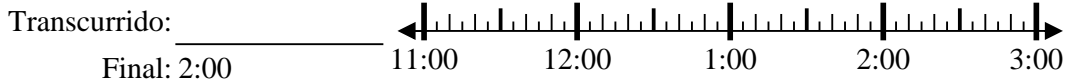
4) Inicio: 6:25



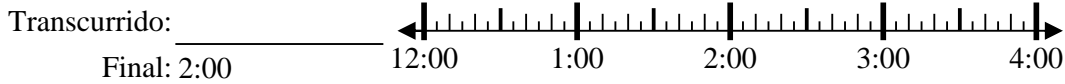
5) Inicio: 9:10



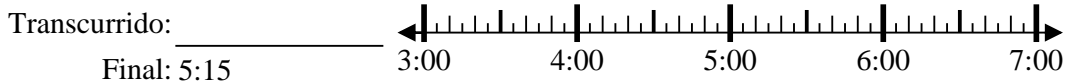
6) Inicio: 11:45



7) Inicio: 12:20



8) Inicio: 3:35

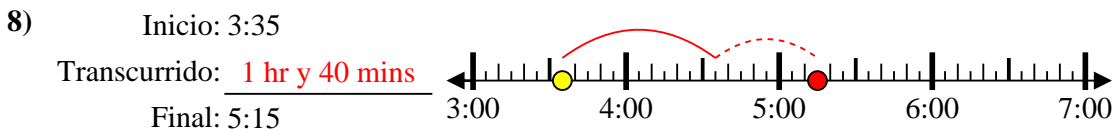
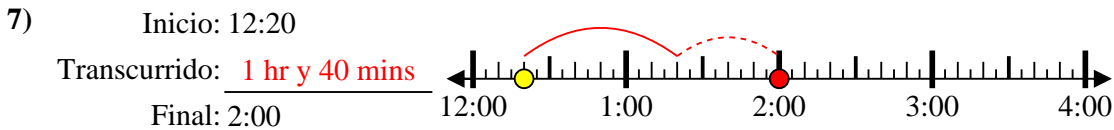
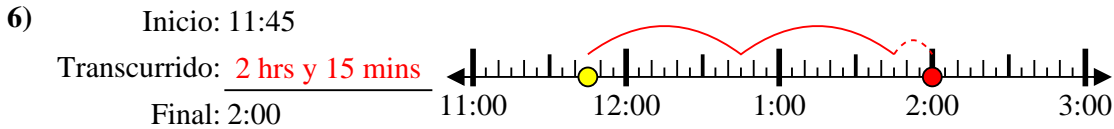
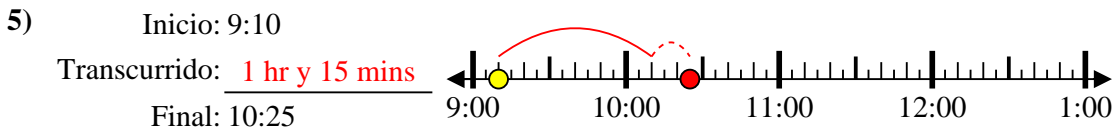
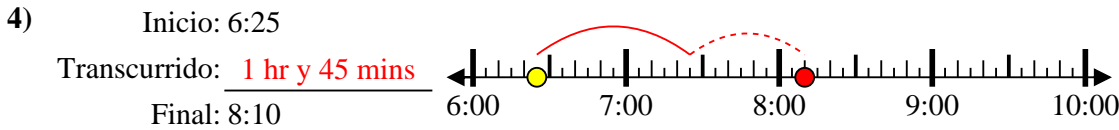
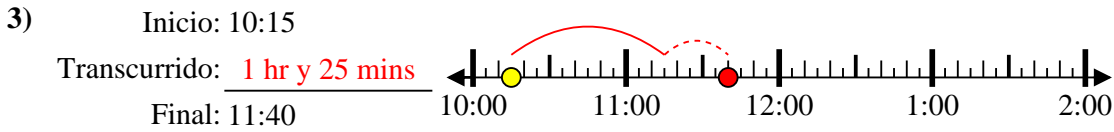
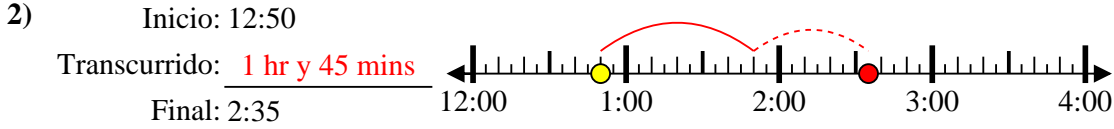
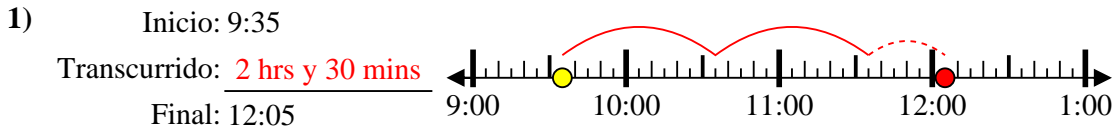


Respuestas

1. _____
2. _____
3. _____
4. _____
5. _____
6. _____
7. _____
8. _____



Resuelve cada problema.



Respuestas

1. 2 hrs y 30 mins

2. 1 hr y 45 mins

3. 1 hr y 25 mins

4. 1 hr y 45 mins

5. 1 hr y 15 mins

6. 2 hrs y 15 mins

7. 1 hr y 40 mins

8. 1 hr y 40 mins



Resuelve cada problema.

1) Inicio: 7:05

Transcurrido: _____

Final: 9:25



1. _____

2) Inicio: 5:25

Transcurrido: _____

Final: 7:45



2. _____

3) Inicio: 4:15

Transcurrido: _____

Final: 5:50



3. _____

4) Inicio: 12:05

Transcurrido: _____

Final: 2:45



4. _____

5) Inicio: 10:05

Transcurrido: _____

Final: 11:50



5. _____

6) Inicio: 11:45

Transcurrido: _____

Final: 2:00



6. _____

7) Inicio: 5:25

Transcurrido: _____

Final: 7:05



7. _____

8) Inicio: 1:25

Transcurrido: _____

Final: 2:40

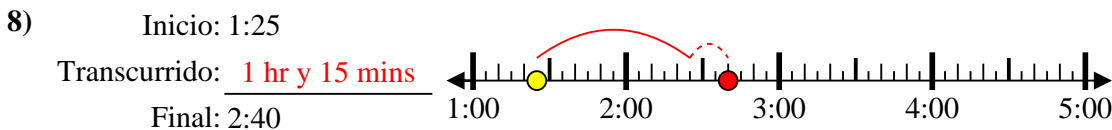
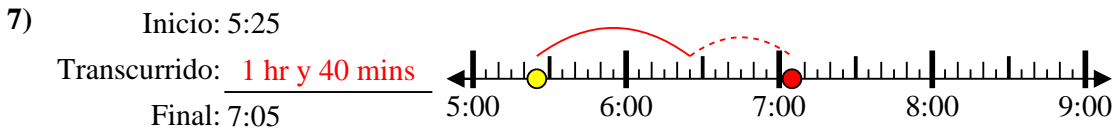
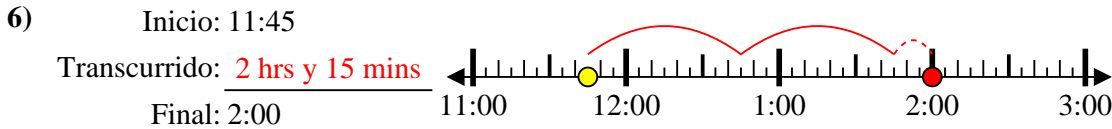
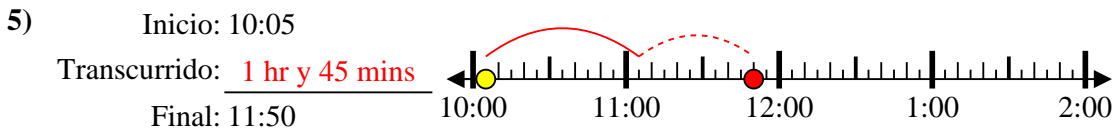
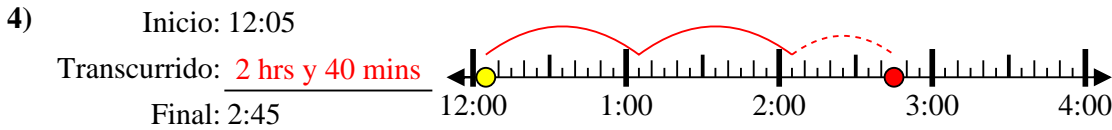
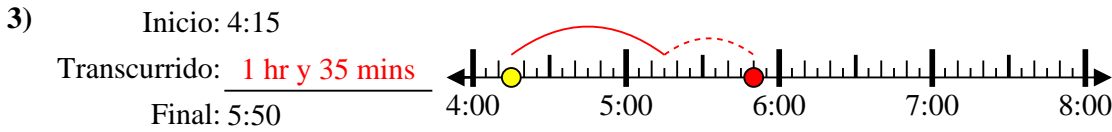
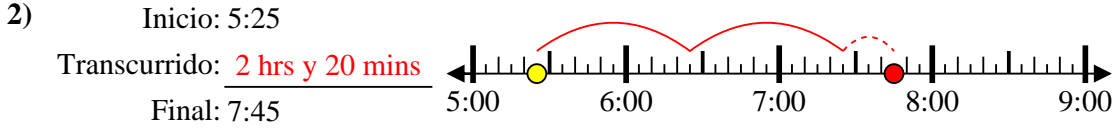
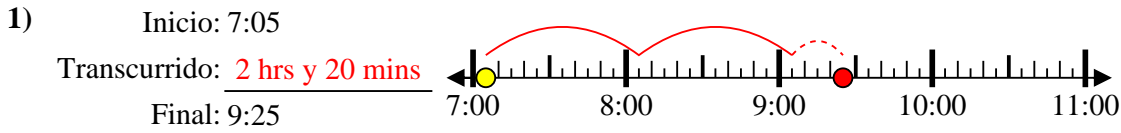


8. _____

Respuestas



Resuelve cada problema.



Respuestas

1. 2 hrs y 20 mins

2. 2 hrs y 20 mins

3. 1 hr y 35 mins

4. 2 hrs y 40 mins

5. 1 hr y 45 mins

6. 2 hrs y 15 mins

7. 1 hr y 40 mins

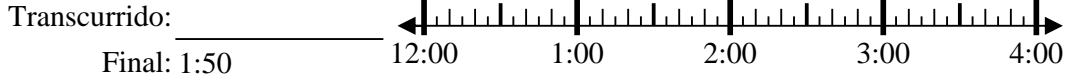
8. 1 hr y 15 mins



Resuelve cada problema.

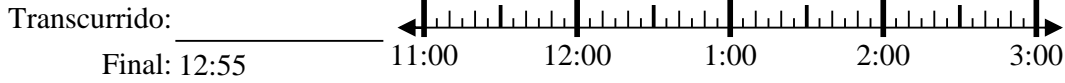
Respuestas

1) Inicio: 12:15



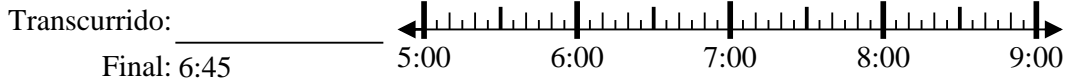
1. _____

2) Inicio: 11:30



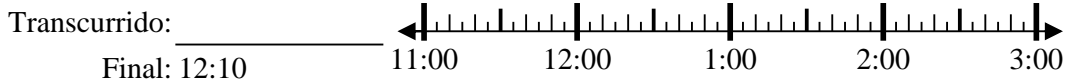
2. _____

3) Inicio: 5:10



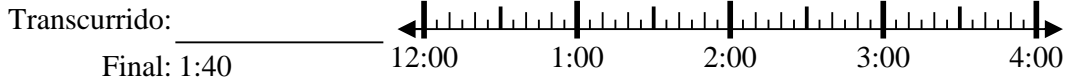
3. _____

4) Inicio: 11:00



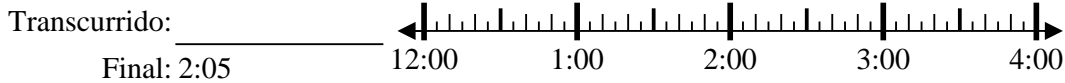
4. _____

5) Inicio: 12:30



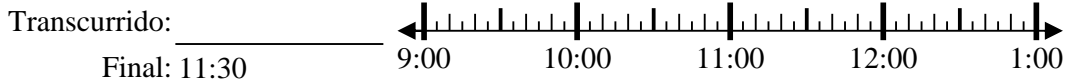
5. _____

6) Inicio: 12:40



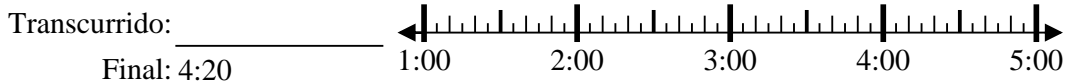
6. _____

7) Inicio: 9:40



7. _____

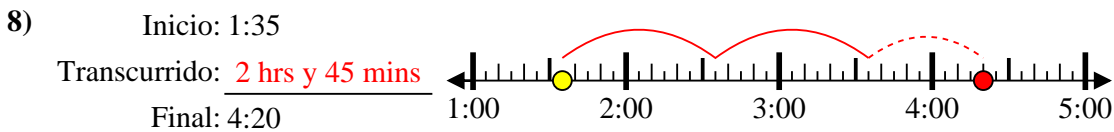
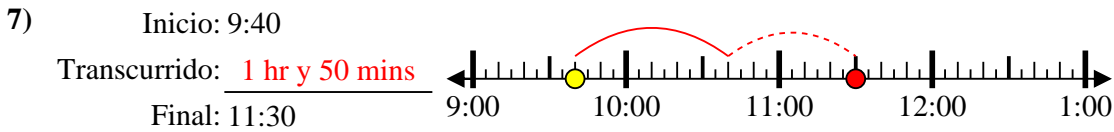
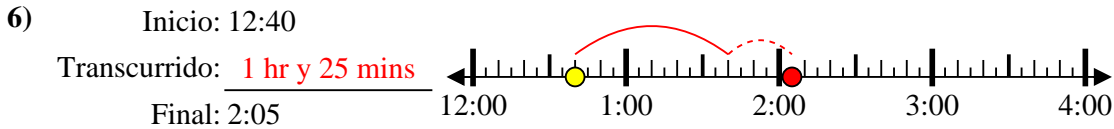
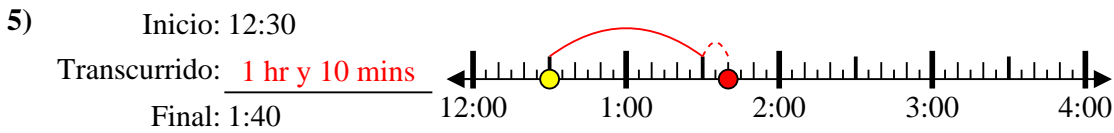
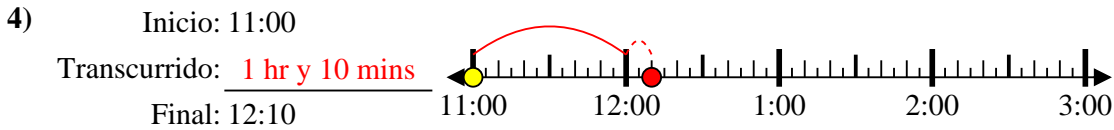
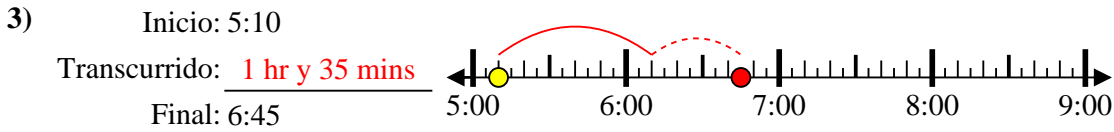
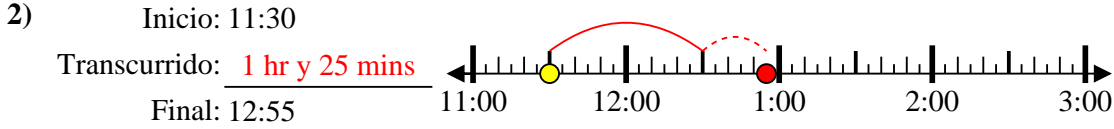
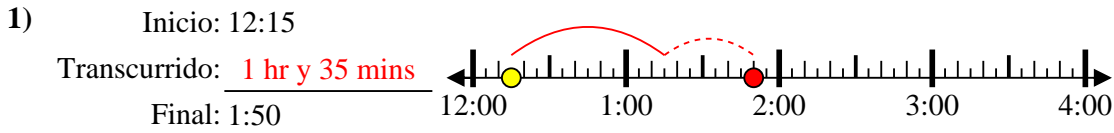
8) Inicio: 1:35



8. _____



Resuelve cada problema.



Respuestas

1. **1 hr y 35 mins**

2. **1 hr y 25 mins**

3. **1 hr y 35 mins**

4. **1 hr y 10 mins**

5. **1 hr y 10 mins**

6. **1 hr y 25 mins**

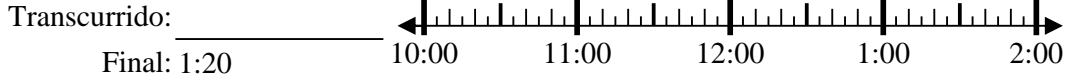
7. **1 hr y 50 mins**

8. **2 hrs y 45 mins**

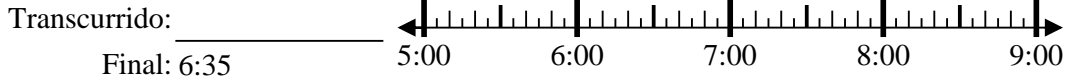


Resuelve cada problema.

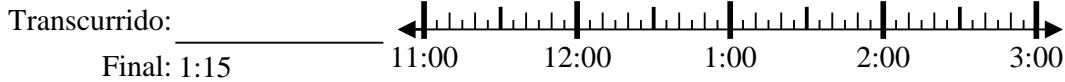
1) Inicio: 10:50



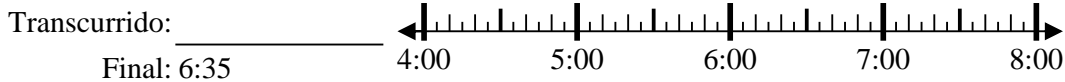
2) Inicio: 5:10



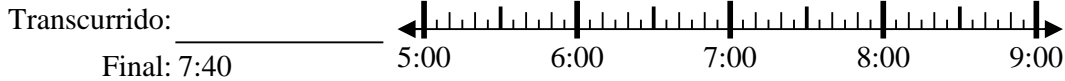
3) Inicio: 11:40



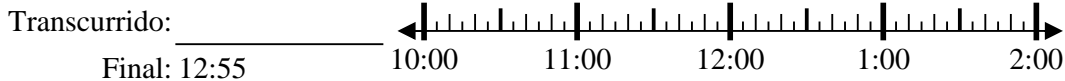
4) Inicio: 4:20



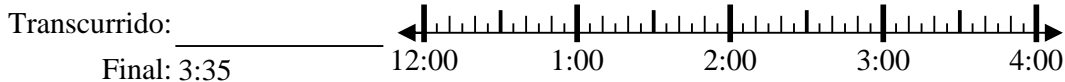
5) Inicio: 5:15



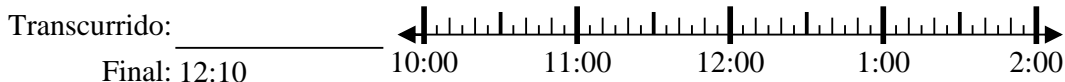
6) Inicio: 10:20



7) Inicio: 12:45



8) Inicio: 10:40



Respuestas

1. _____

2. _____

3. _____

4. _____

5. _____

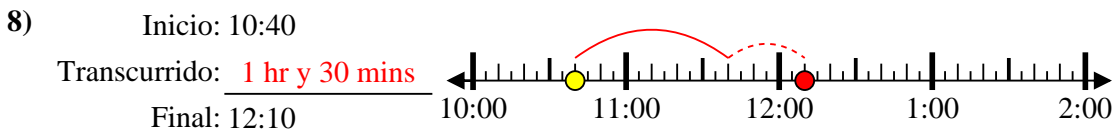
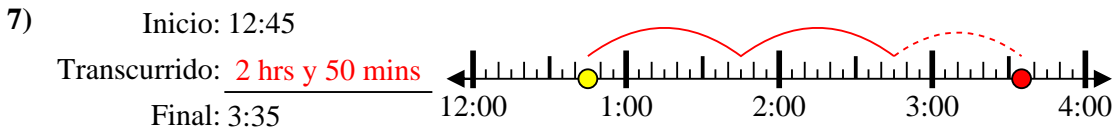
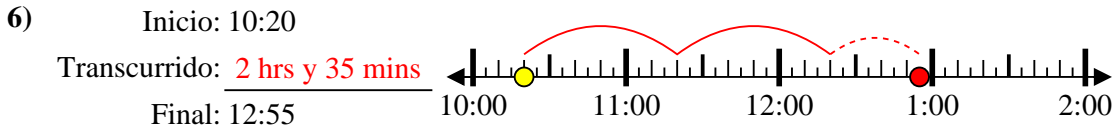
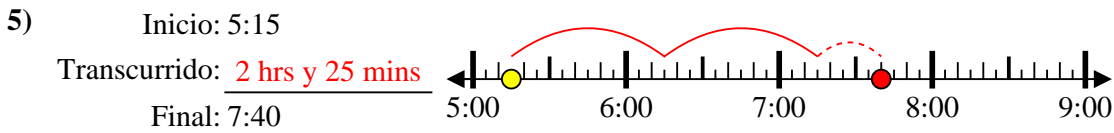
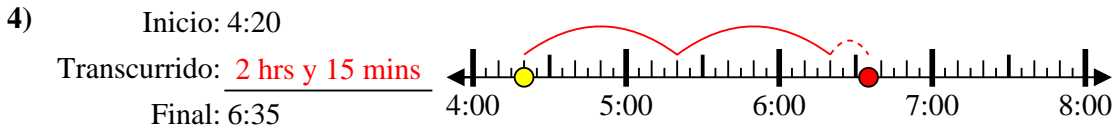
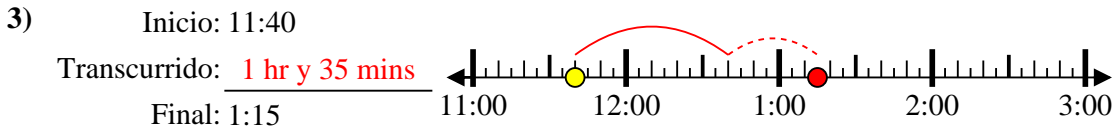
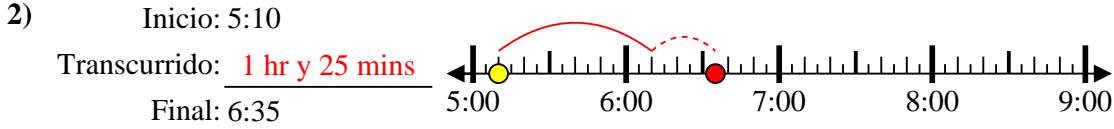
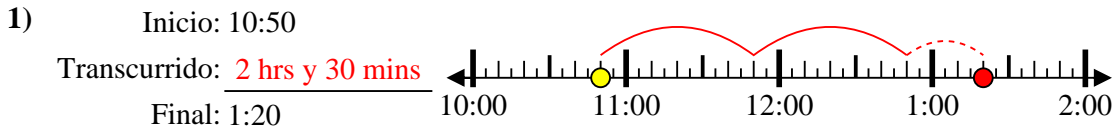
6. _____

7. _____

8. _____



Resuelve cada problema.



Respuestas

1. 2 hrs y 30 mins

2. 1 hr y 25 mins

3. 1 hr y 35 mins

4. 2 hrs y 15 mins

5. 2 hrs y 25 mins

6. 2 hrs y 35 mins

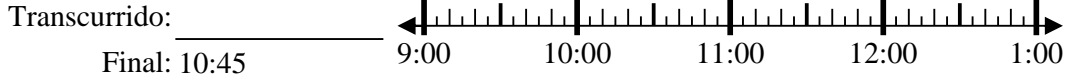
7. 2 hrs y 50 mins

8. 1 hr y 30 mins

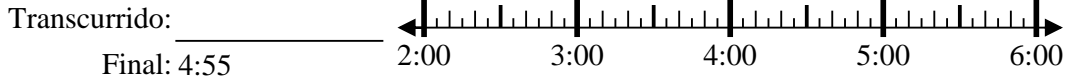


Resuelve cada problema.

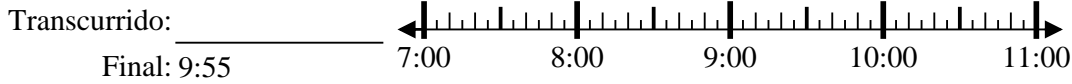
1) Inicio: 9:20



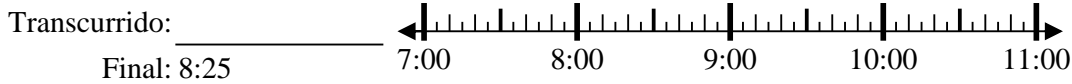
2) Inicio: 2:00



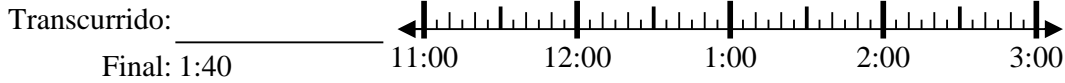
3) Inicio: 7:40



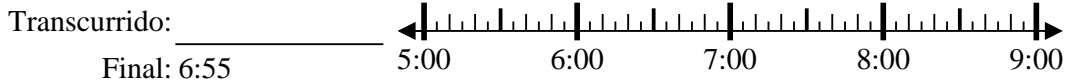
4) Inicio: 7:15



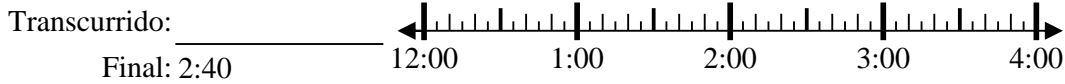
5) Inicio: 11:15



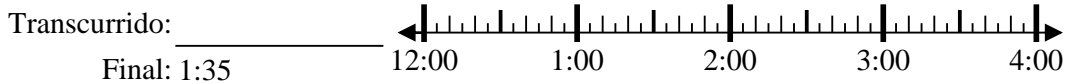
6) Inicio: 5:30



7) Inicio: 12:00



8) Inicio: 12:15



Respuestas

1. _____
2. _____
3. _____
4. _____
5. _____
6. _____
7. _____
8. _____



Resuelve cada problema.

1) Inicio: 9:20

Transcurrido: 1 hr y 25 mins

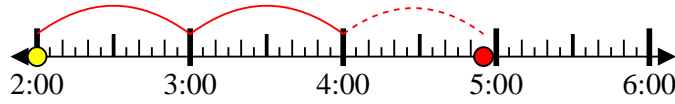
Final: 10:45



2) Inicio: 2:00

Transcurrido: 2 hrs y 55 mins

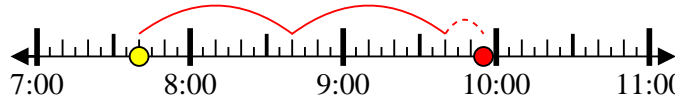
Final: 4:55



3) Inicio: 7:40

Transcurrido: 2 hrs y 15 mins

Final: 9:55



4) Inicio: 7:15

Transcurrido: 1 hr y 10 mins

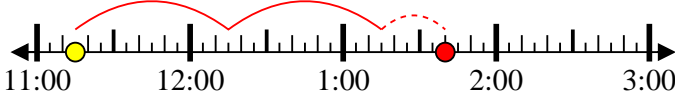
Final: 8:25



5) Inicio: 11:15

Transcurrido: 2 hrs y 25 mins

Final: 1:40



6) Inicio: 5:30

Transcurrido: 1 hr y 25 mins

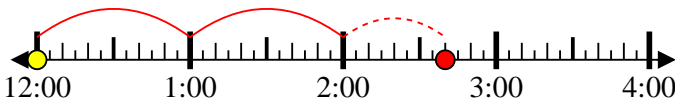
Final: 6:55



7) Inicio: 12:00

Transcurrido: 2 hrs y 40 mins

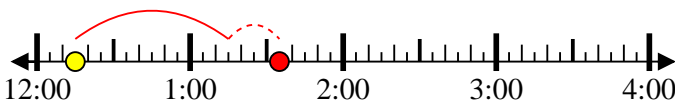
Final: 2:40



8) Inicio: 12:15

Transcurrido: 1 hr y 20 mins

Final: 1:35



Respuestas

1. 1 hr y 25 mins

2. 2 hrs y 55 mins

3. 2 hrs y 15 mins

4. 1 hr y 10 mins

5. 2 hrs y 25 mins

6. 1 hr y 25 mins

7. 2 hrs y 40 mins

8. 1 hr y 20 mins