

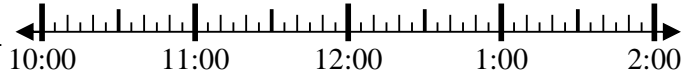


**Resuelve cada problema.**

1) Inicio: 10:10

Transcurrido: \_\_\_\_\_

Final: 11:40



1. \_\_\_\_\_

2) Inicio: 2:05

Transcurrido: \_\_\_\_\_

Final: 3:50

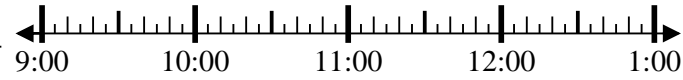


2. \_\_\_\_\_

3) Inicio: 9:50

Transcurrido: \_\_\_\_\_

Final: 11:10

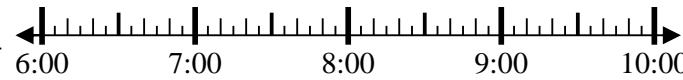


3. \_\_\_\_\_

4) Inicio: 6:50

Transcurrido: \_\_\_\_\_

Final: 8:30

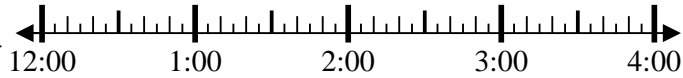


4. \_\_\_\_\_

5) Inicio: 12:45

Transcurrido: \_\_\_\_\_

Final: 2:05

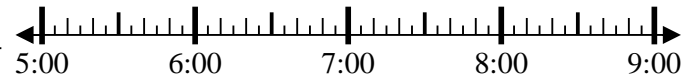


5. \_\_\_\_\_

6) Inicio: 5:10

Transcurrido: \_\_\_\_\_

Final: 8:00

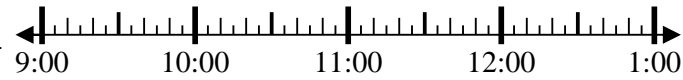


6. \_\_\_\_\_

7) Inicio: 9:50

Transcurrido: \_\_\_\_\_

Final: 11:20



7. \_\_\_\_\_

8) Inicio: 2:50

Transcurrido: \_\_\_\_\_

Final: 4:00

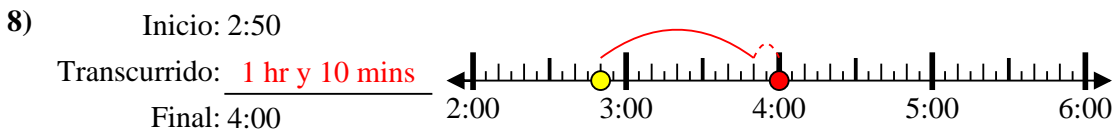
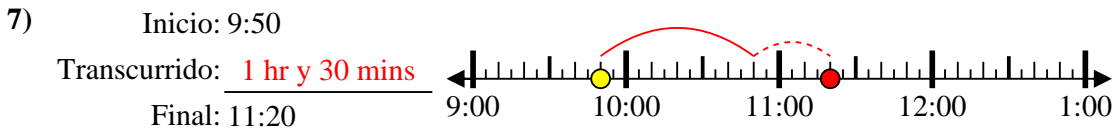
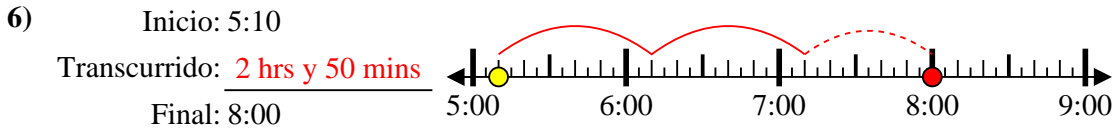
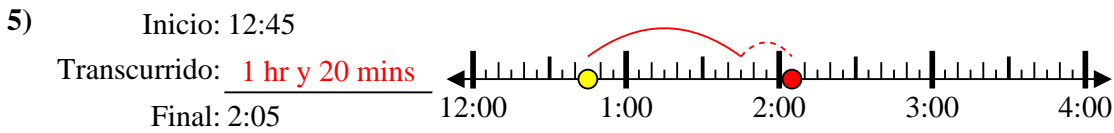
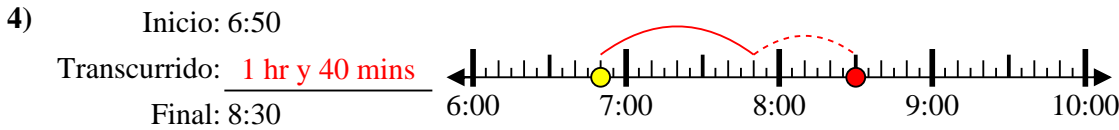
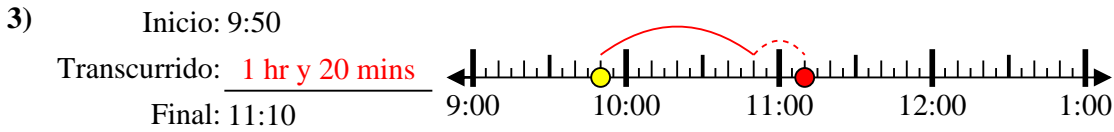
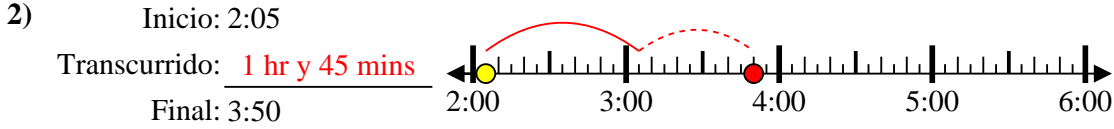
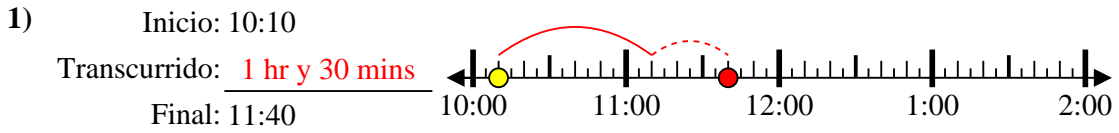


8. \_\_\_\_\_

**Respuestas**



Resuelve cada problema.



**Respuestas**

1. 1 hr y 30 mins

2. 1 hr y 45 mins

3. 1 hr y 20 mins

4. 1 hr y 40 mins

5. 1 hr y 20 mins

6. 2 hrs y 50 mins

7. 1 hr y 30 mins

8. 1 hr y 10 mins