



Resuelve cada problema.

Respuestas

1) Inicio: _____
 Transcurrido: 1 hr y 10 mins
 Final: 7:55

1. _____

2) Inicio: _____
 Transcurrido: 2 hrs y 40 mins
 Final: 9:05

2. _____

3) Inicio: _____
 Transcurrido: 1 hr y 50 mins
 Final: 3:00

3. _____

4) Inicio: _____
 Transcurrido: 1 hr y 45 mins
 Final: 1:00

4. _____

5) Inicio: _____
 Transcurrido: 2 hrs y 10 mins
 Final: 5:35

5. _____

6) Inicio: _____
 Transcurrido: 2 hrs y 35 mins
 Final: 5:55

6. _____

7) Inicio: _____
 Transcurrido: 1 hr y 50 mins
 Final: 12:25

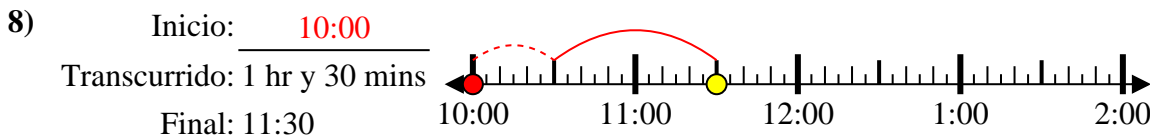
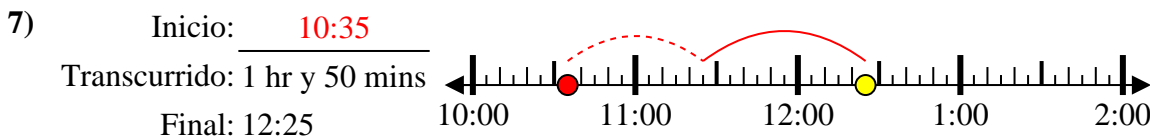
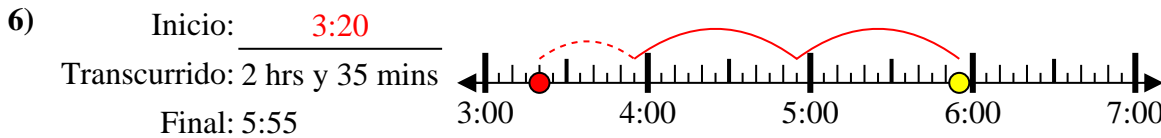
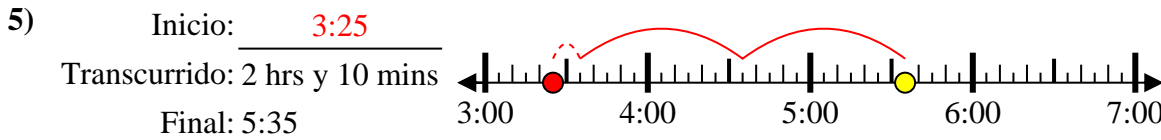
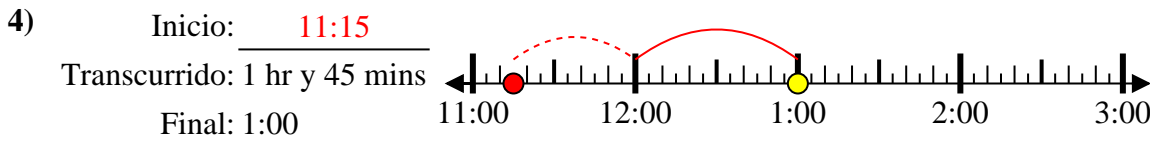
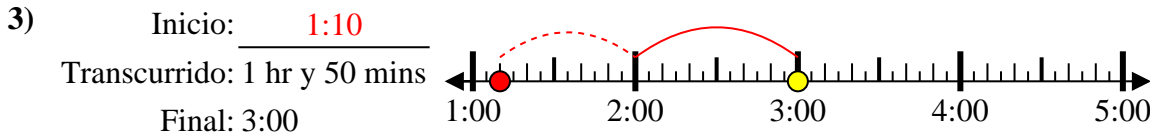
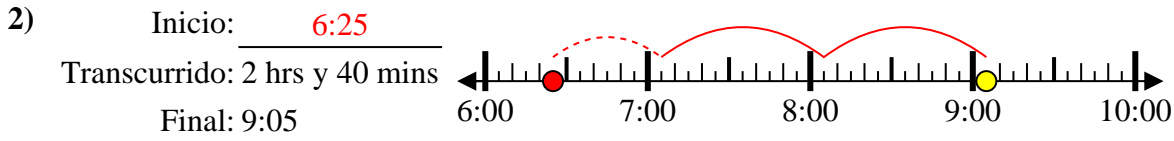
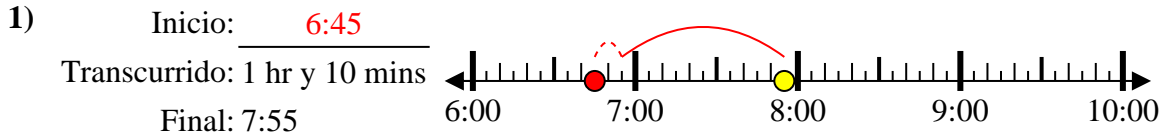
7. _____

8) Inicio: _____
 Transcurrido: 1 hr y 30 mins
 Final: 11:30

8. _____



Resuelve cada problema.



Respuestas

1. 6:45

2. 6:25

3. 1:10

4. 11:15

5. 3:25

6. 3:20

7. 10:35

8. 10:00