



Resuelve cada problema.

Respuestas

1) Inicio: _____
 Transcurrido: 1 hr y 45 mins
 Final: 3:45

1. _____

2) Inicio: _____
 Transcurrido: 2 hrs y 45 mins
 Final: 2:20

2. _____

3) Inicio: _____
 Transcurrido: 1 hr y 10 mins
 Final: 10:10

3. _____

4) Inicio: _____
 Transcurrido: 1 hr y 20 mins
 Final: 1:05

4. _____

5) Inicio: _____
 Transcurrido: 1 hr y 15 mins
 Final: 1:35

5. _____

6) Inicio: _____
 Transcurrido: 1 hr y 10 mins
 Final: 6:35

6. _____

7) Inicio: _____
 Transcurrido: 1 hr y 45 mins
 Final: 4:20

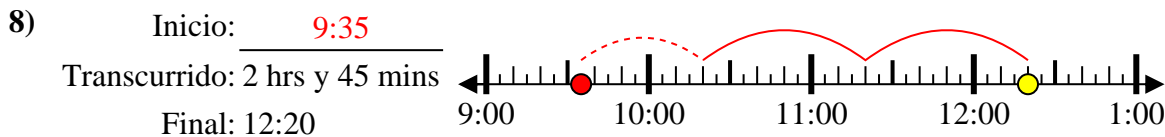
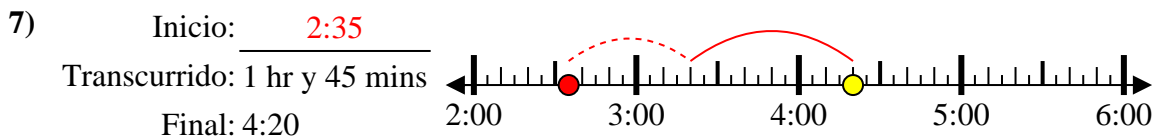
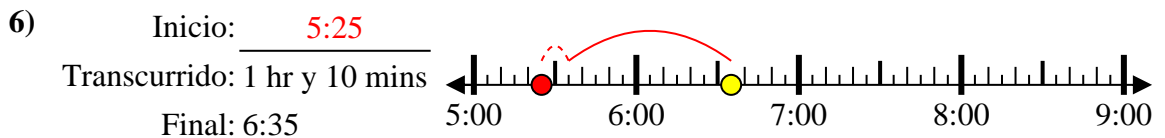
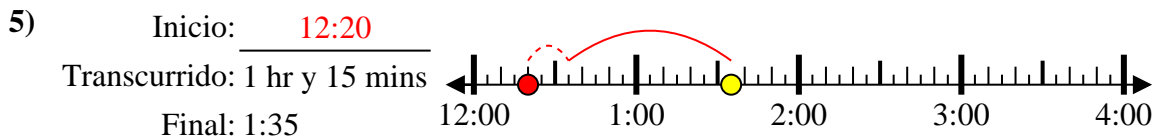
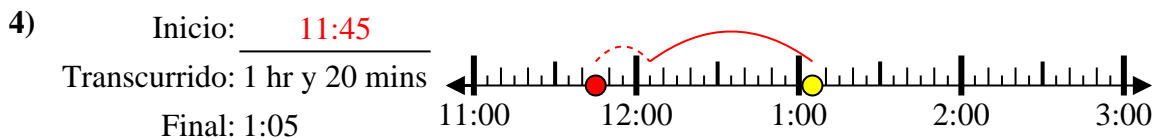
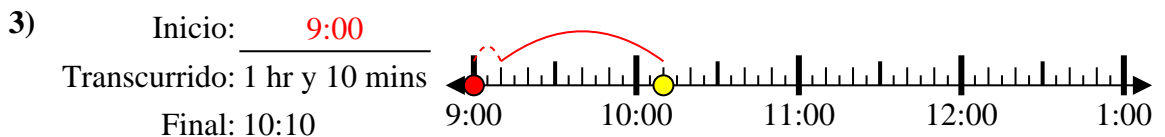
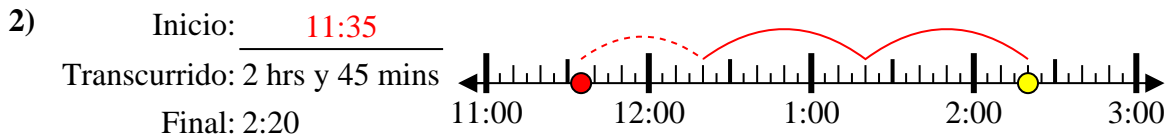
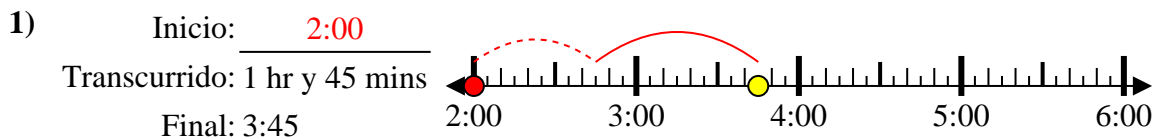
7. _____

8) Inicio: _____
 Transcurrido: 2 hrs y 45 mins
 Final: 12:20

8. _____



Resuelve cada problema.



Respuestas

1. 2:00

2. 11:35

3. 9:00

4. 11:45

5. 12:20

6. 5:25

7. 2:35

8. 9:35