



Resuelve cada problema.

Respuestas

1) Inicio: _____
 Transcurrido: 2 hrs y 50 mins
 Final: 5:40

1. _____

2) Inicio: _____
 Transcurrido: 1 hr y 10 mins
 Final: 10:20

2. _____

3) Inicio: _____
 Transcurrido: 1 hr y 15 mins
 Final: 8:20

3. _____

4) Inicio: _____
 Transcurrido: 1 hr y 15 mins
 Final: 4:15

4. _____

5) Inicio: _____
 Transcurrido: 1 hr y 40 mins
 Final: 8:55

5. _____

6) Inicio: _____
 Transcurrido: 2 hrs y 15 mins
 Final: 7:15

6. _____

7) Inicio: _____
 Transcurrido: 2 hrs y 45 mins
 Final: 3:45

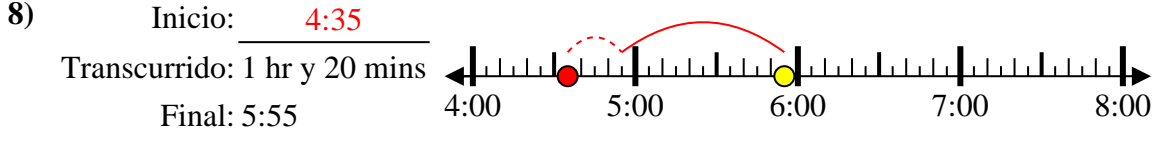
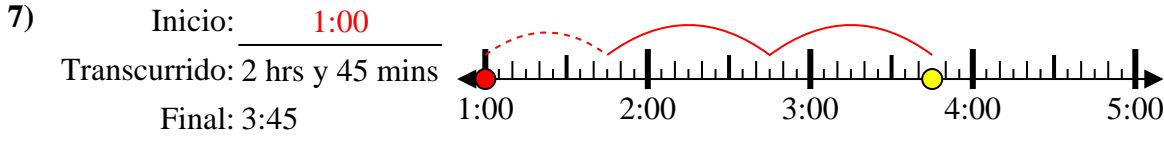
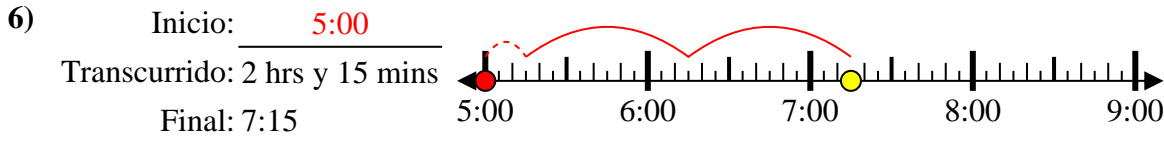
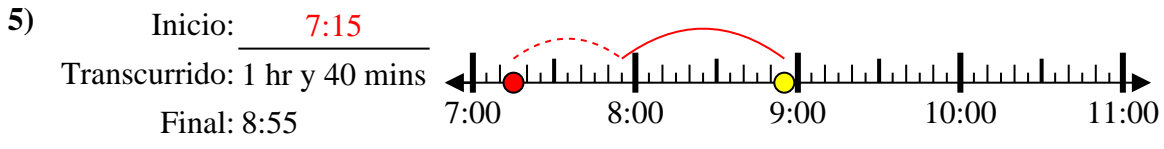
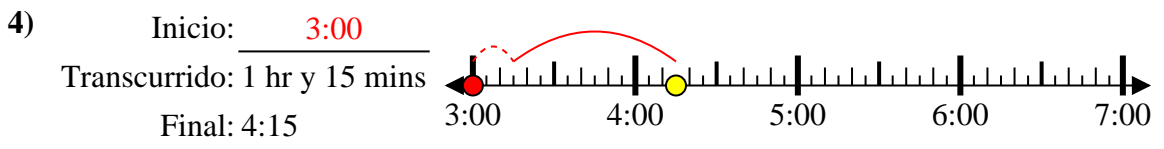
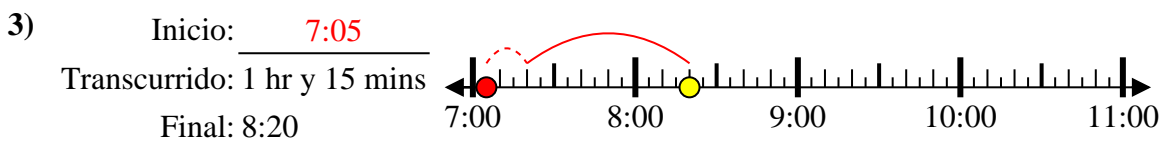
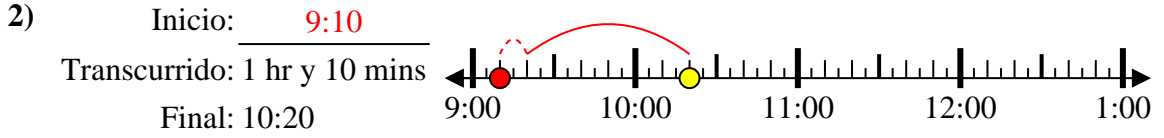
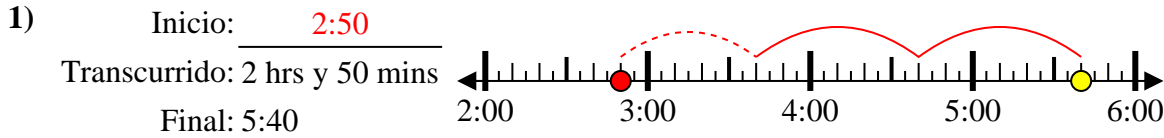
7. _____

8) Inicio: _____
 Transcurrido: 1 hr y 20 mins
 Final: 5:55

8. _____



Resuelve cada problema.



Respuestas

1. 2:50
2. 9:10
3. 7:05
4. 3:00
5. 7:15
6. 5:00
7. 1:00
8. 4:35