



**Resuelve cada problema.**

**Respuestas**

1) Inicio: \_\_\_\_\_  
 Transcurrido: 2 hrs y 30 mins  
 Final: 12:05

1. \_\_\_\_\_

2) Inicio: \_\_\_\_\_  
 Transcurrido: 1 hr y 45 mins  
 Final: 2:35

2. \_\_\_\_\_

3) Inicio: \_\_\_\_\_  
 Transcurrido: 1 hr y 25 mins  
 Final: 11:40

3. \_\_\_\_\_

4) Inicio: \_\_\_\_\_  
 Transcurrido: 1 hr y 45 mins  
 Final: 8:10

4. \_\_\_\_\_

5) Inicio: \_\_\_\_\_  
 Transcurrido: 1 hr y 15 mins  
 Final: 10:25

5. \_\_\_\_\_

6) Inicio: \_\_\_\_\_  
 Transcurrido: 2 hrs y 15 mins  
 Final: 2:00

6. \_\_\_\_\_

7) Inicio: \_\_\_\_\_  
 Transcurrido: 1 hr y 40 mins  
 Final: 2:00

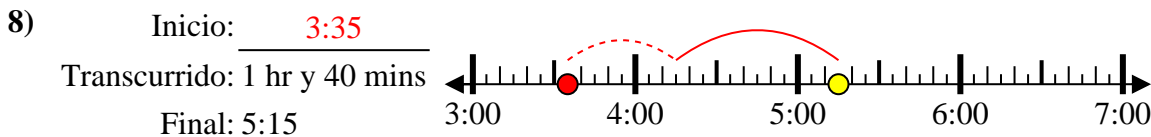
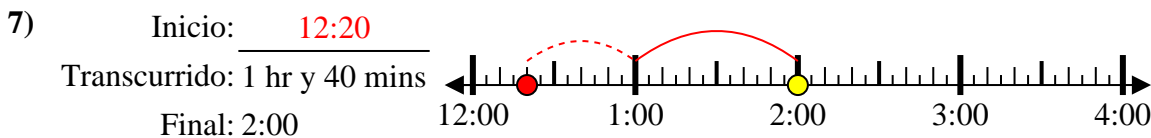
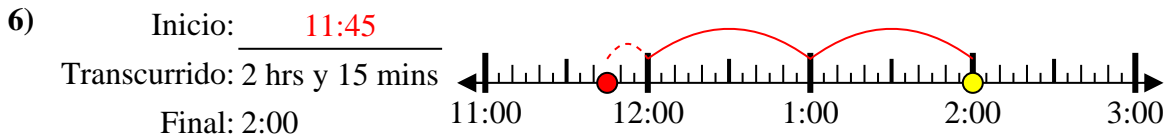
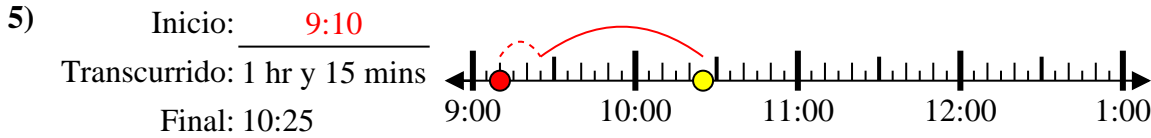
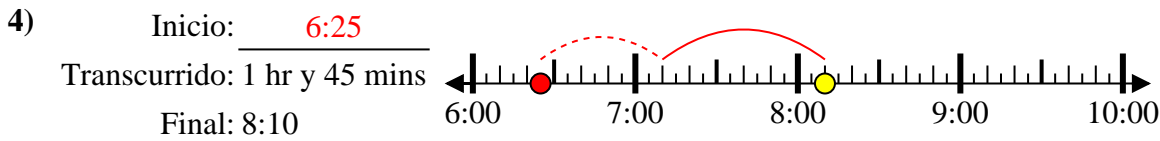
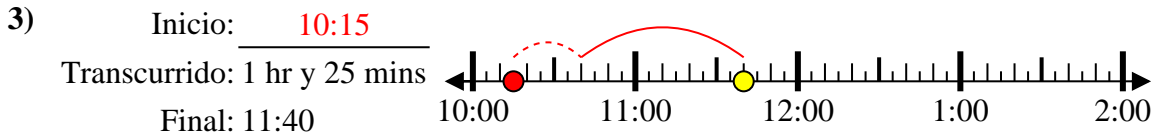
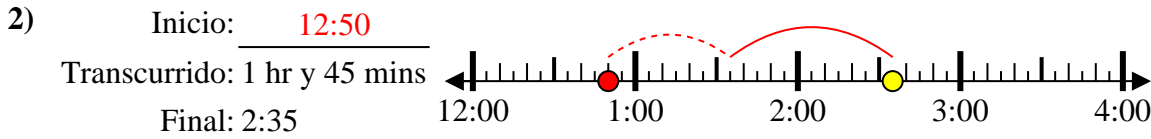
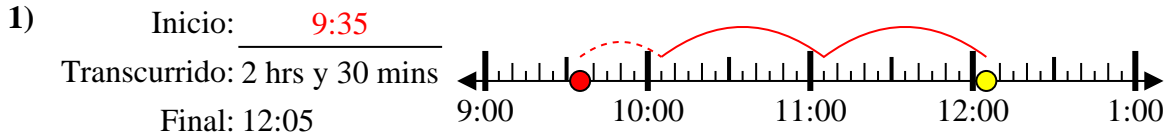
7. \_\_\_\_\_

8) Inicio: \_\_\_\_\_  
 Transcurrido: 1 hr y 40 mins  
 Final: 5:15

8. \_\_\_\_\_



Resuelve cada problema.



**Respuestas**

1. 9:35

2. 12:50

3. 10:15

4. 6:25

5. 9:10

6. 11:45

7. 12:20

8. 3:35