



Resuelve cada problema.

1) Inicio: _____
 Transcurrido: 2 hrs y 20 mins
 Final: 9:25

2) Inicio: _____
 Transcurrido: 2 hrs y 20 mins
 Final: 7:45

3) Inicio: _____
 Transcurrido: 1 hr y 35 mins
 Final: 5:50

4) Inicio: _____
 Transcurrido: 2 hrs y 40 mins
 Final: 2:45

5) Inicio: _____
 Transcurrido: 1 hr y 45 mins
 Final: 11:50

6) Inicio: _____
 Transcurrido: 2 hrs y 15 mins
 Final: 2:00

7) Inicio: _____
 Transcurrido: 1 hr y 40 mins
 Final: 7:05

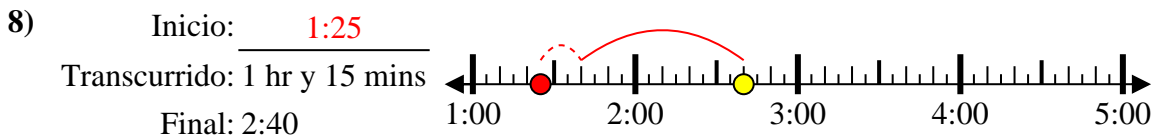
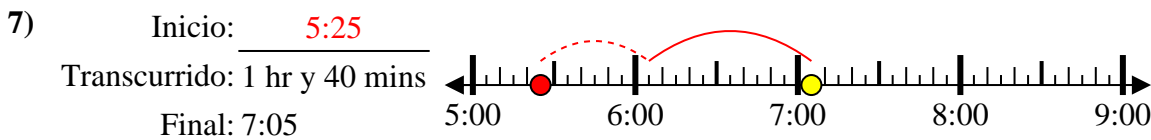
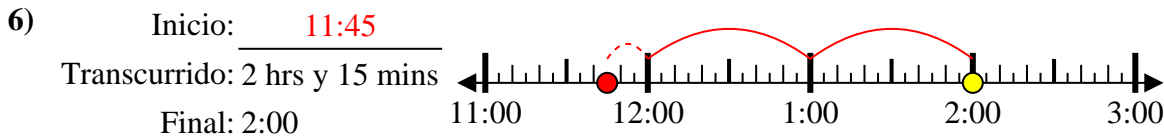
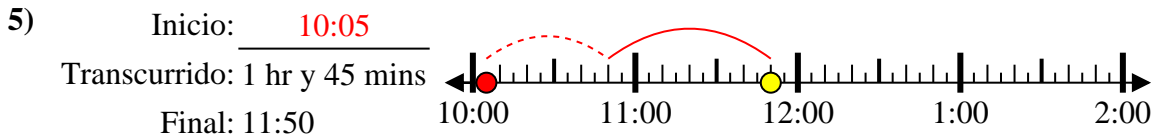
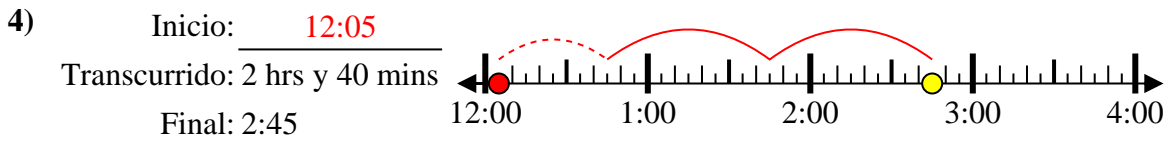
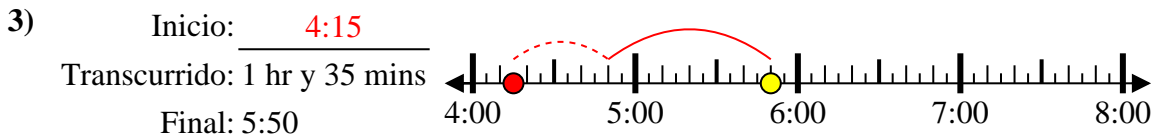
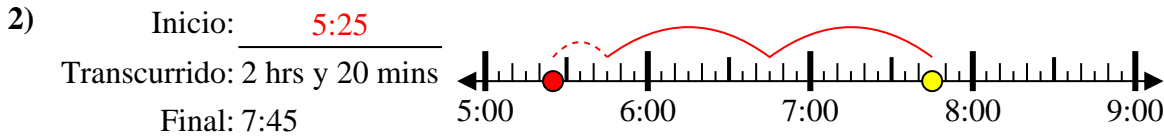
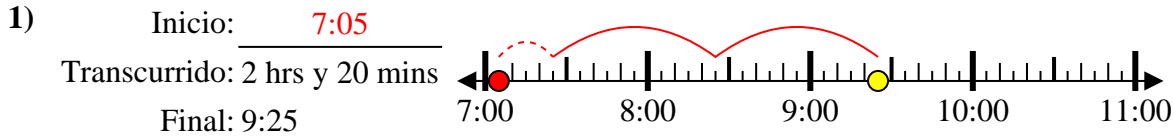
8) Inicio: _____
 Transcurrido: 1 hr y 15 mins
 Final: 2:40

Respuestas

1. _____
2. _____
3. _____
4. _____
5. _____
6. _____
7. _____
8. _____



Resuelve cada problema.



Respuestas

1. 7:05

2. 5:25

3. 4:15

4. 12:05

5. 10:05

6. 11:45

7. 5:25

8. 1:25