



**Resuelve cada problema.**

**Respuestas**

1) Inicio: \_\_\_\_\_  
 Transcurrido: 2 hrs y 10 mins  
 Final: 3:20

1. \_\_\_\_\_

2) Inicio: \_\_\_\_\_  
 Transcurrido: 2 hrs y 15 mins  
 Final: 11:15

2. \_\_\_\_\_

3) Inicio: \_\_\_\_\_  
 Transcurrido: 1 hr y 30 mins  
 Final: 3:45

3. \_\_\_\_\_

4) Inicio: \_\_\_\_\_  
 Transcurrido: 2 hrs y 25 mins  
 Final: 11:50

4. \_\_\_\_\_

5) Inicio: \_\_\_\_\_  
 Transcurrido: 1 hr y 25 mins  
 Final: 12:45

5. \_\_\_\_\_

6) Inicio: \_\_\_\_\_  
 Transcurrido: 2 hrs y 45 mins  
 Final: 2:55

6. \_\_\_\_\_

7) Inicio: \_\_\_\_\_  
 Transcurrido: 1 hr y 15 mins  
 Final: 8:35

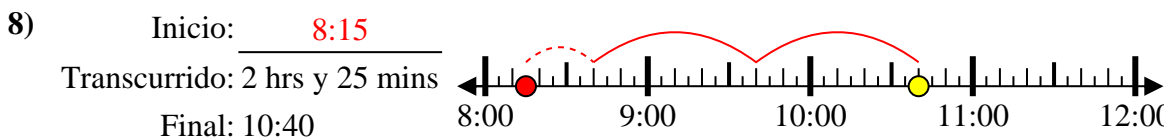
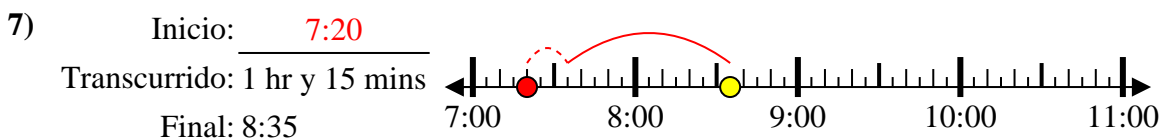
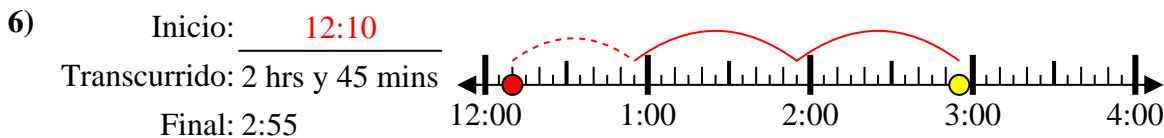
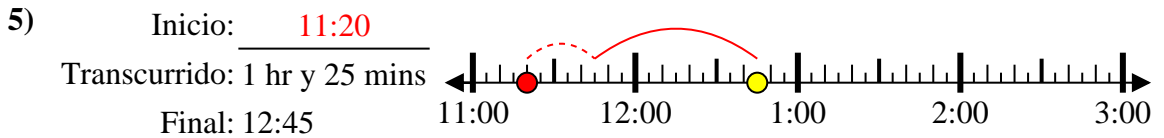
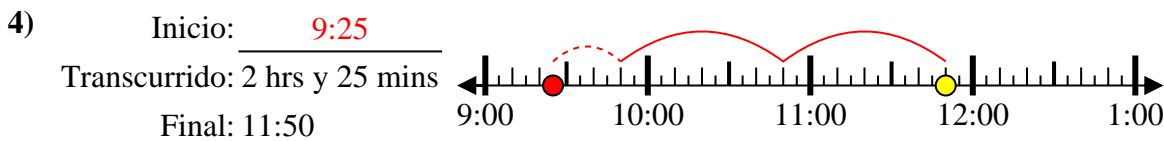
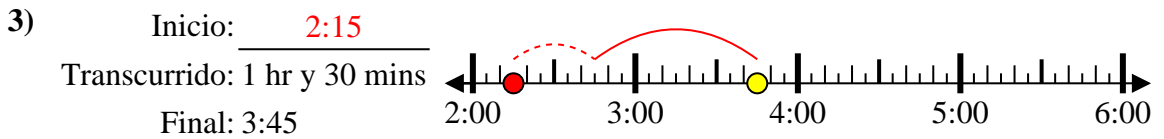
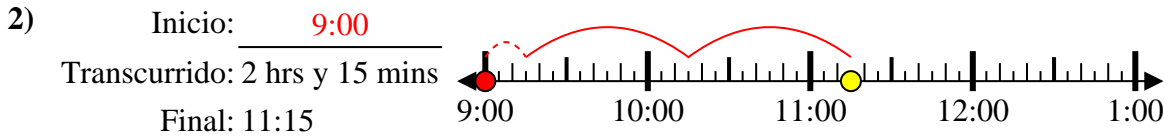
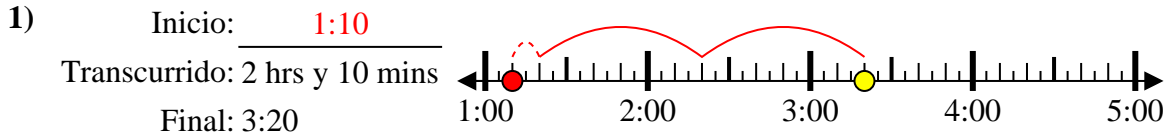
7. \_\_\_\_\_

8) Inicio: \_\_\_\_\_  
 Transcurrido: 2 hrs y 25 mins  
 Final: 10:40

8. \_\_\_\_\_



Resuelve cada problema.



**Respuestas**

1. 1:10
2. 9:00
3. 2:15
4. 9:25
5. 11:20
6. 12:10
7. 7:20
8. 8:15