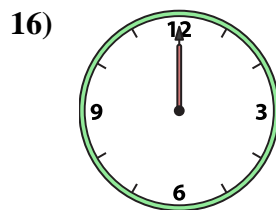
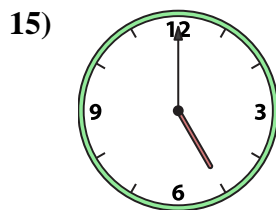
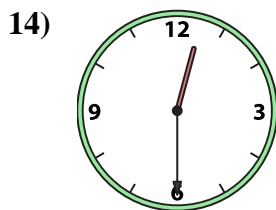
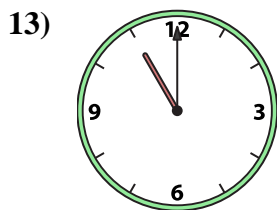
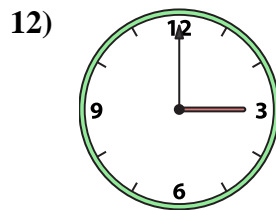
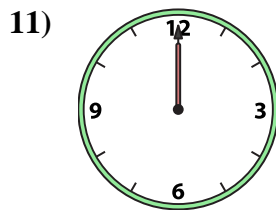
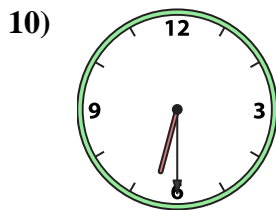
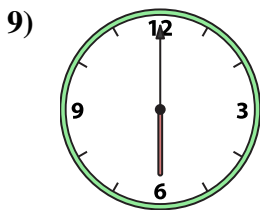
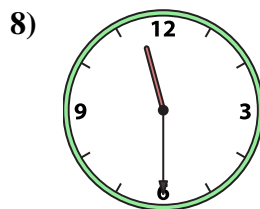
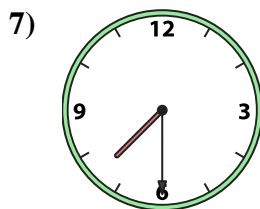
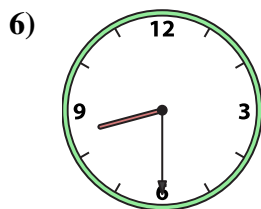
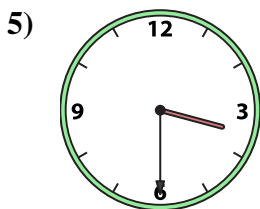
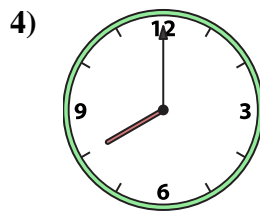
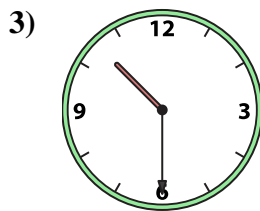
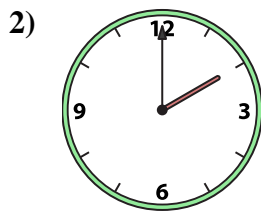





Emparejar el reloj analógico con el reloj digital correspondiente.

Respuestas



1. _____
2. _____
3. _____
4. _____
5. _____
6. _____
7. _____
8. _____
9. _____
10. _____
11. _____
12. _____
13. _____
14. _____
15. _____
16. _____

A. 10:30

B. 2:00

C. 7:30

D. 12:30

E. 6:30

F. 1:00

G. 12:00

H. 6:00

I. 3:30

J. 3:00

K. 11:30

L. 5:00

M. 8:00

N. 12:00

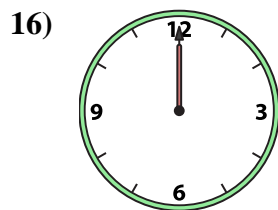
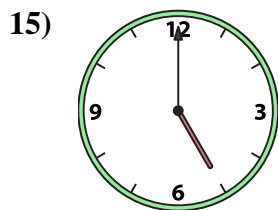
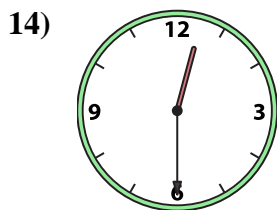
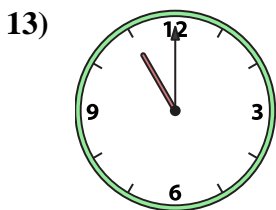
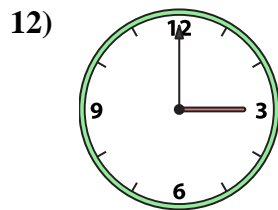
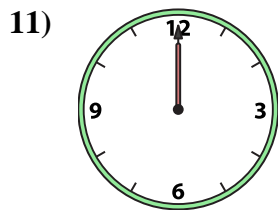
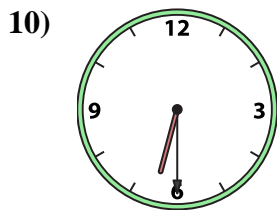
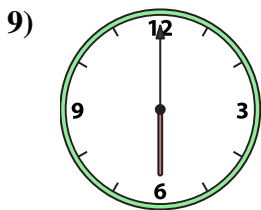
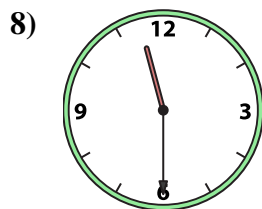
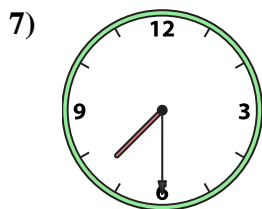
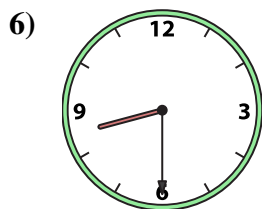
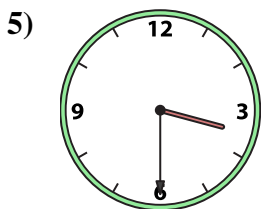
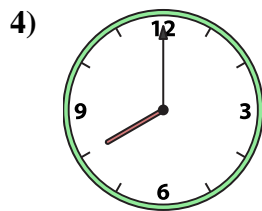
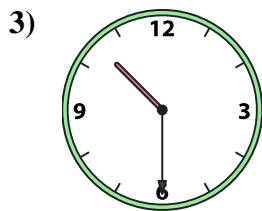
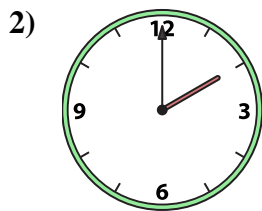

O. 11:00

P. 8:30



Emparejar el reloj analógico con el reloj digital correspondiente.

Respuestas



A. 10:30

B. 2:00

C. 7:30

D. 12:30

E. 6:30

F. 1:00

G. 12:00

H. 6:00

I. 3:30

J. 3:00

K. 11:30

L. 5:00

M. 8:00

N. 12:00

O. 11:00

P. 8:30

- 1. **F**
- 2. **B**
- 3. **A**
- 4. **M**
- 5. **I**
- 6. **P**
- 7. **C**
- 8. **K**
- 9. **H**
- 10. **E**
- 11. **N**
- 12. **J**
- 13. **O**
- 14. **D**
- 15. **L**
- 16. **G**