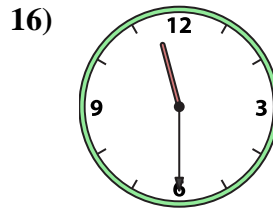
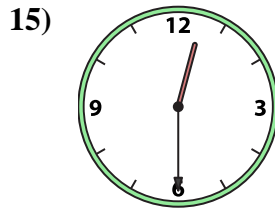
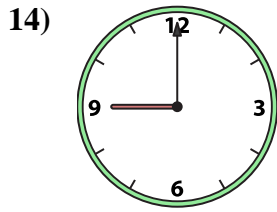
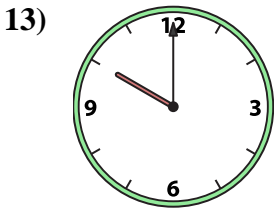
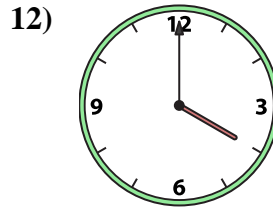
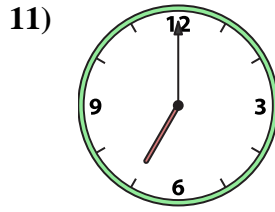
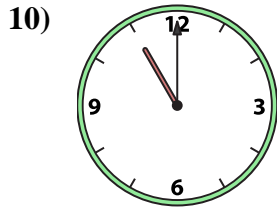
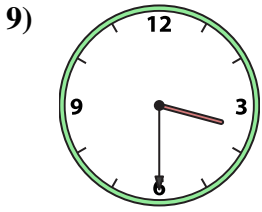
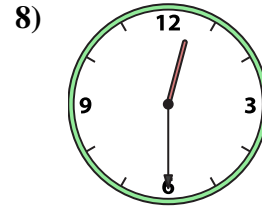
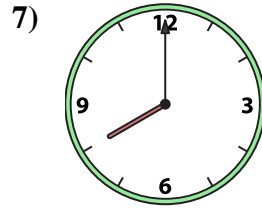
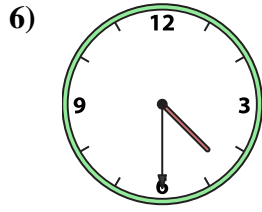
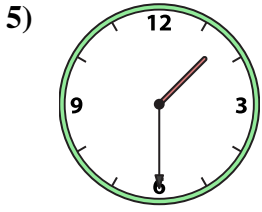
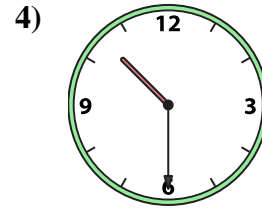
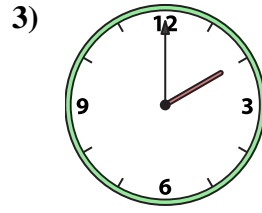
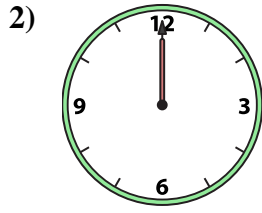
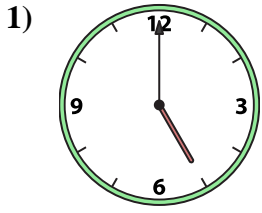




Emparejar el reloj analógico con el reloj digital correspondiente.

Respuestas



A.

B.

C.

D.

E.

F.

G.

H.

I.

J.

K.

L.

M.

N.

O.

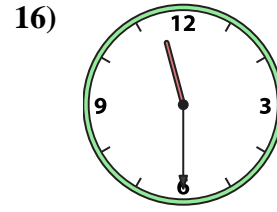
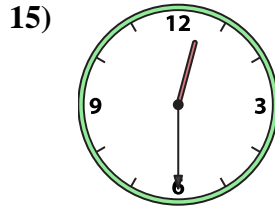
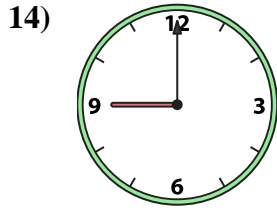
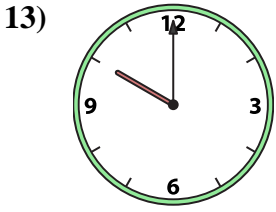
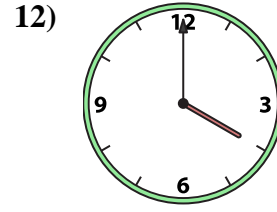
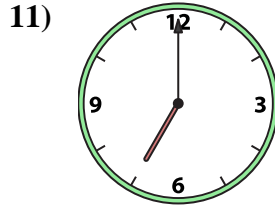
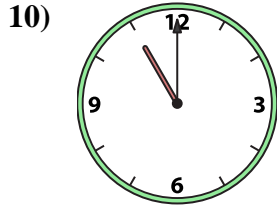
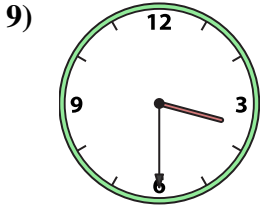
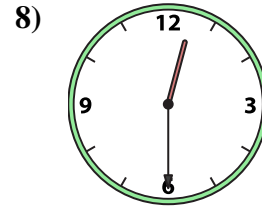
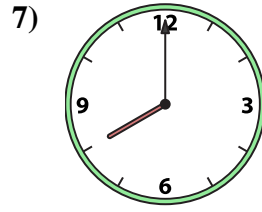
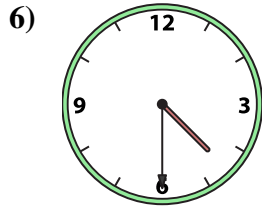
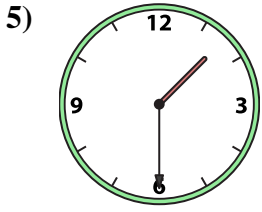
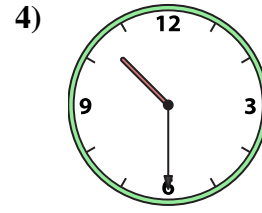
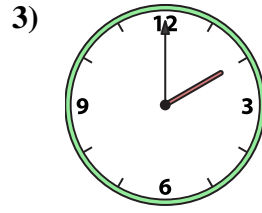
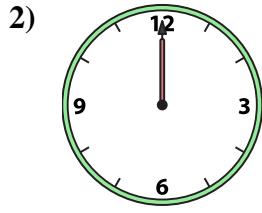
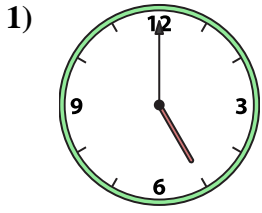
P.

1. _____
2. _____
3. _____
4. _____
5. _____
6. _____
7. _____
8. _____
9. _____
10. _____
11. _____
12. _____
13. _____
14. _____
15. _____
16. _____



Emparejar el reloj analógico con el reloj digital correspondiente.

Respuestas



A. 11:30

B. 9:00

C. 3:30

D. 12:30

E. 1:30

F. 11:00

G. 7:00

H. 4:30

I. 5:00

J. 10:00

K. 4:00

L. 8:00

M. 2:00

N. 12:00

O. 10:30

P. 12:30

- 1. I
- 2. N
- 3. M
- 4. O
- 5. E
- 6. H
- 7. L
- 8. P
- 9. C
- 10. F
- 11. G
- 12. K
- 13. J
- 14. B
- 15. D
- 16. A