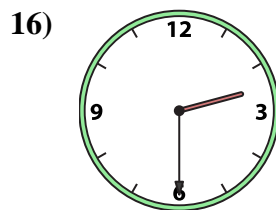
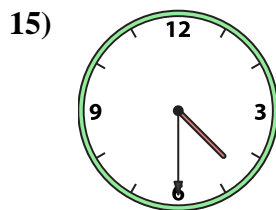
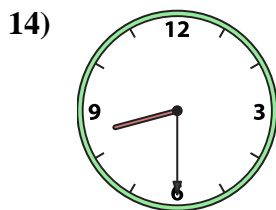
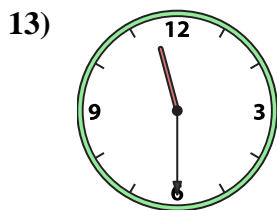

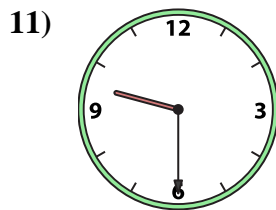
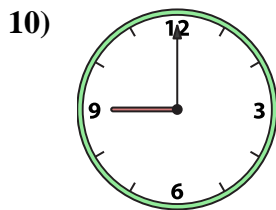
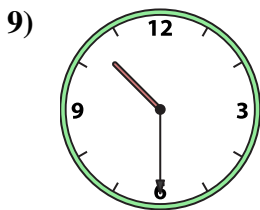
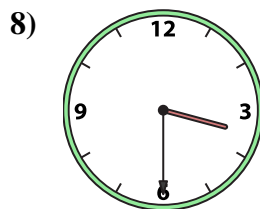
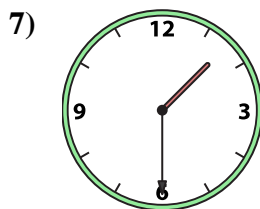
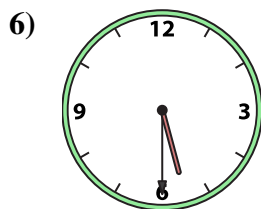
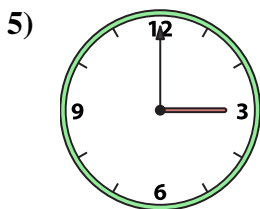
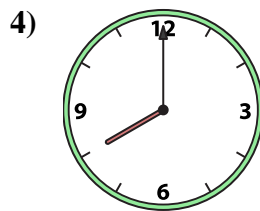
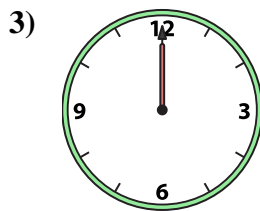
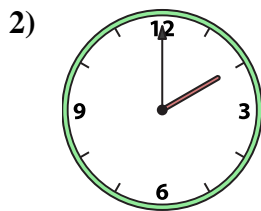
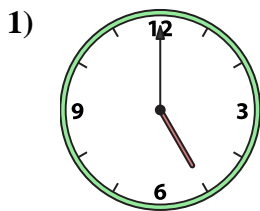




Emparejar el reloj analógico con el reloj digital correspondiente.

Respuestas



A. 12:00

B. 8:00

C. 1:30

D. 3:00

E. 2:30

F. 4:30

G. 2:00

H. 10:30

I. 9:00

J. 10:00

K. 5:30

L. 9:30

M. 8:30

N. 5:00

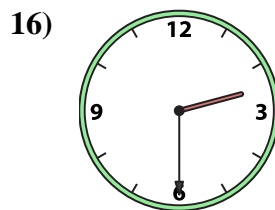
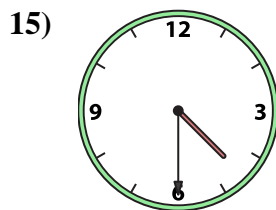
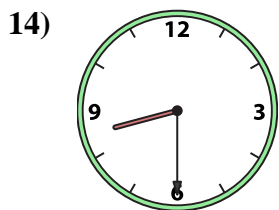
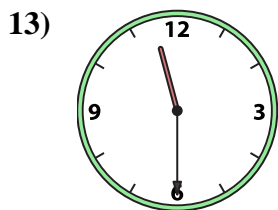
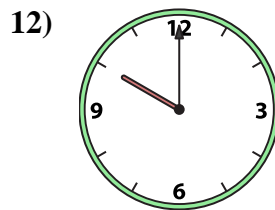
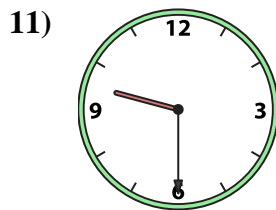
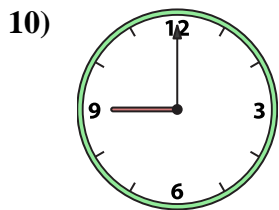
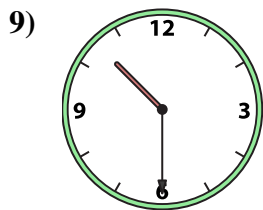
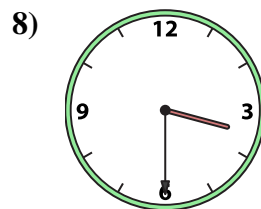
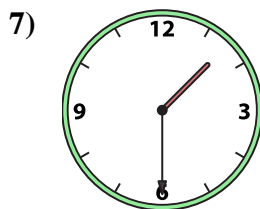
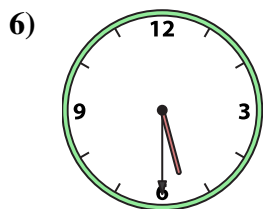
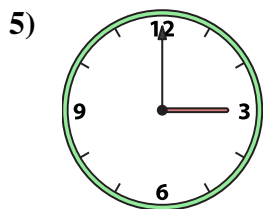
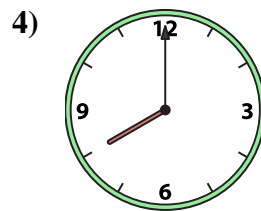
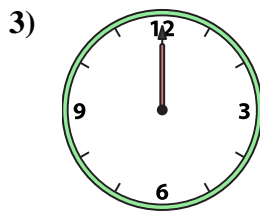

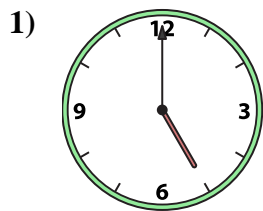
O. 11:30

P. 3:30

1. _____
2. _____
3. _____
4. _____
5. _____
6. _____
7. _____
8. _____
9. _____
10. _____
11. _____
12. _____
13. _____
14. _____
15. _____
16. _____



Emparejar el reloj analógico con el reloj digital correspondiente.



A. 12:00

B. 8:00

C. 1:30

D. 3:00

E. 2:30

F. 4:30

G. 2:00

H. 10:30

I. 9:00

J. 10:00

K. 5:30

L. 9:30

M. 8:30

N. 5:00

O. 11:30

P. 3:30

Respuestas

1. **N**

2. **G**

3. **A**

4. **B**

5. **D**

6. **K**

7. **C**

8. **P**

9. **H**

10. **I**

11. **L**

12. **J**

13. **O**

14. **M**

15. **F**

16. **E**