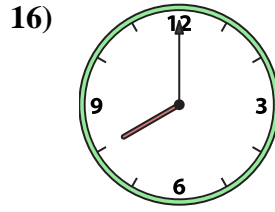
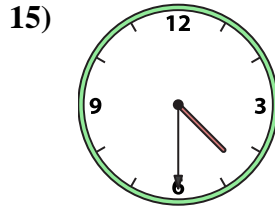
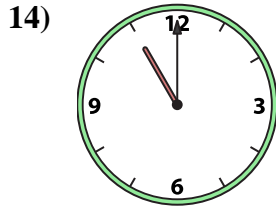
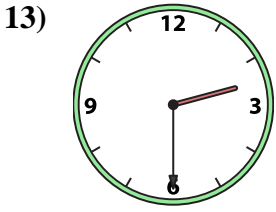
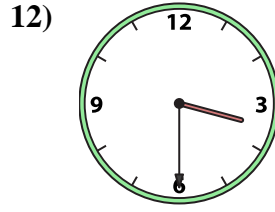
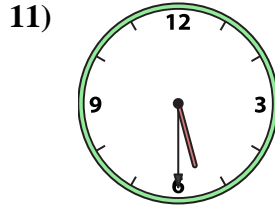
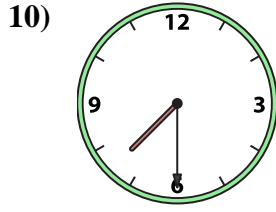

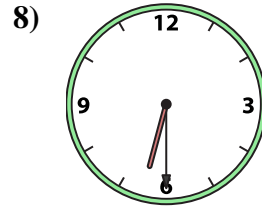
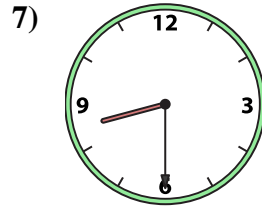
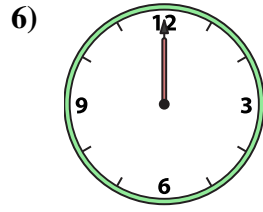
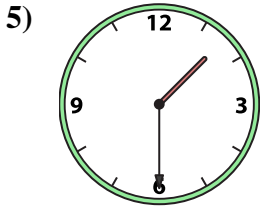
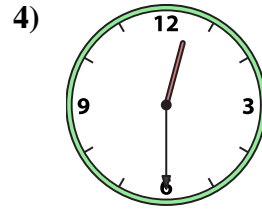
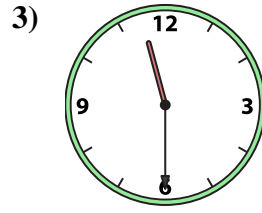
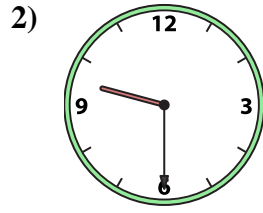





Emparejar el reloj analógico con el reloj digital correspondiente.

Respuestas



- 1. _____
- 2. _____
- 3. _____
- 4. _____
- 5. _____
- 6. _____
- 7. _____
- 8. _____
- 9. _____
- 10. _____
- 11. _____
- 12. _____
- 13. _____
- 14. _____
- 15. _____
- 16. _____

A.

B.

C.

D.

E.

F.

G.

H.

I.

J.

K.

L.

M.

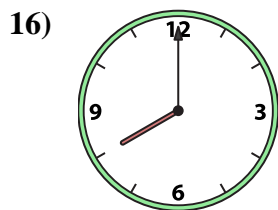
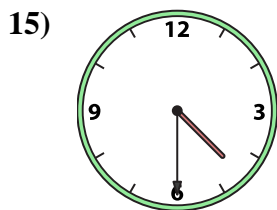
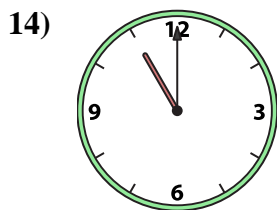
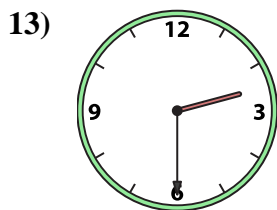
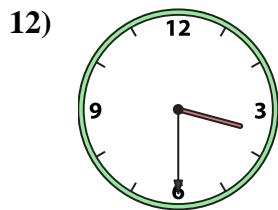
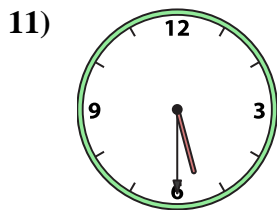
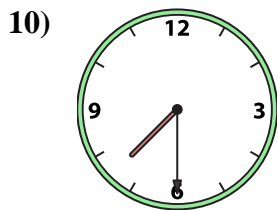

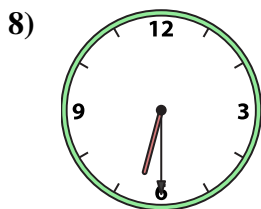
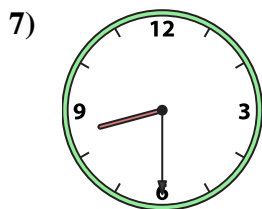
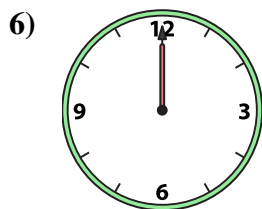
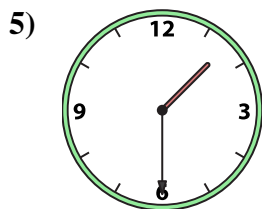
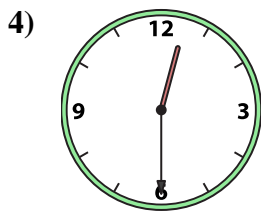
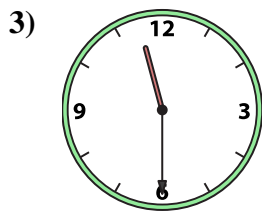
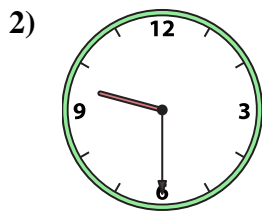
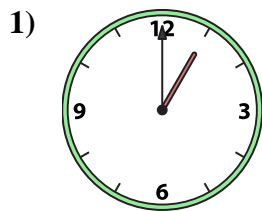
N.

O.

P.



Emparejar el reloj analógico con el reloj digital correspondiente.



A. 9:30

B. 5:30

C. 4:30

D. 11:30

E. 3:30

F. 1:30

G. 8:00

H. 1:00

I. 6:30

J. 8:30

K. 12:30

L. 12:00

M. 2:30

N. 11:00

O. 7:30

P. 4:00

Respuestas

1. **H**

2. **A**

3. **D**

4. **K**

5. **F**

6. **L**

7. **J**

8. **I**

9. **P**

10. **O**

11. **B**

12. **E**

13. **M**

14. **N**

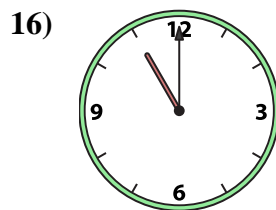
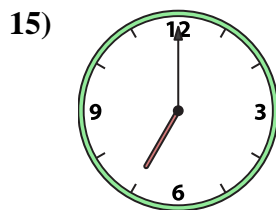
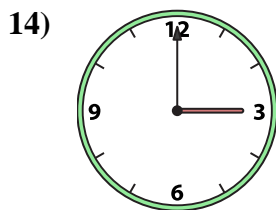
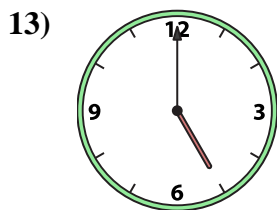
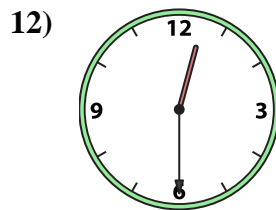
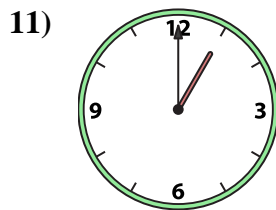
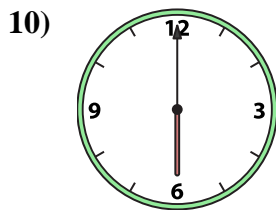
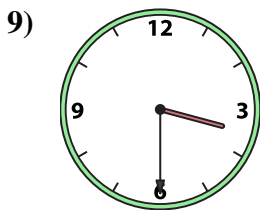
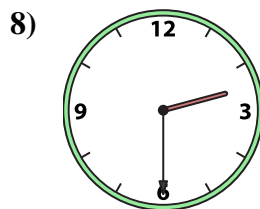
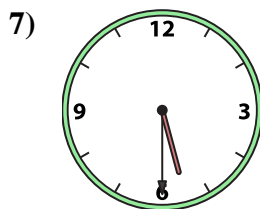
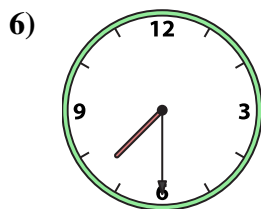
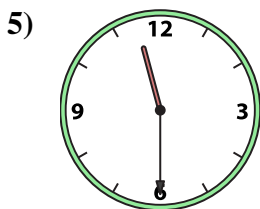
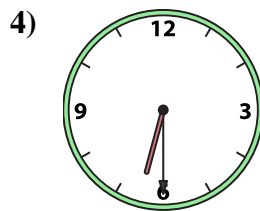
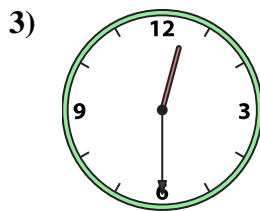
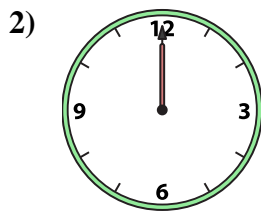
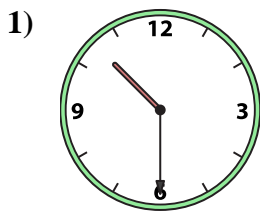
15. **C**

16. **G**



Emparejar el reloj analógico con el reloj digital correspondiente.

Respuestas



1. _____
2. _____
3. _____
4. _____
5. _____
6. _____
7. _____
8. _____
9. _____
10. _____
11. _____
12. _____
13. _____
14. _____
15. _____
16. _____

A. 2:30

B. 10:30

C. 7:30

D. 6:00

E. 3:00

F. 5:30

G. 1:00

H. 5:00

I. 7:00

J. 12:30

K. 11:00

L. 6:30

M. 12:30

N. 11:30

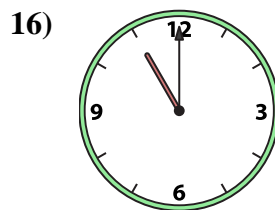
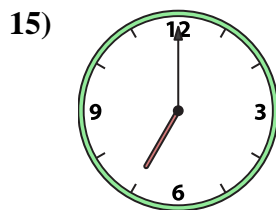
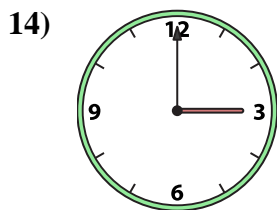
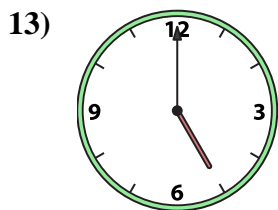
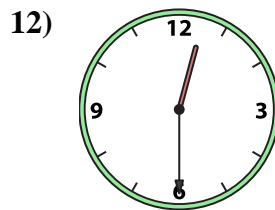
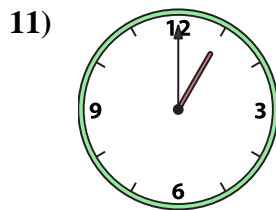
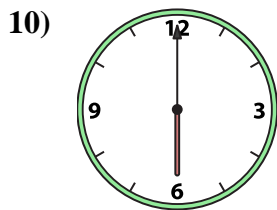
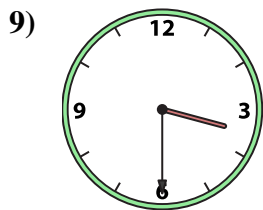
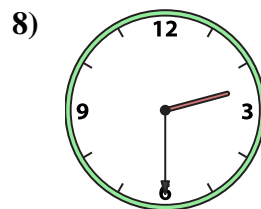
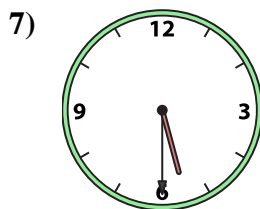
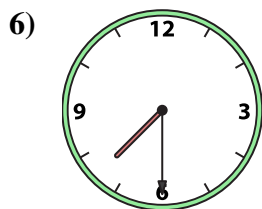
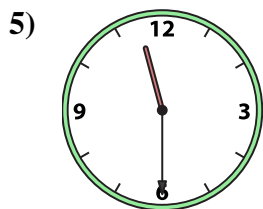
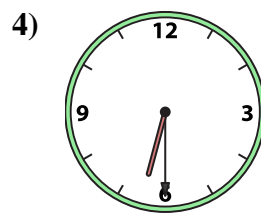
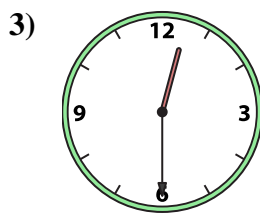
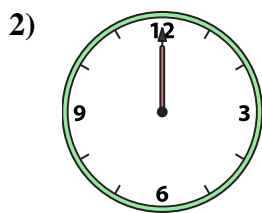
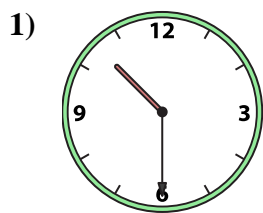
O. 3:30

P. 12:00



Emparejar el reloj analógico con el reloj digital correspondiente.

Respuestas



A. 2:30

B. 10:30

C. 7:30

D. 6:00

E. 3:00

F. 5:30

G. 1:00

H. 5:00

I. 7:00

J. 12:30

K. 11:00

L. 6:30

M. 12:30

N. 11:30

O. 3:30

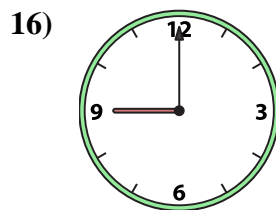
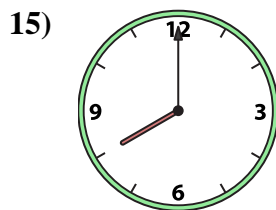
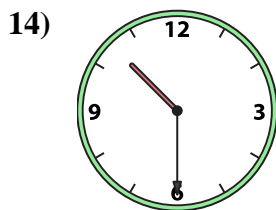
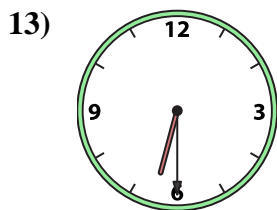
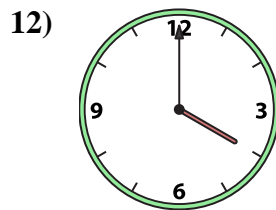
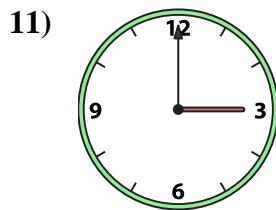
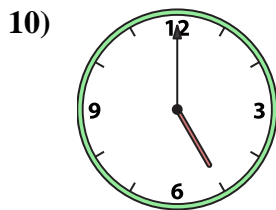
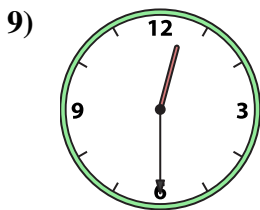
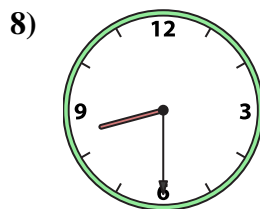
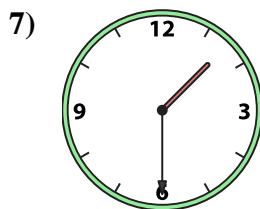
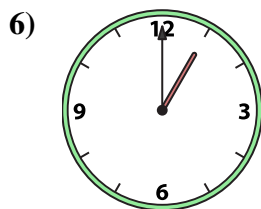
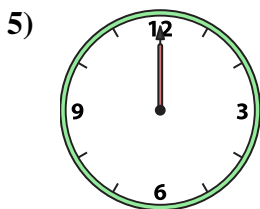
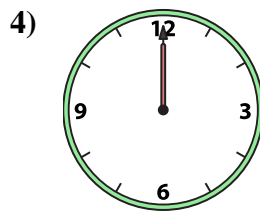
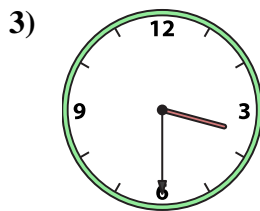
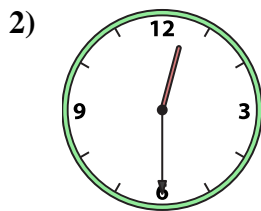
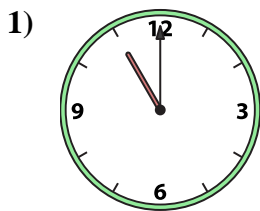
P. 12:00

- 1. **B**
- 2. **P**
- 3. **J**
- 4. **L**
- 5. **N**
- 6. **C**
- 7. **F**
- 8. **A**
- 9. **O**
- 10. **D**
- 11. **G**
- 12. **M**
- 13. **H**
- 14. **E**
- 15. **I**
- 16. **K**



Emparejar el reloj analógico con el reloj digital correspondiente.

Respuestas



A. 3:30

B. 9:00

C. 12:00

D. 12:00

E. 10:30

F. 12:30

G. 8:00

H. 11:00

I. 5:00

J. 1:30

K. 12:30

L. 4:00

M. 3:00

N. 6:30

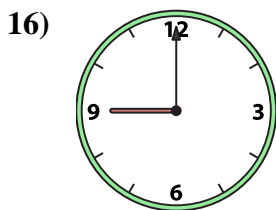
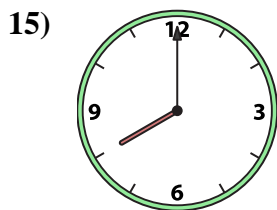
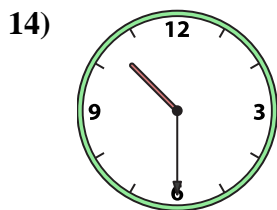
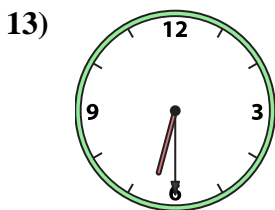
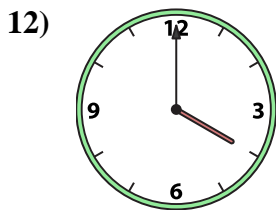
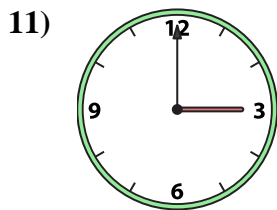
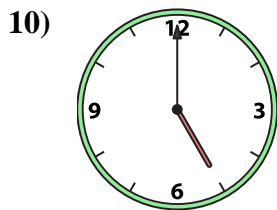
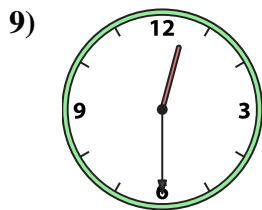
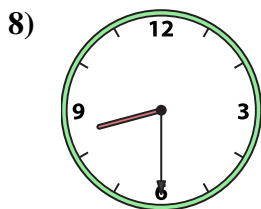
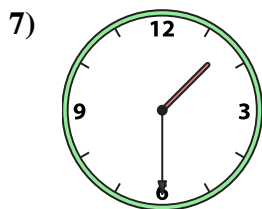
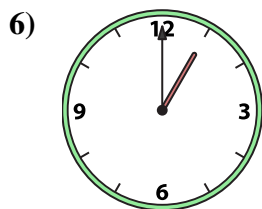
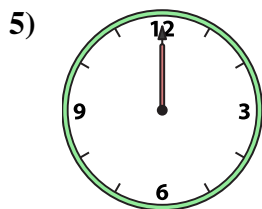
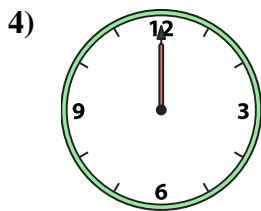
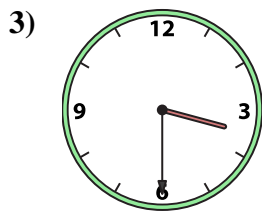
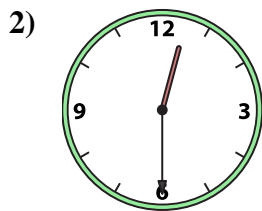
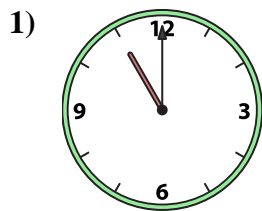
O. 8:30

P. 1:00

1. _____
2. _____
3. _____
4. _____
5. _____
6. _____
7. _____
8. _____
9. _____
10. _____
11. _____
12. _____
13. _____
14. _____
15. _____
16. _____



Emparejar el reloj analógico con el reloj digital correspondiente.



A. 3:30

B. 9:00

C. 12:00

D. 12:00

E. 10:30

F. 12:30

G. 8:00

H. 11:00

I. 5:00

J. 1:30

K. 12:30

L. 4:00

M. 3:00

N. 6:30

O. 8:30

P. 1:00

Respuestas

1. **H**

2. **F**

3. **A**

4. **C**

5. **D**

6. **P**

7. **J**

8. **O**

9. **K**

10. **I**

11. **M**

12. **L**

13. **N**

14. **E**

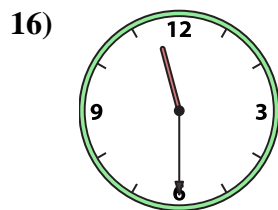
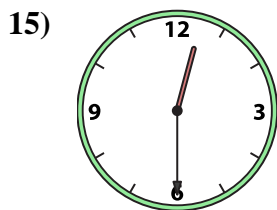
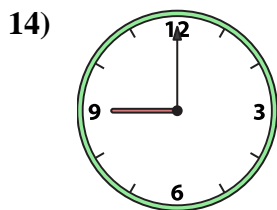


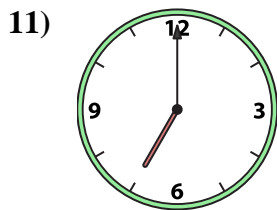
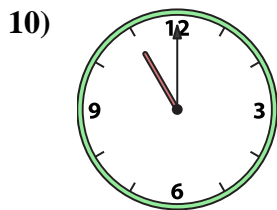
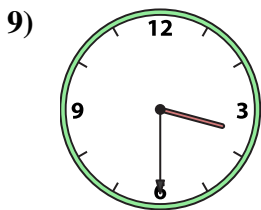
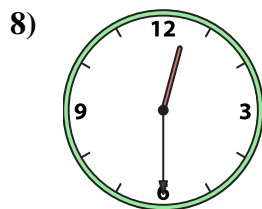

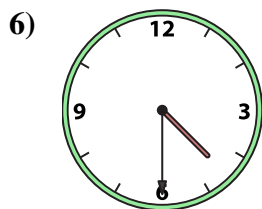
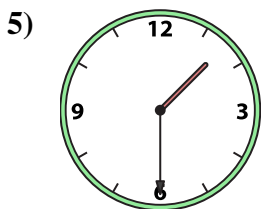
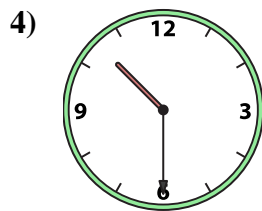
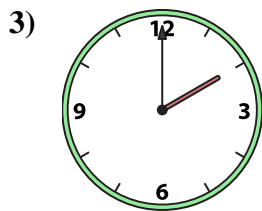
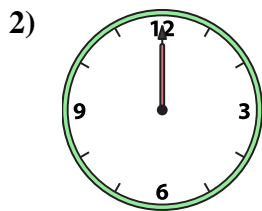
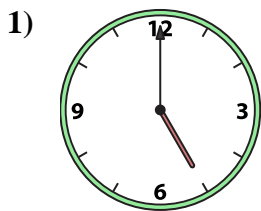
15. **G**

16. **B**



Emparejar el reloj analógico con el reloj digital correspondiente.

Respuestas



1. _____

2. _____

3. _____

4. _____

5. _____

6. _____

7. _____

8. _____

9. _____

10. _____

11. _____

12. _____

13. _____

14. _____

15. _____

16. _____

A. 11:30

B. 9:00

C. 3:30

D. 12:30

E. 1:30

F. 11:00

G. 7:00

H. 4:30

I. 5:00

J. 10:00

K. 4:00

L. 8:00

M. 2:00

N. 12:00

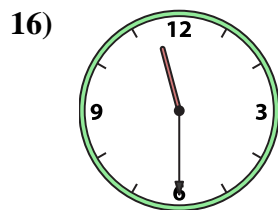
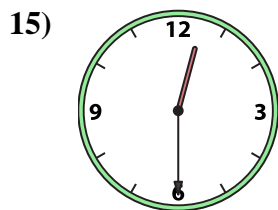
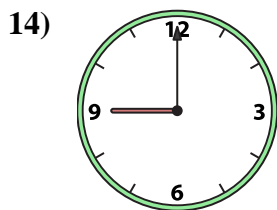


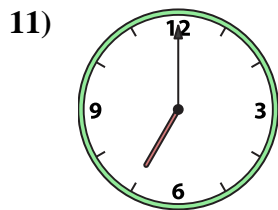
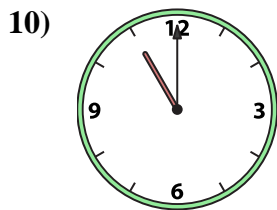
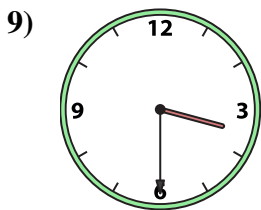
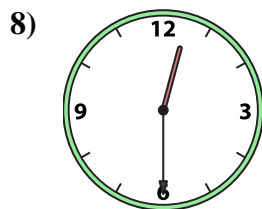

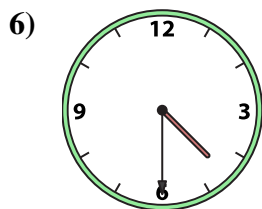
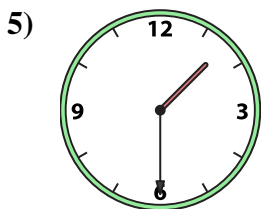
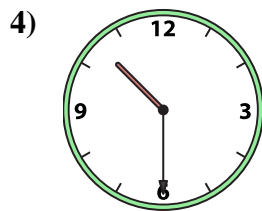
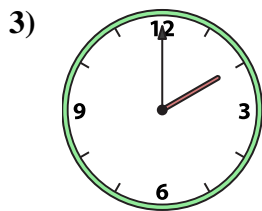
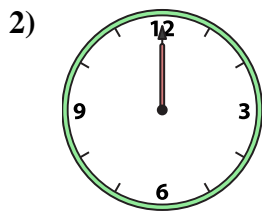
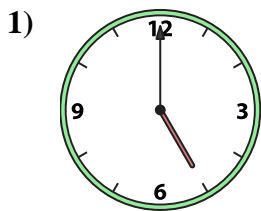
O. 10:30

P. 12:30



Emparejar el reloj analógico con el reloj digital correspondiente.

Respuestas



A. 11:30

B. 9:00

C. 3:30

D. 12:30

E. 1:30

F. 11:00

G. 7:00

H. 4:30

I. 5:00

J. 10:00

K. 4:00

L. 8:00

M. 2:00

N. 12:00

O. 10:30

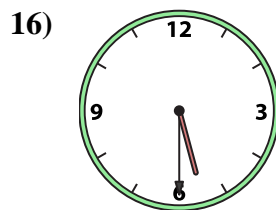
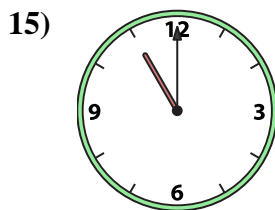
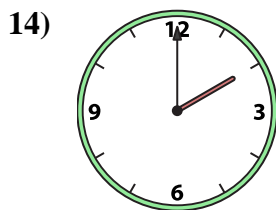
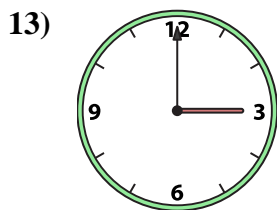
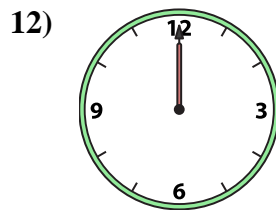
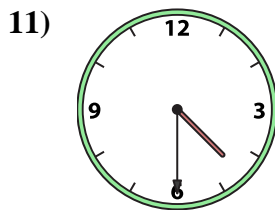
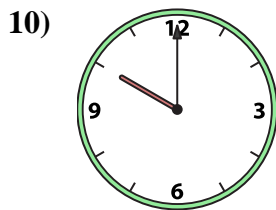
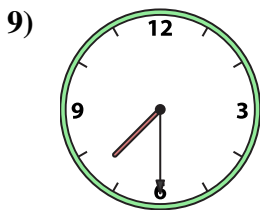
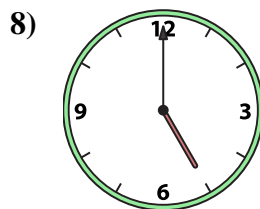
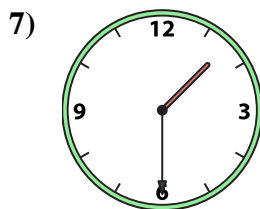
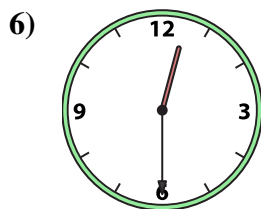
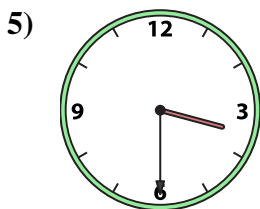
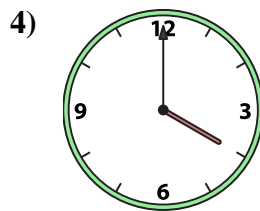
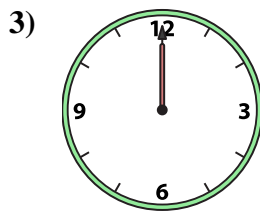
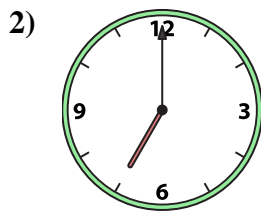

P. 12:30

- 1. I
- 2. N
- 3. M
- 4. O
- 5. E
- 6. H
- 7. L
- 8. P
- 9. C
- 10. F
- 11. G
- 12. K
- 13. J
- 14. B
- 15. D
- 16. A



Emparejar el reloj analógico con el reloj digital correspondiente.

Respuestas



A. 11:00

B. 1:00

C. 5:00

D. 4:30

E. 4:00

F. 3:30

G. 5:30

H. 7:30

I. 12:30

J. 2:00

K. 10:00

L. 7:00

M. 12:00

N. 1:30

O. 3:00

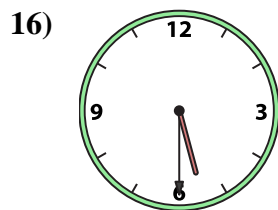
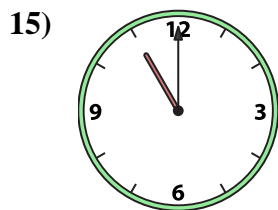
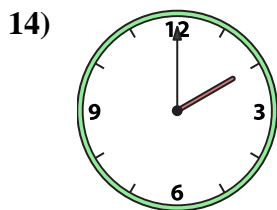
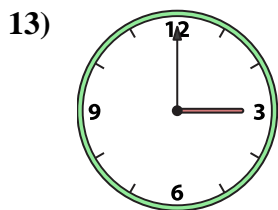
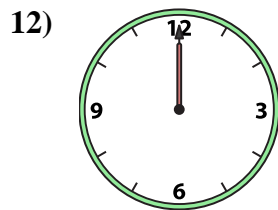
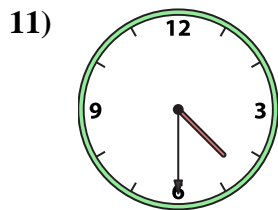
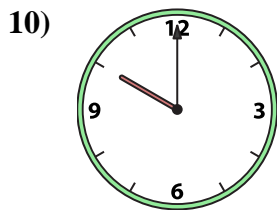
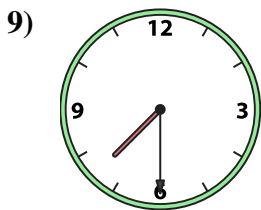
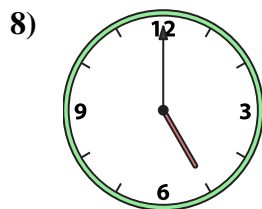
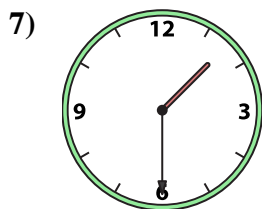
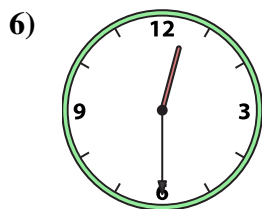
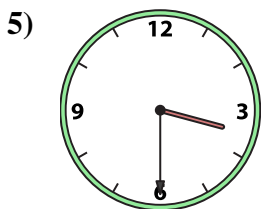
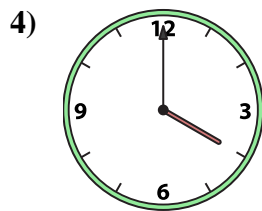
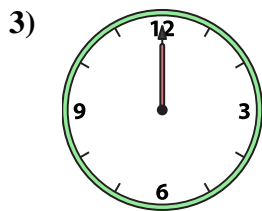
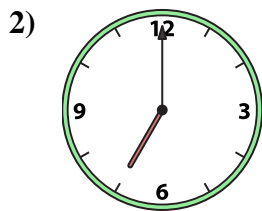

P. 12:00

1. _____
2. _____
3. _____
4. _____
5. _____
6. _____
7. _____
8. _____
9. _____
10. _____
11. _____
12. _____
13. _____
14. _____
15. _____
16. _____



Emparejar el reloj analógico con el reloj digital correspondiente.

Respuestas



A. 11:00

B. 1:00

C. 5:00

D. 4:30

E. 4:00

F. 3:30

G. 5:30

H. 7:30

I. 12:30

J. 2:00

K. 10:00

L. 7:00

M. 12:00

N. 1:30

O. 3:00

P. 12:00

1. **B**

2. **L**

3. **M**

4. **E**

5. **F**

6. **I**

7. **N**

8. **C**

9. **H**

10. **K**

11. **D**

12. **P**

13. **O**

14. **J**

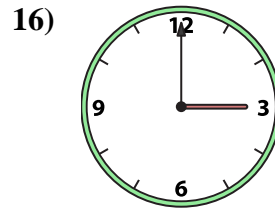
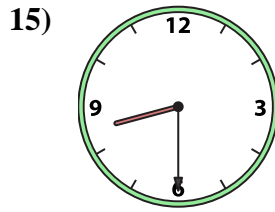
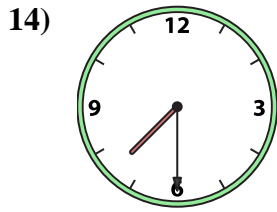
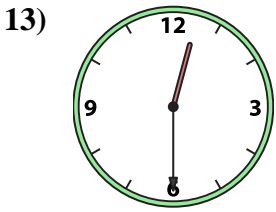
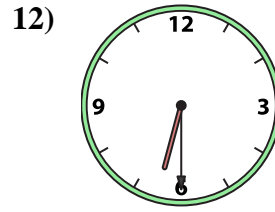
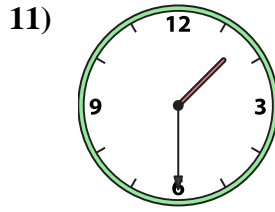
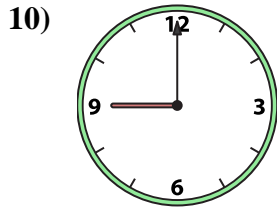
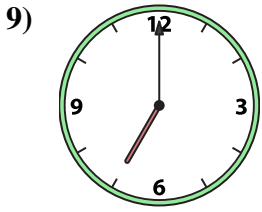
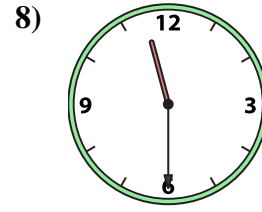
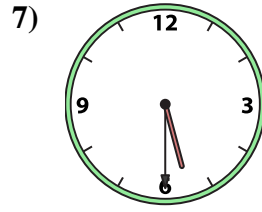
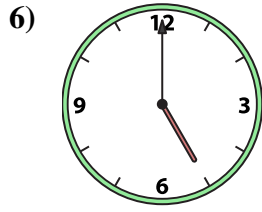
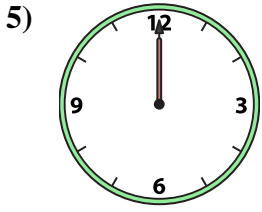
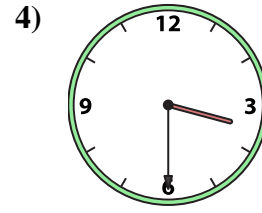
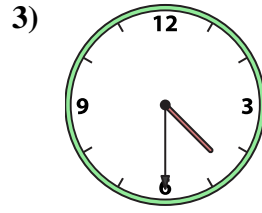
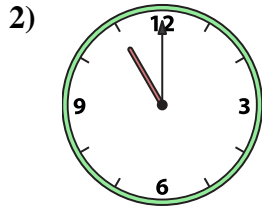
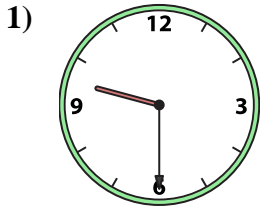
15. **A**

16. **G**



Emparejar el reloj analógico con el reloj digital correspondiente.

Respuestas



A.

B.

C.

D.

E.

F.

G.

H.

I.

J.

K.

L.

M.

N.

O.

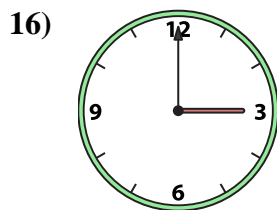
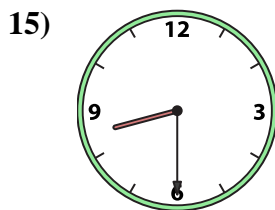
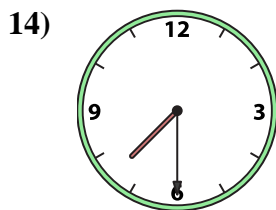
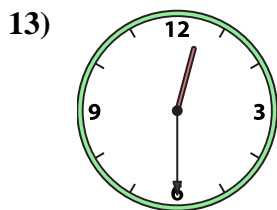
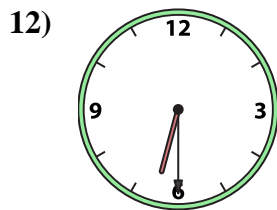
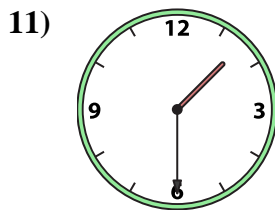
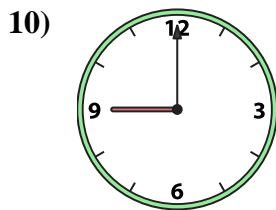
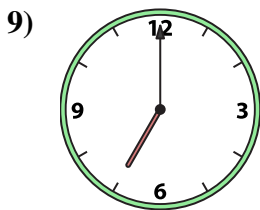
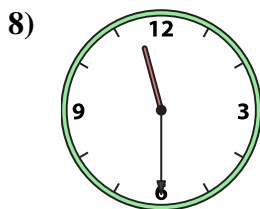
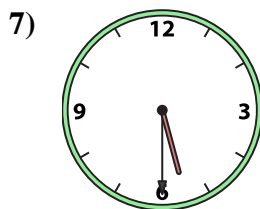

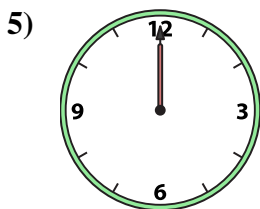
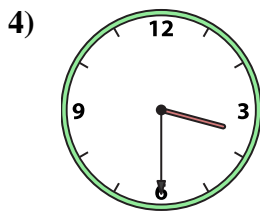
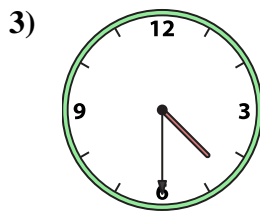
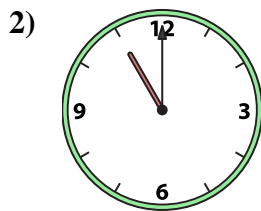
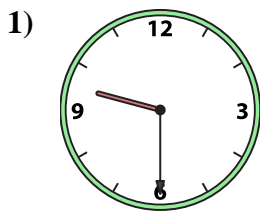
P.

1. _____
2. _____
3. _____
4. _____
5. _____
6. _____
7. _____
8. _____
9. _____
10. _____
11. _____
12. _____
13. _____
14. _____
15. _____
16. _____



Emparejar el reloj analógico con el reloj digital correspondiente.

Respuestas



A. 5:30

B. 3:00

C. 3:30

D. 12:00

E. 6:30

F. 7:30

G. 9:30

H. 4:30

I. 8:30

J. 5:00

K. 9:00

L. 11:00

M. 7:00

N. 1:30

O. 12:30

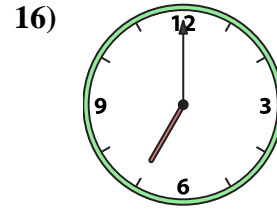
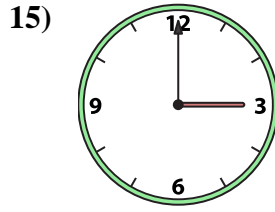
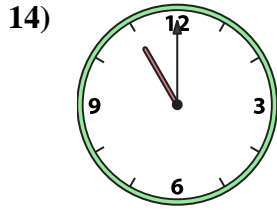
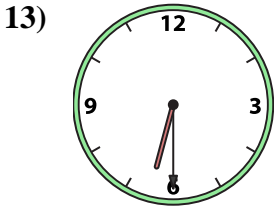
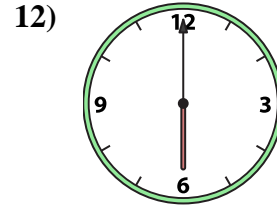
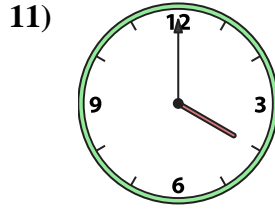
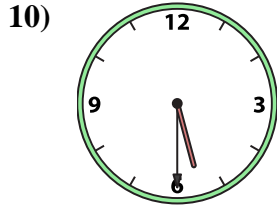

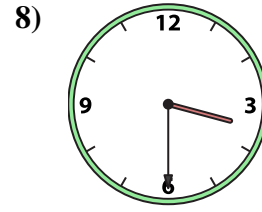
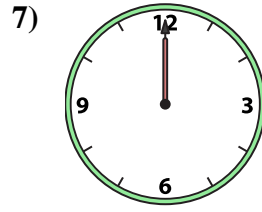
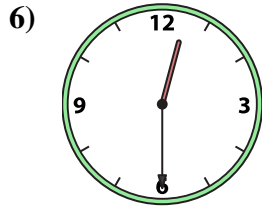
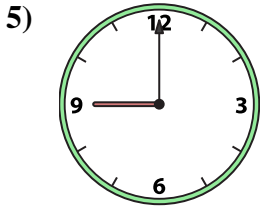
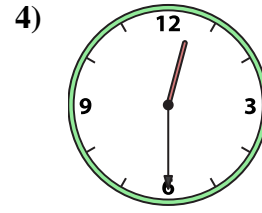
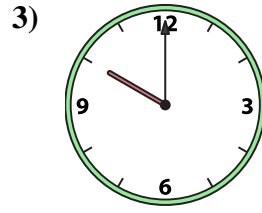
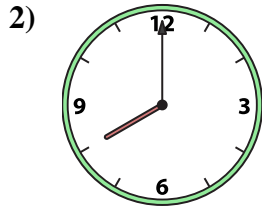

P. 11:30

- 1. **G**
- 2. **L**
- 3. **H**
- 4. **C**
- 5. **D**
- 6. **J**
- 7. **A**
- 8. **P**
- 9. **M**
- 10. **K**
- 11. **N**
- 12. **E**
- 13. **O**
- 14. **F**
- 15. **I**
- 16. **B**



Emparejar el reloj analógico con el reloj digital correspondiente.

Respuestas



1. _____
2. _____
3. _____
4. _____
5. _____
6. _____
7. _____
8. _____
9. _____
10. _____
11. _____
12. _____
13. _____
14. _____
15. _____
16. _____

A. 10:00

B. 3:30

C. 1:00

D. 12:30

E. 12:00

F. 3:00

G. 6:00

H. 5:30

I. 2:00

J. 12:30

K. 11:00

L. 9:00

M. 6:30

N. 4:00

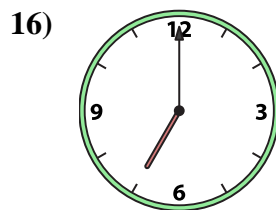
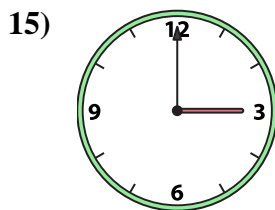
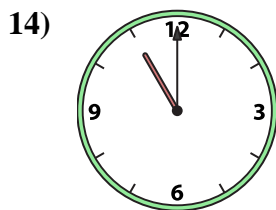
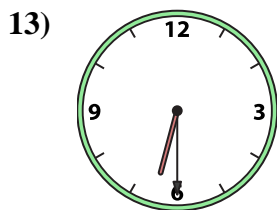
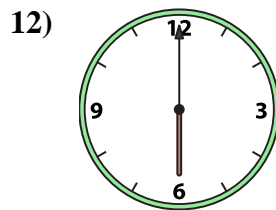
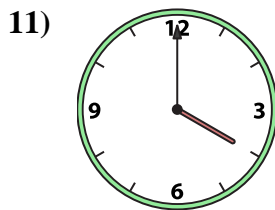
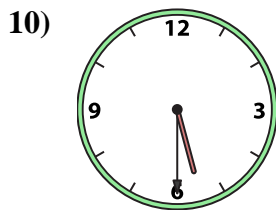
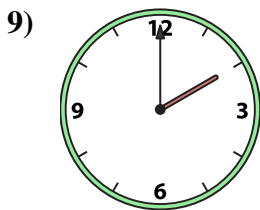
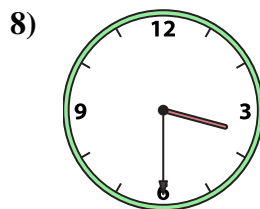
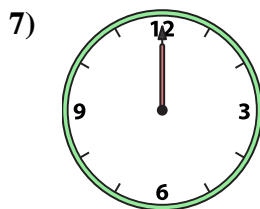
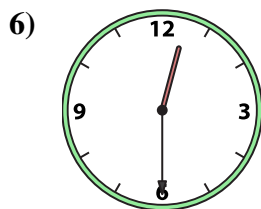
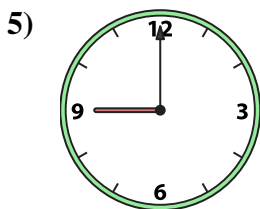
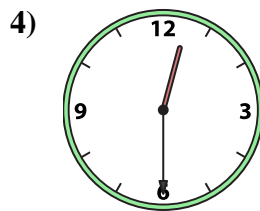
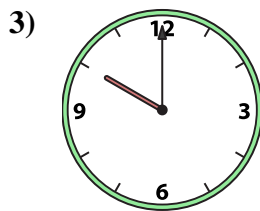
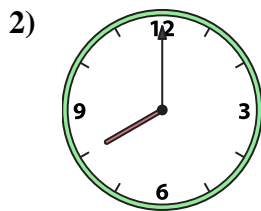

O. 8:00

P. 7:00



Emparejar el reloj analógico con el reloj digital correspondiente.

Respuestas



1. **C**

2. **O**

3. **A**

4. **J**

5. **L**

6. **D**

7. **E**

8. **B**

9. **I**

10. **H**

11. **N**

12. **G**

13. **M**

14. **K**

15. **F**

16. **P**

A. **10:00**

B. **3:30**

C. **1:00**

D. **12:30**

E. **12:00**

F. **3:00**

G. **6:00**

H. **5:30**

I. **2:00**

J. **12:30**

K. **11:00**

L. **9:00**

M. **6:30**

N. **4:00**

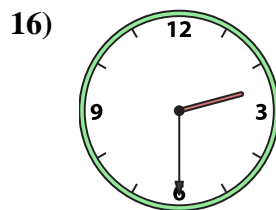
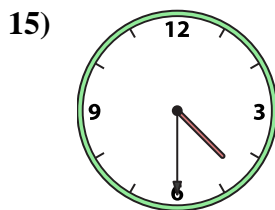
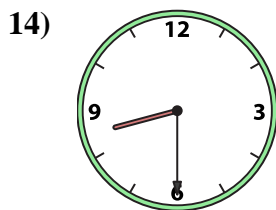
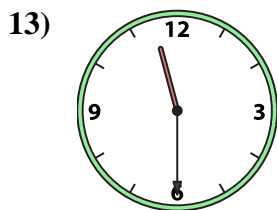

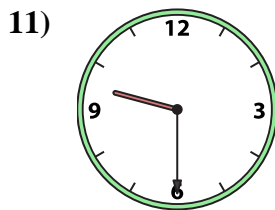
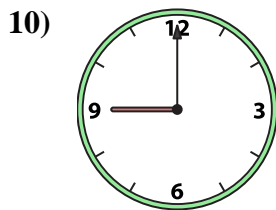
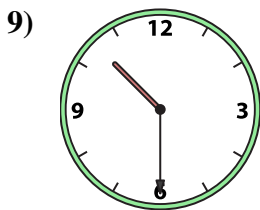
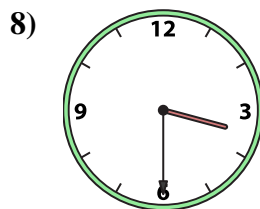
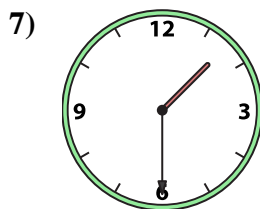
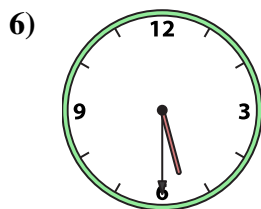
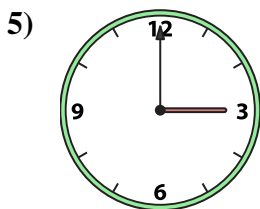
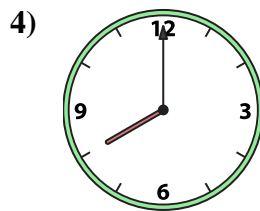
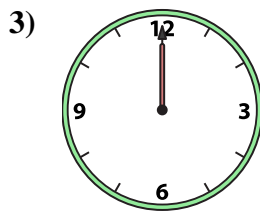
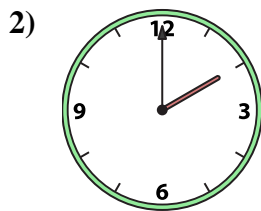
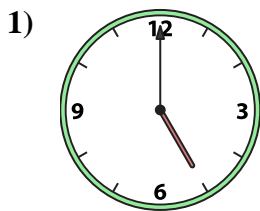
O. **8:00**

P. **7:00**



Emparejar el reloj analógico con el reloj digital correspondiente.

Respuestas



A. 12:00

B. 8:00

C. 1:30

D. 3:00

E. 2:30

F. 4:30

G. 2:00

H. 10:30

I. 9:00

J. 10:00

K. 5:30

L. 9:30

M. 8:30

N. 5:00

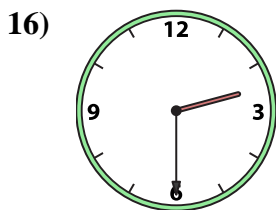
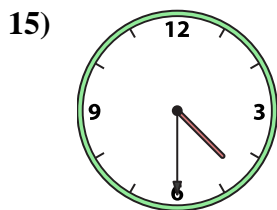
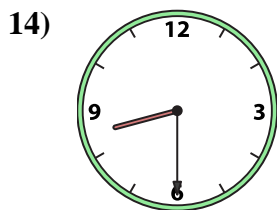
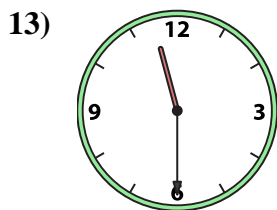
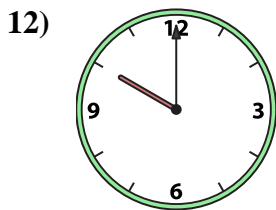
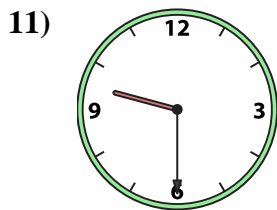
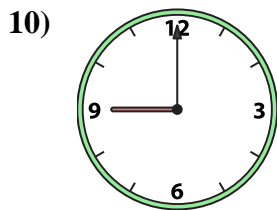
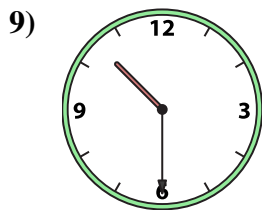
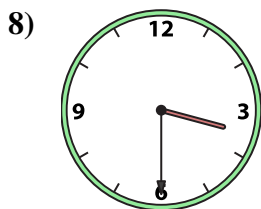
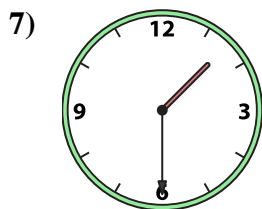
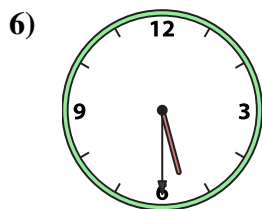
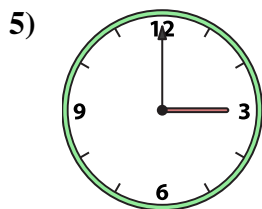
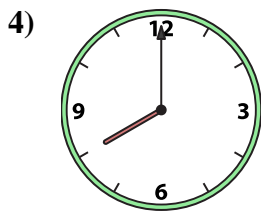
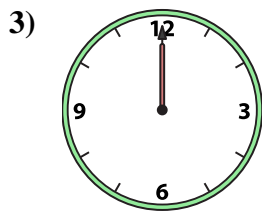
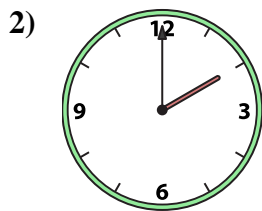
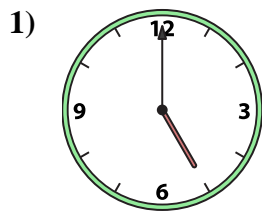
O. 11:30

P. 3:30

- 1. _____
- 2. _____
- 3. _____
- 4. _____
- 5. _____
- 6. _____
- 7. _____
- 8. _____
- 9. _____
- 10. _____
- 11. _____
- 12. _____
- 13. _____
- 14. _____
- 15. _____
- 16. _____



Emparejar el reloj analógico con el reloj digital correspondiente.



A. 12:00

B. 8:00

C. 1:30

D. 3:00

E. 2:30

F. 4:30

G. 2:00

H. 10:30

I. 9:00

J. 10:00

K. 5:30

L. 9:30

M. 8:30

N. 5:00

O. 11:30

P. 3:30

Respuestas

1. **N**

2. **G**

3. **A**

4. **B**

5. **D**

6. **K**

7. **C**

8. **P**

9. **H**

10. **I**

11. **L**

12. **J**

13. **O**

14. **M**

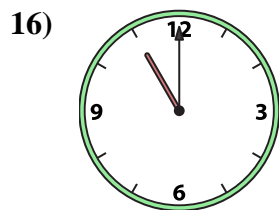
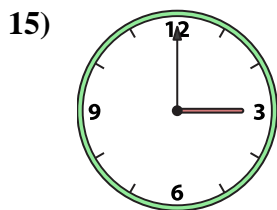
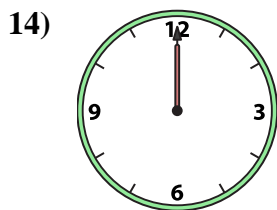
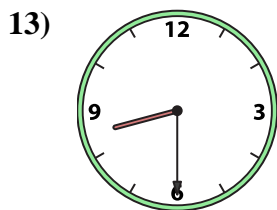

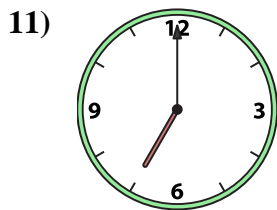
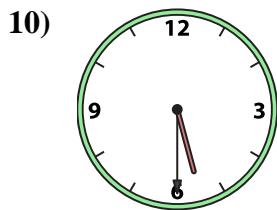
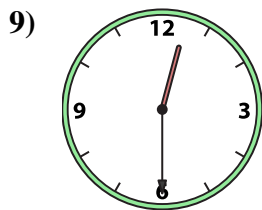
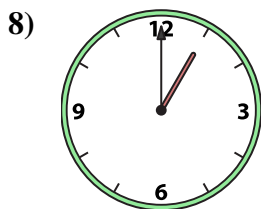
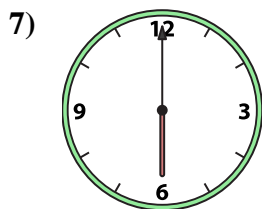
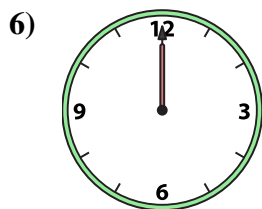
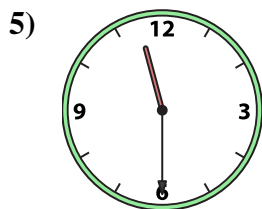
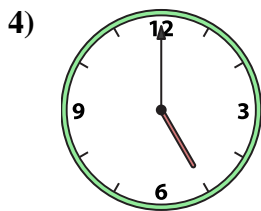
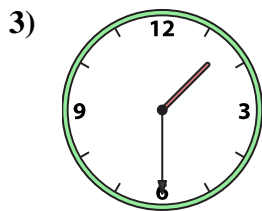
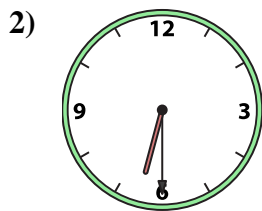
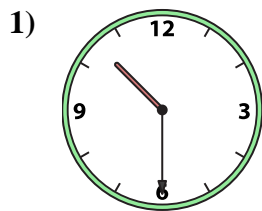
15. **F**

16. **E**



Emparejar el reloj analógico con el reloj digital correspondiente.

Respuestas



1. _____
2. _____
3. _____
4. _____
5. _____
6. _____
7. _____
8. _____
9. _____
10. _____
11. _____
12. _____
13. _____
14. _____
15. _____
16. _____

A. 6:00

B. 1:30

C. 6:30

D. 12:00

E. 2:00

F. 12:30

G. 10:30

H. 1:00

I. 8:30

J. 5:30

K. 11:00

L. 5:00

M. 12:00

N. 7:00

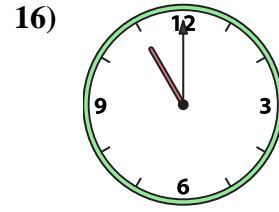
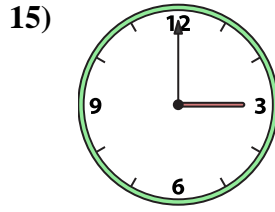
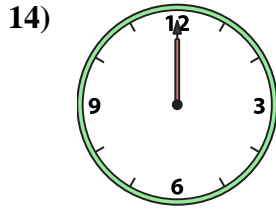
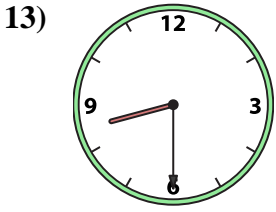
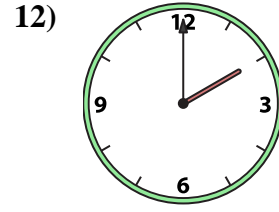
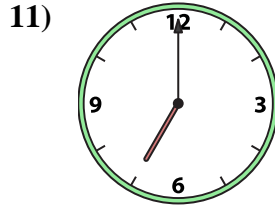
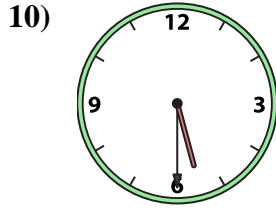
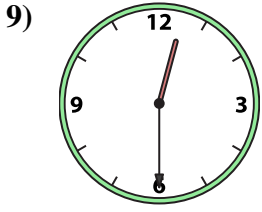
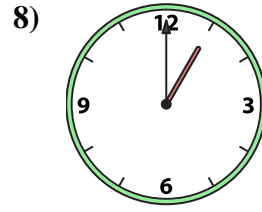
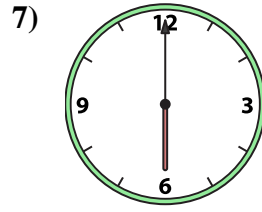
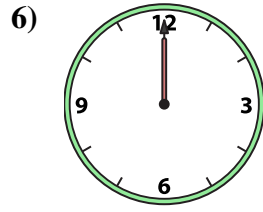
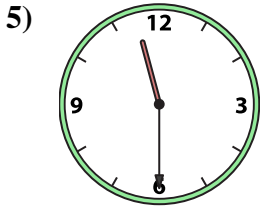
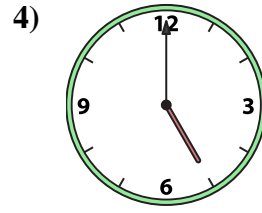
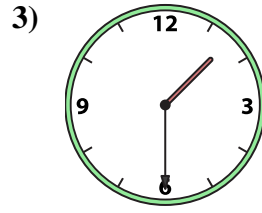
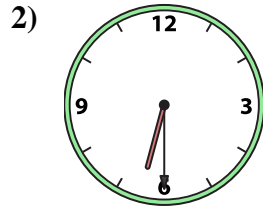
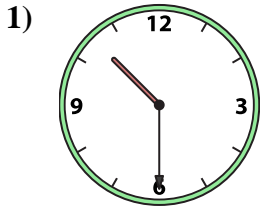
O. 3:00

P. 11:30



Emparejar el reloj analógico con el reloj digital correspondiente.

Respuestas



A. 6:00

B. 1:30

C. 6:30

D. 12:00

E. 2:00

F. 12:30

G. 10:30

H. 1:00

I. 8:30

J. 5:30

K. 11:00

L. 5:00

M. 12:00

N. 7:00

O. 3:00

P. 11:30

1. **G**

2. **C**

3. **B**

4. **L**

5. **P**

6. **D**

7. **A**

8. **H**

9. **F**

10. **J**

11. **N**

12. **E**

13. **I**

14. **M**

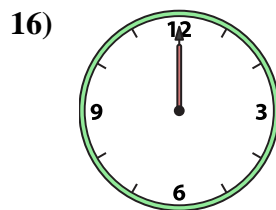
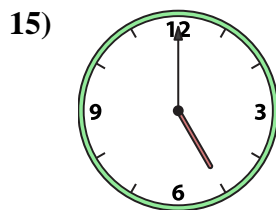
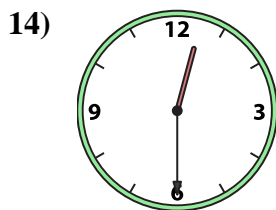
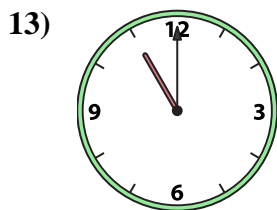
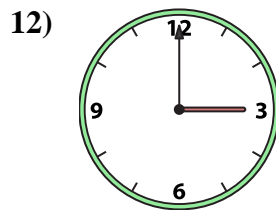
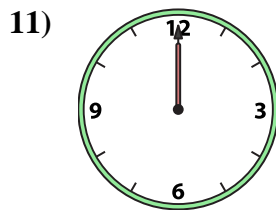
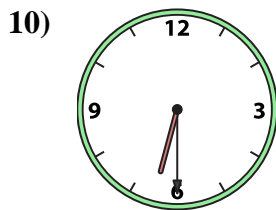
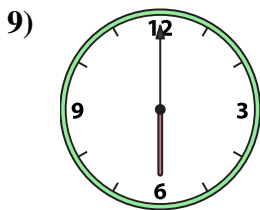
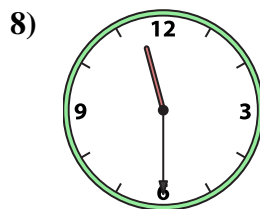
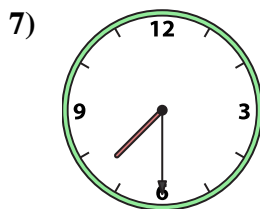
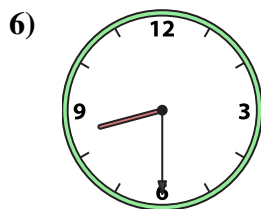
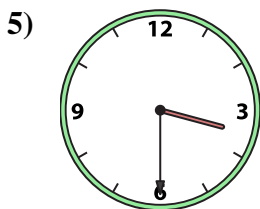
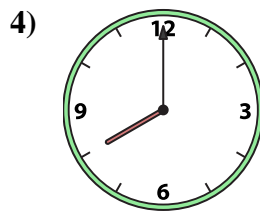
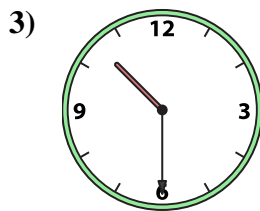
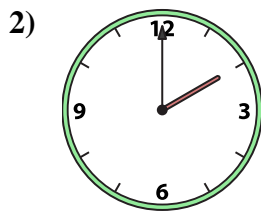

15. **O**

16. **K**



Emparejar el reloj analógico con el reloj digital correspondiente.

Respuestas



A. 10:30

B. 2:00

C. 7:30

D. 12:30

E. 6:30

F. 1:00

G. 12:00

H. 6:00

I. 3:30

J. 3:00

K. 11:30

L. 5:00

M. 8:00

N. 12:00

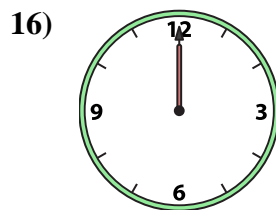
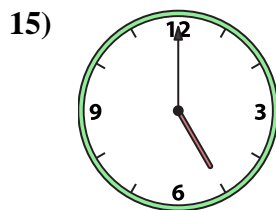
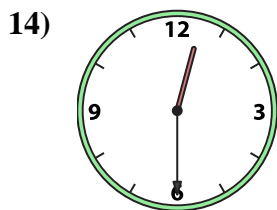
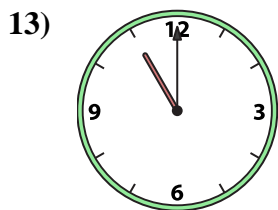
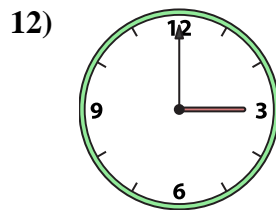
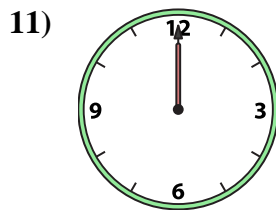
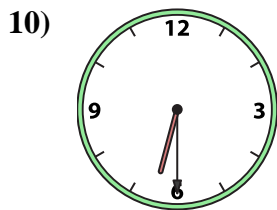
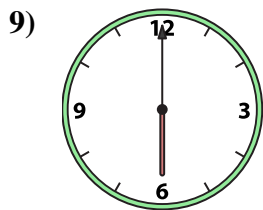
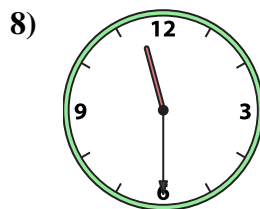
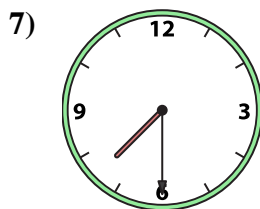
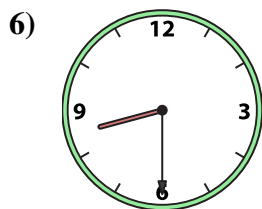
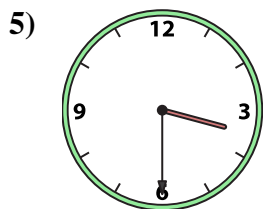
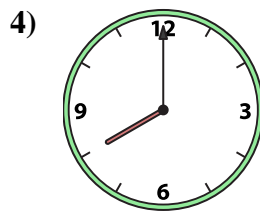
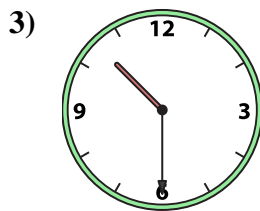
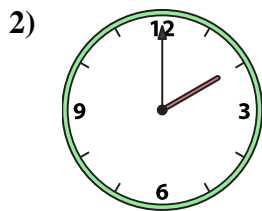

O. 11:00

P. 8:30

- 1. _____
- 2. _____
- 3. _____
- 4. _____
- 5. _____
- 6. _____
- 7. _____
- 8. _____
- 9. _____
- 10. _____
- 11. _____
- 12. _____
- 13. _____
- 14. _____
- 15. _____
- 16. _____



Emparejar el reloj analógico con el reloj digital correspondiente.



A. 10:30

B. 2:00

C. 7:30

D. 12:30

E. 6:30

F. 1:00

G. 12:00

H. 6:00

I. 3:30

J. 3:00

K. 11:30

L. 5:00

M. 8:00

N. 12:00

O. 11:00

P. 8:30

Respuestas

1. **F**

2. **B**

3. **A**

4. **M**

5. **I**

6. **P**

7. **C**

8. **K**

9. **H**

10. **E**

11. **N**

12. **J**

13. **O**

14. **D**

15. **L**

16. **G**