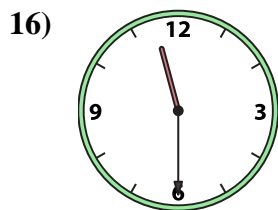
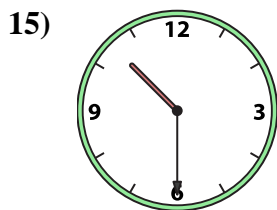
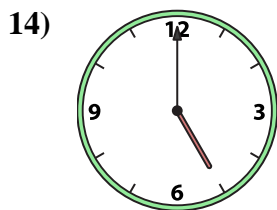
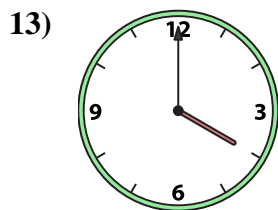
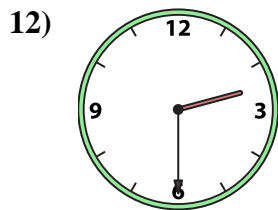
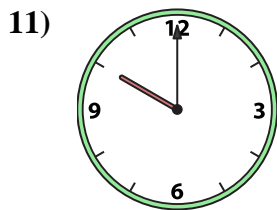
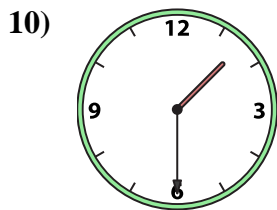
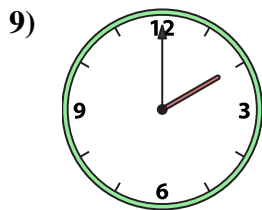
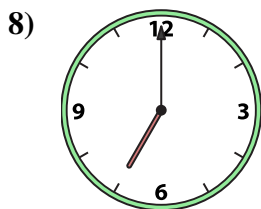
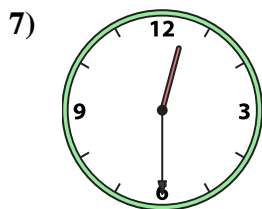
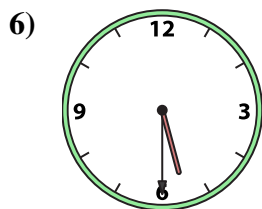
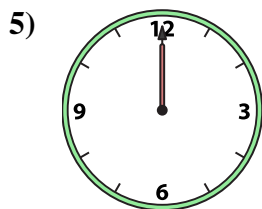
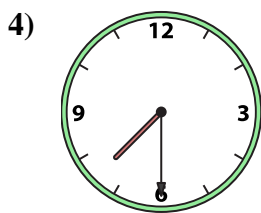
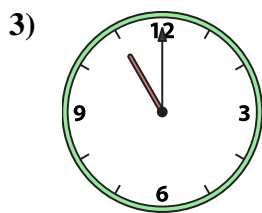
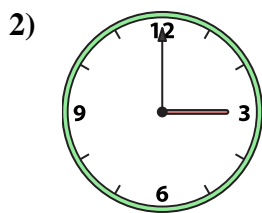
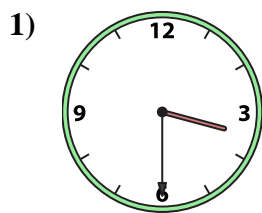




Emparejar el reloj analógico con el reloj digital correspondiente.

Respuestas



1. _____
2. _____
3. _____
4. _____
5. _____
6. _____
7. _____
8. _____
9. _____
10. _____
11. _____
12. _____
13. _____
14. _____
15. _____
16. _____

A. 7:30

B. 11:30

C. 12:30

D. 11:00

E. 2:30

F. 7:00

G. 5:00

H. 5:30

I. 12:00

J. 3:30

K. 10:00

L. 3:00

M. 1:30

N. 10:30

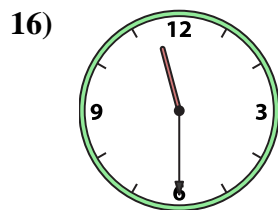
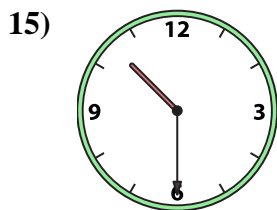
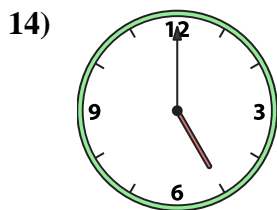
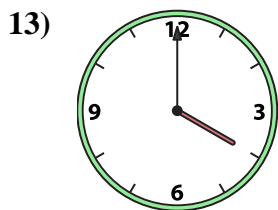
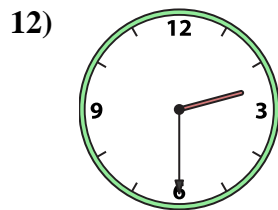
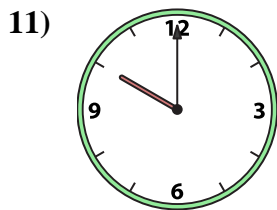
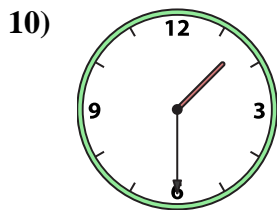
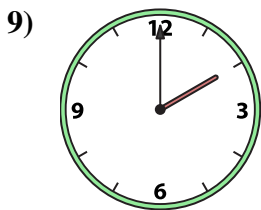
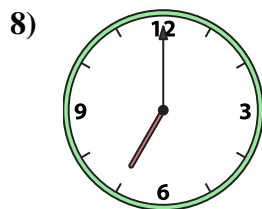
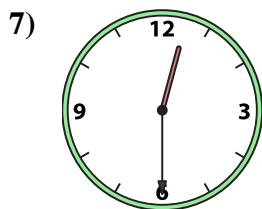
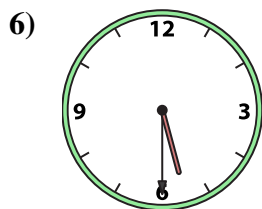
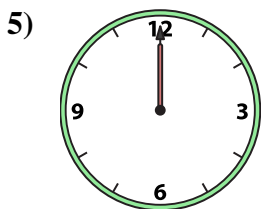
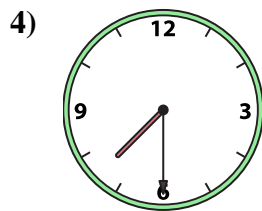
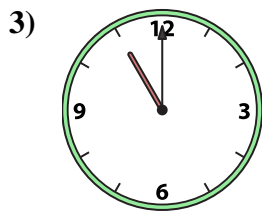
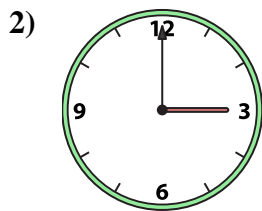
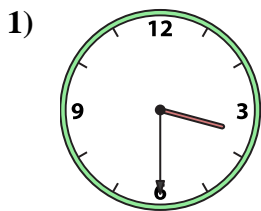
O. 4:00

P. 2:00



Emparejar el reloj analógico con el reloj digital correspondiente.

Respuestas



A. 7:30

B. 11:30

C. 12:30

D. 11:00

E. 2:30

F. 7:00

G. 5:00

H. 5:30

I. 12:00

J. 3:30

K. 10:00

L. 3:00

M. 1:30

N. 10:30

O. 4:00

P. 2:00

- 1. **J**
- 2. **L**
- 3. **D**
- 4. **A**
- 5. **I**
- 6. **H**
- 7. **C**
- 8. **F**
- 9. **P**
- 10. **M**
- 11. **K**
- 12. **E**
- 13. **O**
- 14. **G**
- 15. **N**
- 16. **B**