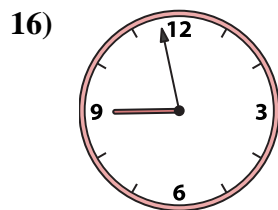
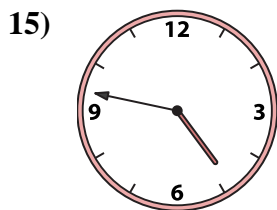
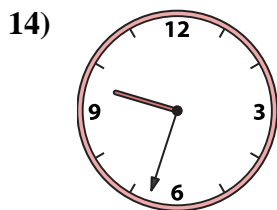
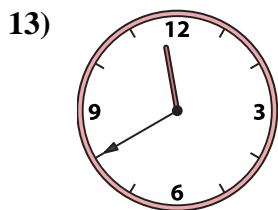
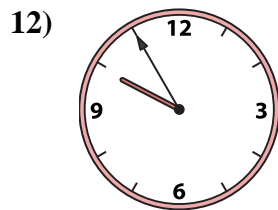
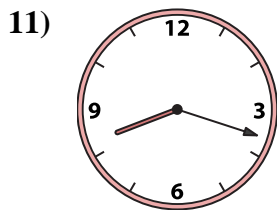
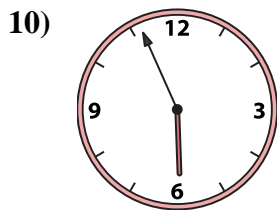
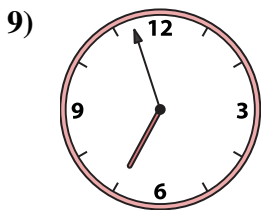
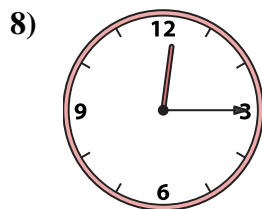



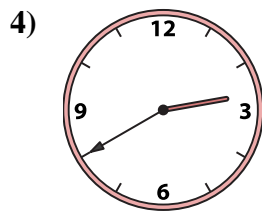
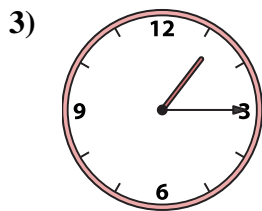
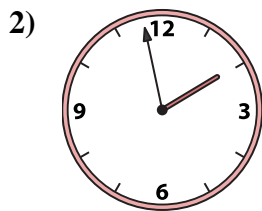
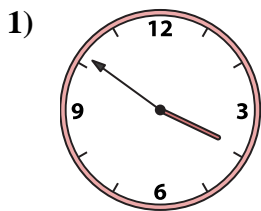




Emparejar el reloj analógico con el reloj digital correspondiente.

Respuestas



1. \_\_\_\_\_
2. \_\_\_\_\_
3. \_\_\_\_\_
4. \_\_\_\_\_
5. \_\_\_\_\_
6. \_\_\_\_\_
7. \_\_\_\_\_
8. \_\_\_\_\_
9. \_\_\_\_\_
10. \_\_\_\_\_
11. \_\_\_\_\_
12. \_\_\_\_\_
13. \_\_\_\_\_
14. \_\_\_\_\_
15. \_\_\_\_\_
16. \_\_\_\_\_

A. 9:55

B. 5:56

C. 4:47

D. 11:40

E. 3:51

F. 1:58

G. 8:18

H. 1:15

I. 6:57

J. 8:58

K. 9:33

L. 12:52

M. 11:55

N. 12:15

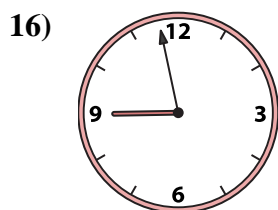
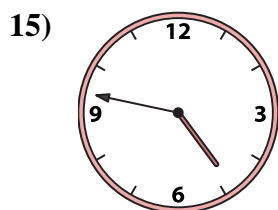
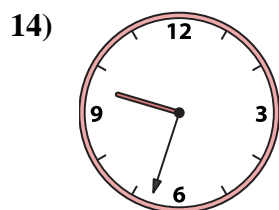
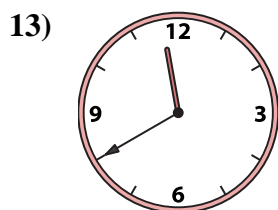
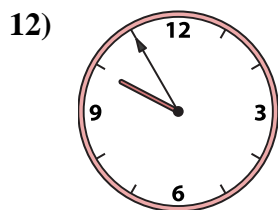
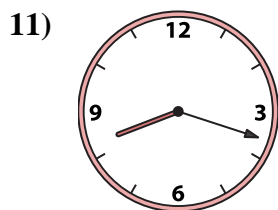
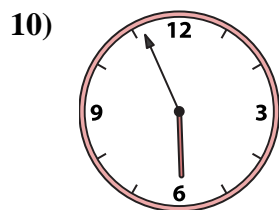
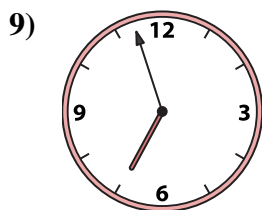




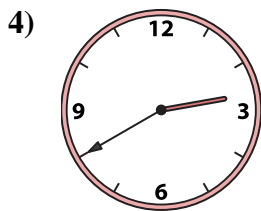
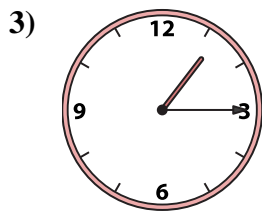
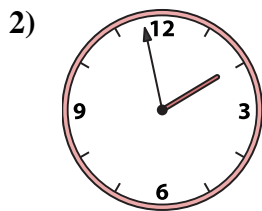
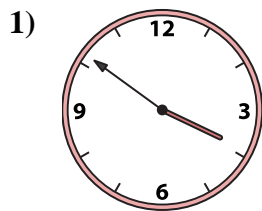
O. 12:36

P. 2:40



Emparejar el reloj analógico con el reloj digital correspondiente.

**Respuestas**



- 1.     **E**
- 2.     **F**
- 3.     **H**
- 4.     **P**
- 5.     **M**
- 6.     **L**
- 7.     **O**
- 8.     **N**
- 9.     **I**
- 10.     **B**
- 11.     **G**
- 12.     **A**
- 13.     **D**
- 14.     **K**
- 15.     **C**
- 16.     **J**

- A. 9:55
- B. 5:56
- C. 4:47
- D. 11:40
- E. 3:51
- F. 1:58
- G. 8:18
- H. 1:15
- I. 6:57
- J. 8:58
- K. 9:33
- L. 12:52
- M. 11:55
- N. 12:15
- O. 12:36
- P. 2:40