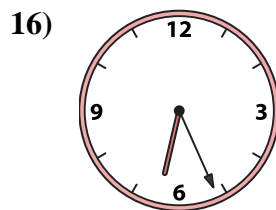
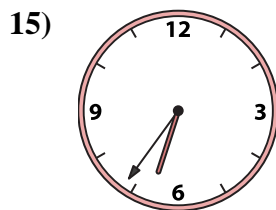
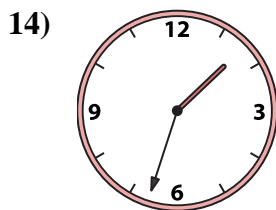
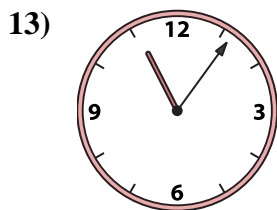
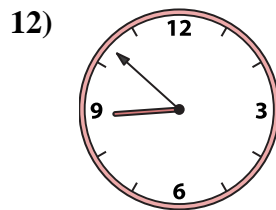
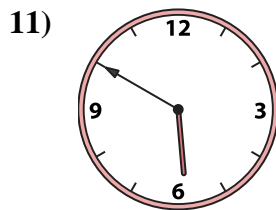
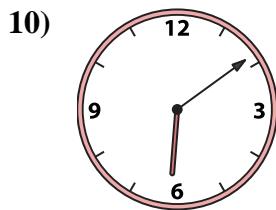

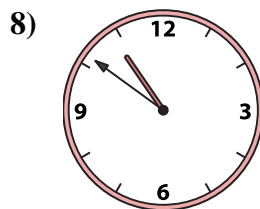
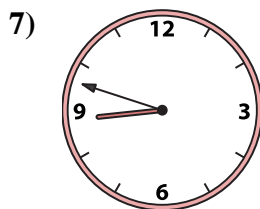

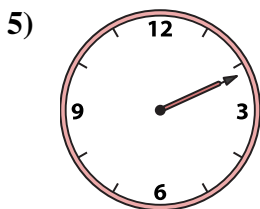
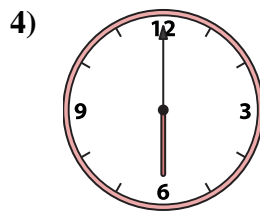
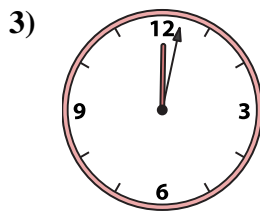
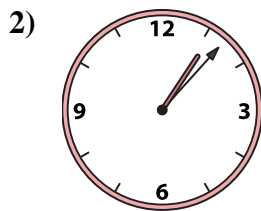
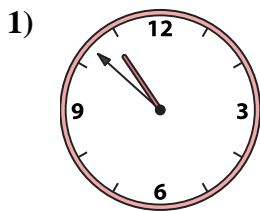




Emparejar el reloj analógico con el reloj digital correspondiente.

Respuestas



1. _____
2. _____
3. _____
4. _____
5. _____
6. _____
7. _____
8. _____
9. _____
10. _____
11. _____
12. _____
13. _____
14. _____
15. _____
16. _____

A. 6:09

B. 1:33

C. 6:00

D. 6:36

E. 12:02

F. 2:11

G. 12:34

H. 10:51

I. 1:07

J. 8:48

K. 8:52

L. 5:50

M. 6:26

N. 10:57

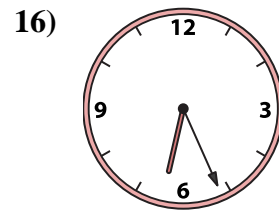
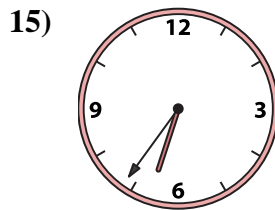
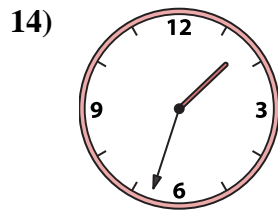
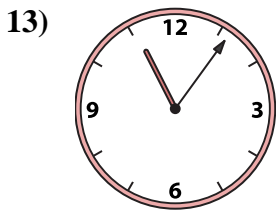
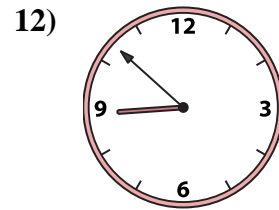
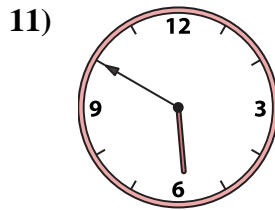
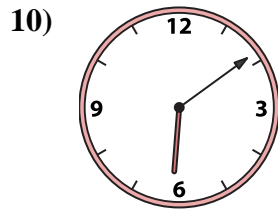

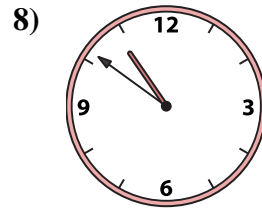
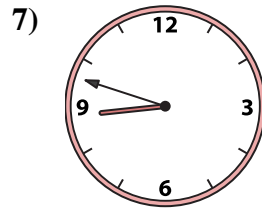
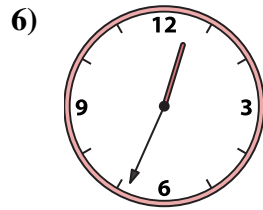
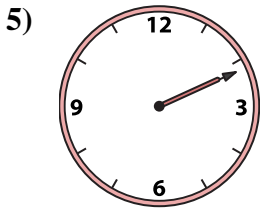
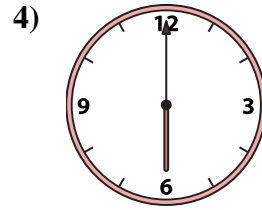
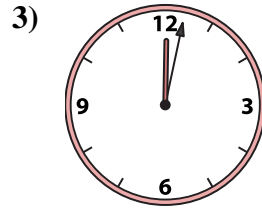
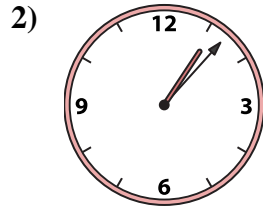

O. 10:52

P. 11:06



Emparejar el reloj analógico con el reloj digital correspondiente.

Respuestas



A. **6:09**

B. **1:33**

C. **6:00**

D. **6:36**

E. **12:02**

F. **2:11**

G. **12:34**

H. **10:51**

I. **1:07**

J. **8:48**

K. **8:52**

L. **5:50**

M. **6:26**

N. **10:57**

O. **10:52**

P. **11:06**

- 1. **O**
- 2. **I**
- 3. **E**
- 4. **C**
- 5. **F**
- 6. **G**
- 7. **J**
- 8. **H**
- 9. **N**
- 10. **A**
- 11. **L**
- 12. **K**
- 13. **P**
- 14. **B**
- 15. **D**
- 16. **M**