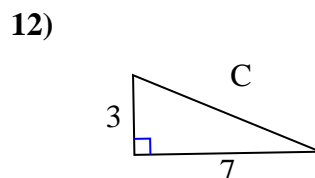
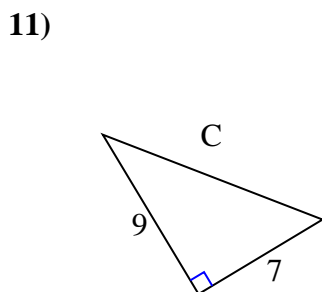
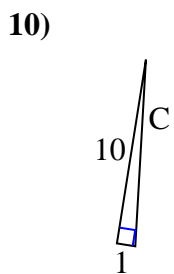
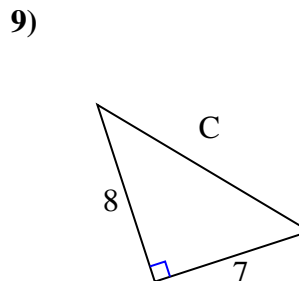
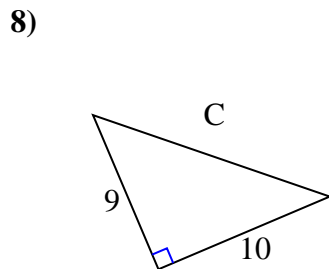
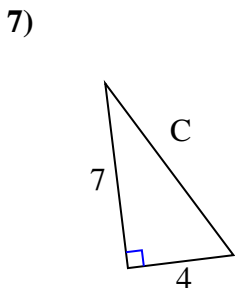
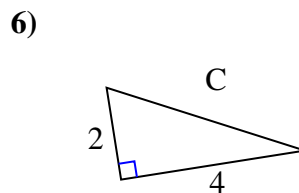
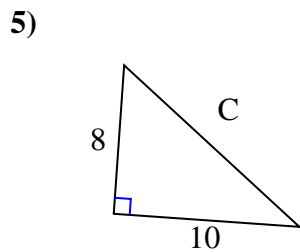
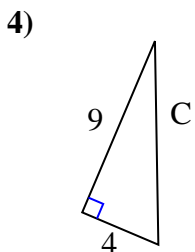
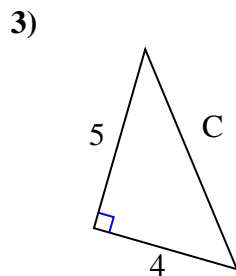
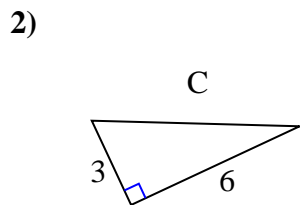
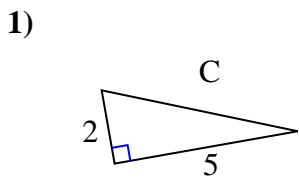




Encuentra el valor de 'C', redondea tu respuesta al centésimo más cercano.

Respuestas



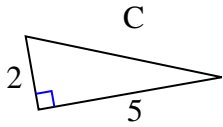
1. _____
2. _____
3. _____
4. _____
5. _____
6. _____
7. _____
8. _____
9. _____
10. _____
11. _____
12. _____



Encuentra el valor de 'C', redondea tu respuesta al centésimo más cercano.

Respuestas

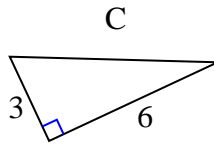
1)



$$4 + 25 = 29$$

$$\sqrt{29} = 5.39$$

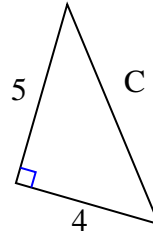
2)



$$9 + 36 = 45$$

$$\sqrt{45} = 6.71$$

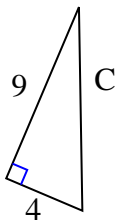
3)



$$25 + 16 = 41$$

$$\sqrt{41} = 6.4$$

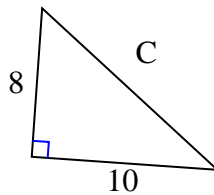
4)



$$81 + 16 = 97$$

$$\sqrt{97} = 9.85$$

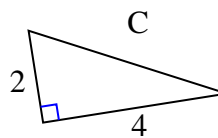
5)



$$64 + 100 = 164$$

$$\sqrt{164} = 12.81$$

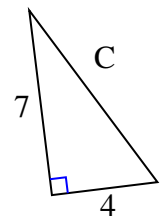
6)



$$4 + 16 = 20$$

$$\sqrt{20} = 4.47$$

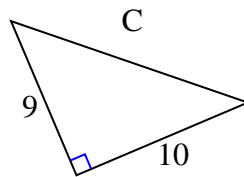
7)



$$49 + 16 = 65$$

$$\sqrt{65} = 8.06$$

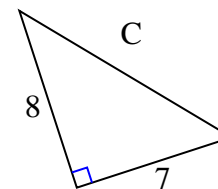
8)



$$81 + 100 = 181$$

$$\sqrt{181} = 13.45$$

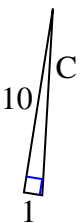
9)



$$64 + 49 = 113$$

$$\sqrt{113} = 10.63$$

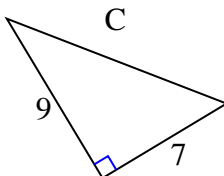
10)



$$100 + 1 = 101$$

$$\sqrt{101} = 10.05$$

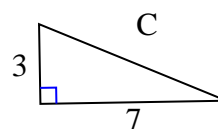
11)



$$81 + 49 = 130$$

$$\sqrt{130} = 11.4$$

12)



$$9 + 49 = 58$$

$$\sqrt{58} = 7.62$$

1. 5.39
2. 6.71
3. 6.4
4. 9.85
5. 12.81
6. 4.47
7. 8.06
8. 13.45
9. 10.63
10. 10.05
11. 11.4
12. 7.62