



Determine cuántos grupos de 100 se pueden crear a partir de los bloques que se muestran.

**Respuestas**

Ej)

Ej. 3

1)

1. \_\_\_\_\_

2)

2. \_\_\_\_\_

3)

3. \_\_\_\_\_

4)

4. \_\_\_\_\_

5)

5. \_\_\_\_\_

6)

6. \_\_\_\_\_

7)

7. \_\_\_\_\_

8)

8. \_\_\_\_\_

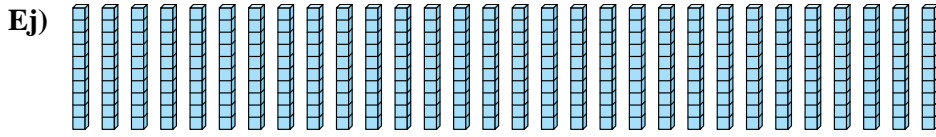
9)

9. \_\_\_\_\_

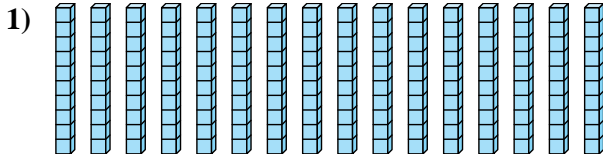


Determine cuántos grupos de 100 se pueden crear a partir de los bloques que se muestran.

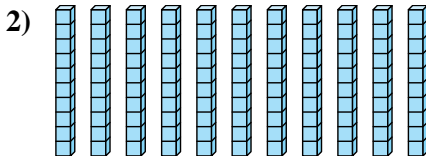
**Respuestas**



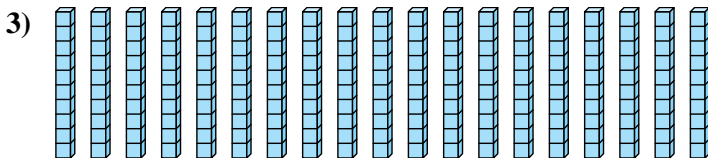
Ej. 3



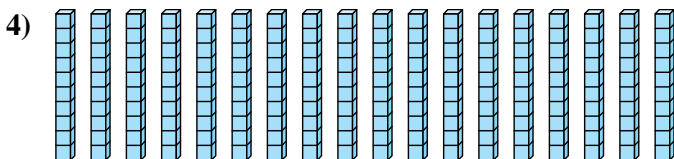
1. 1



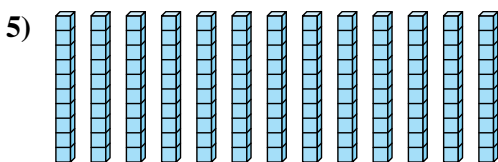
2. 1



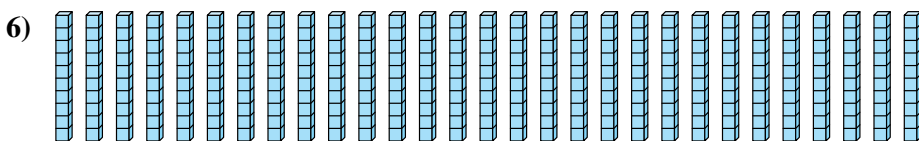
3. 1



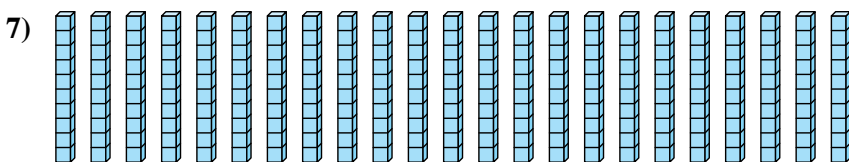
4. 1



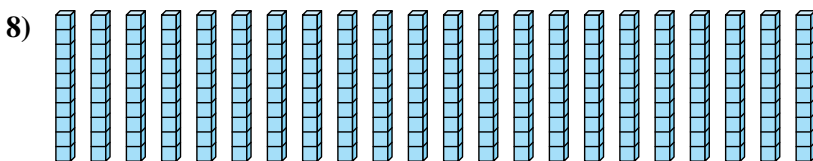
5. 1



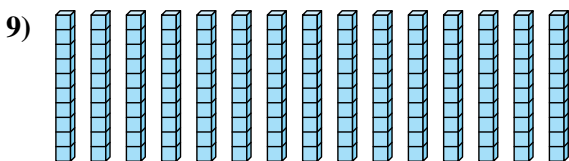
6. 2



7. 2



8. 2



9. 1