



Determine cuántos grupos de 100 se pueden crear a partir de los bloques que se muestran.

**Respuestas**

Ej)

Ej. 2

1)

1. \_\_\_\_\_

2)

2. \_\_\_\_\_

3)

3. \_\_\_\_\_

4)

4. \_\_\_\_\_

5)

5. \_\_\_\_\_

6)

6. \_\_\_\_\_

7)

7. \_\_\_\_\_

8)

8. \_\_\_\_\_

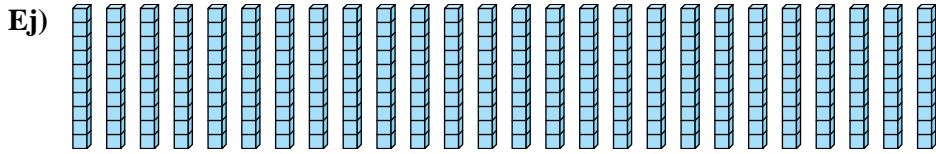
9)

9. \_\_\_\_\_

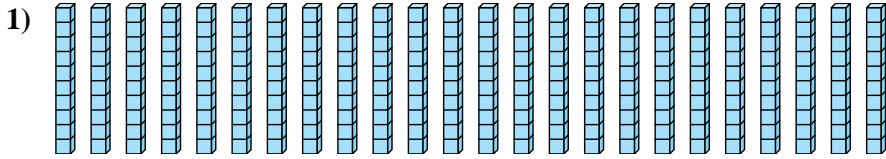


Determine cuántos grupos de 100 se pueden crear a partir de los bloques que se muestran.

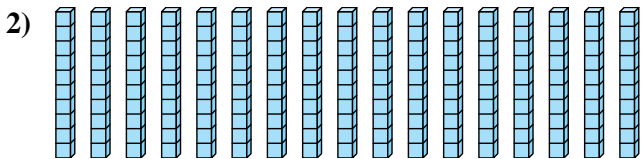
**Respuestas**




Ej. 2



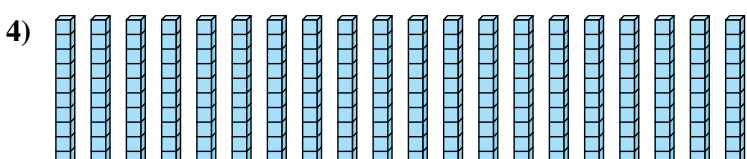
1. 2



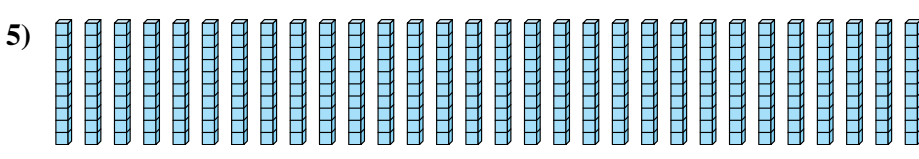
2. 1



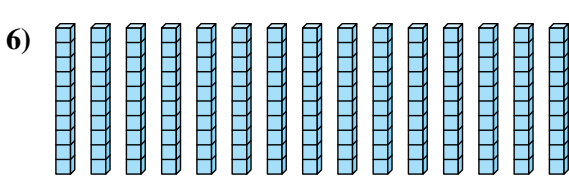
3. 1



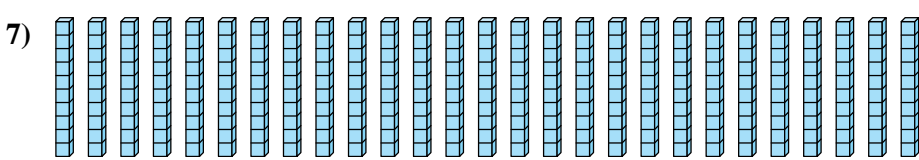
4. 2



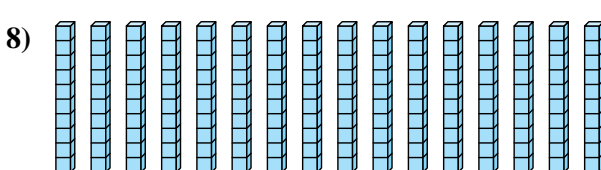
5. 3



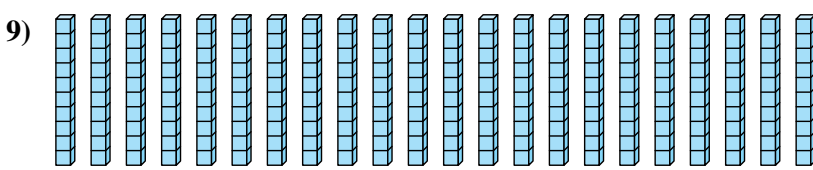
6. 1



7. 2



8. 1



9. 2