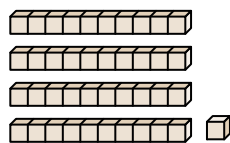


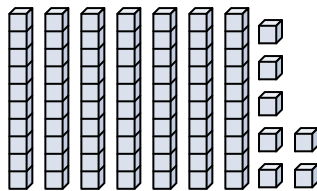


Contar el número total de pequeños bloques.

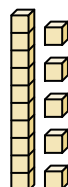
1)



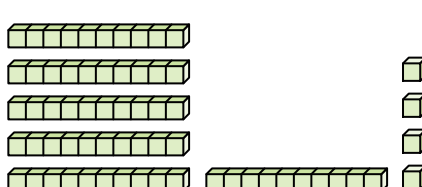
2)



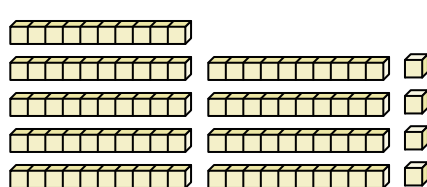
3)



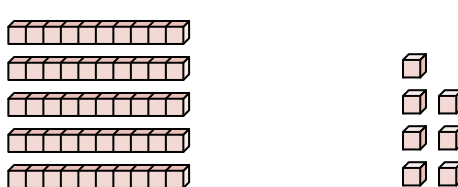
4)



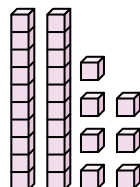
5)



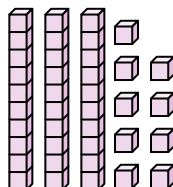
6)




7)



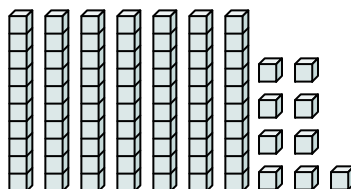
8)



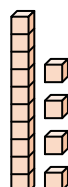
9)




10)



11)



12)



**Respuestas**

1. \_\_\_\_\_

2. \_\_\_\_\_

3. \_\_\_\_\_

4. \_\_\_\_\_

5. \_\_\_\_\_

6. \_\_\_\_\_

7. \_\_\_\_\_

8. \_\_\_\_\_

9. \_\_\_\_\_

10. \_\_\_\_\_

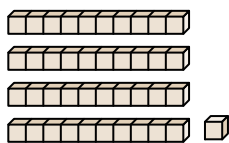
11. \_\_\_\_\_

12. \_\_\_\_\_

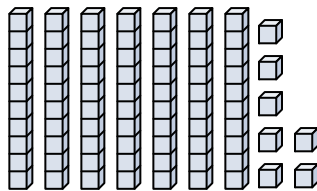


Contar el número total de pequeños bloques.

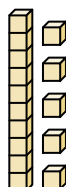
1)



2)



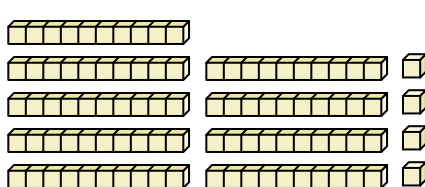
3)



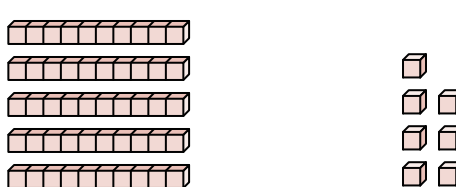
4)



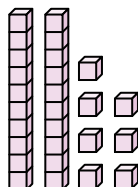
5)



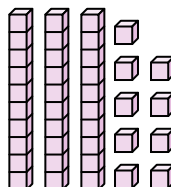
6)




7)



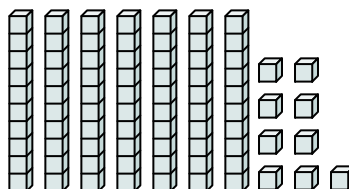
8)



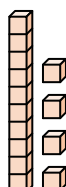
9)




10)



11)



12)

**Respuestas**1. **41**2. **77**3. **15**4. **64**5. **94**6. **57**7. **27**8. **39**9. **17**10. **79**11. **14**12. **65**



Contar el número total de pequeños bloques.

41

15

27

94

64

57

79

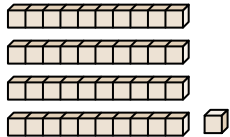
39

17

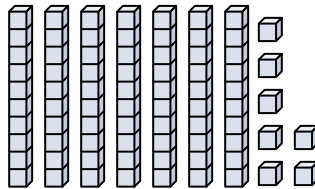
77

**Respuestas**

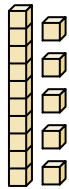
1)



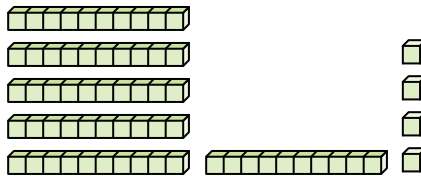
2)



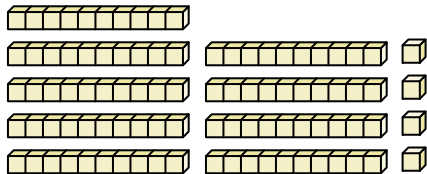
3)



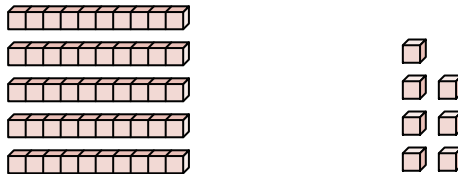
4)



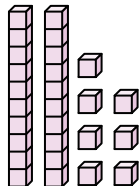
5)



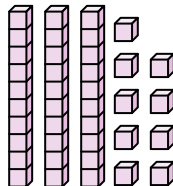
6)



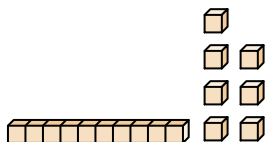
7)



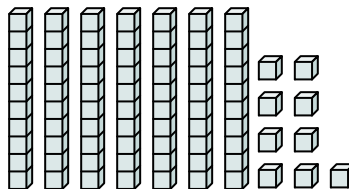
8)



9)



10)



1. \_\_\_\_\_

2. \_\_\_\_\_

3. \_\_\_\_\_

4. \_\_\_\_\_

5. \_\_\_\_\_

6. \_\_\_\_\_

7. \_\_\_\_\_

8. \_\_\_\_\_

9. \_\_\_\_\_

10. \_\_\_\_\_

11. \_\_\_\_\_

12. \_\_\_\_\_