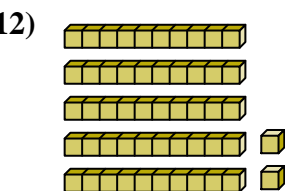
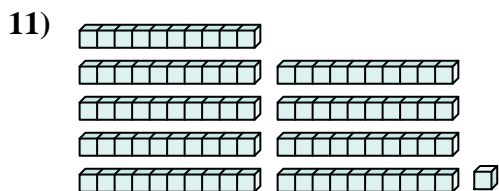
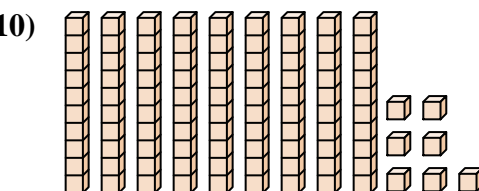
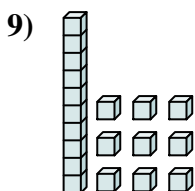
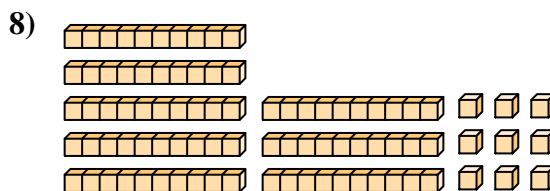
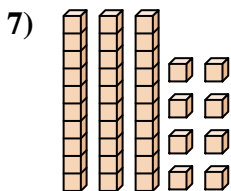
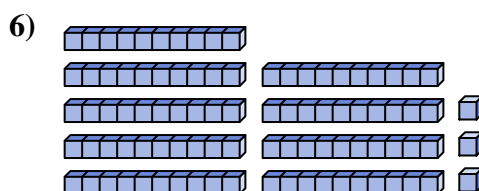
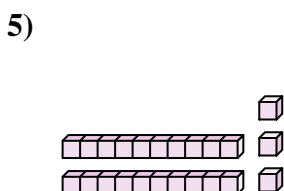
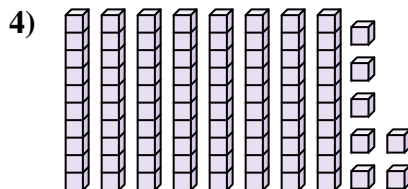
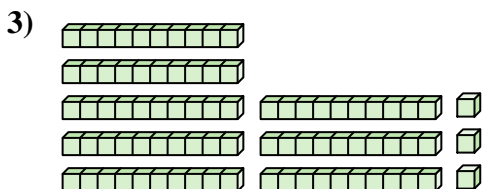
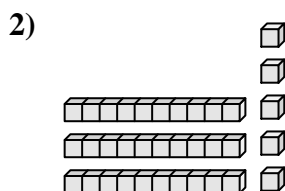
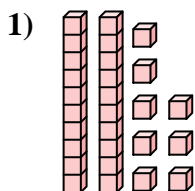




Contar el número total de pequeños bloques.

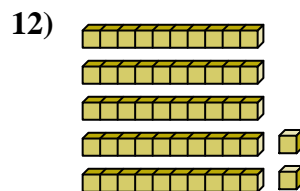
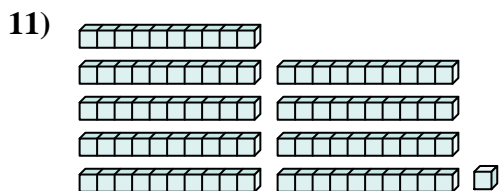
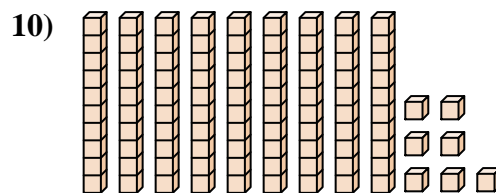
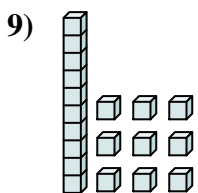
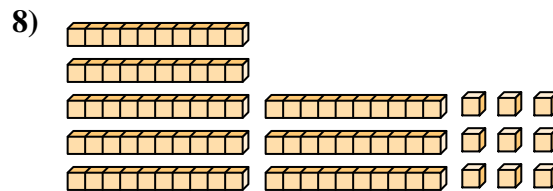
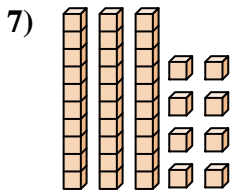
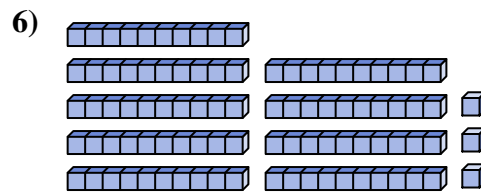
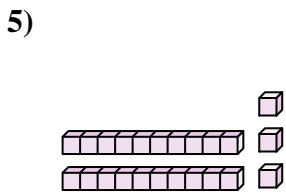
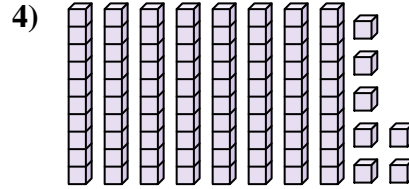
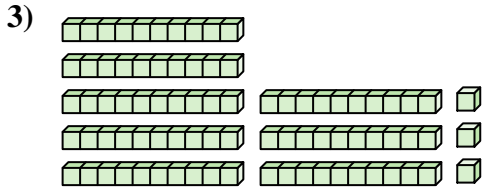
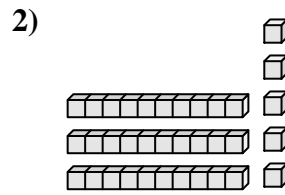
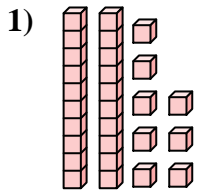
**Respuestas**



1. \_\_\_\_\_
2. \_\_\_\_\_
3. \_\_\_\_\_
4. \_\_\_\_\_
5. \_\_\_\_\_
6. \_\_\_\_\_
7. \_\_\_\_\_
8. \_\_\_\_\_
9. \_\_\_\_\_
10. \_\_\_\_\_
11. \_\_\_\_\_
12. \_\_\_\_\_



Contar el número total de pequeños bloques.



**Respuestas**

1. **28**

2. **35**

3. **83**

4. **87**

5. **23**

6. **93**

7. **38**

8. **89**

9. **19**

10. **97**

11. **91**

12. **52**



Contar el número total de pequeños bloques.

19

87

28

35

89

38

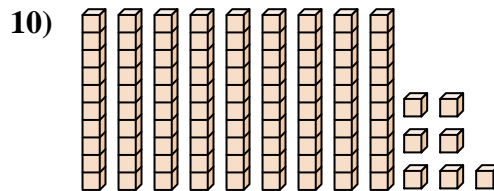
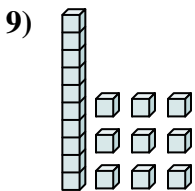
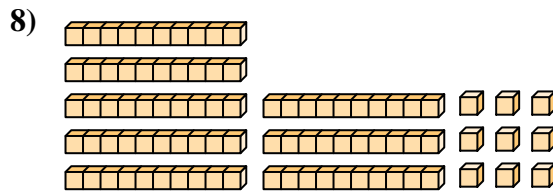
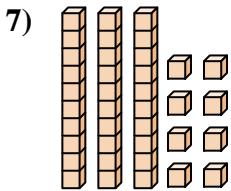
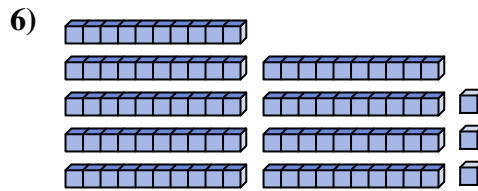
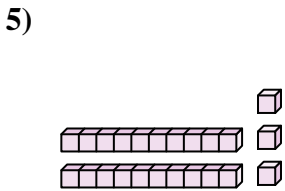
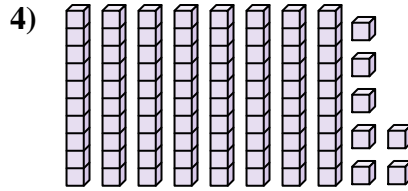
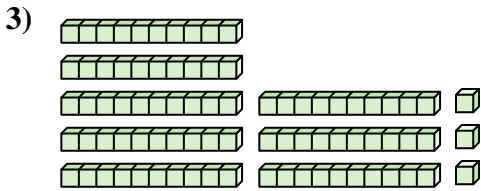
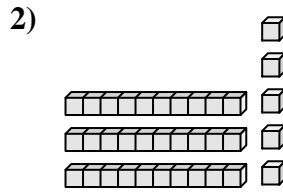
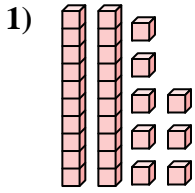
93

23

83

97

**Respuestas**



1. \_\_\_\_\_
2. \_\_\_\_\_
3. \_\_\_\_\_
4. \_\_\_\_\_
5. \_\_\_\_\_
6. \_\_\_\_\_
7. \_\_\_\_\_
8. \_\_\_\_\_
9. \_\_\_\_\_
10. \_\_\_\_\_