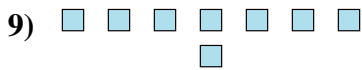
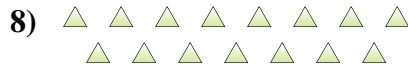
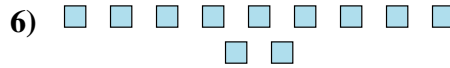
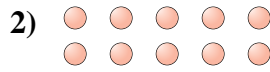





Determinar si el número de figuras en la caja es par o impar.




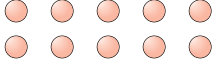
**Respuestas**


- 1. \_\_\_\_\_
- 2. \_\_\_\_\_
- 3. \_\_\_\_\_
- 4. \_\_\_\_\_
- 5. \_\_\_\_\_
- 6. \_\_\_\_\_
- 7. \_\_\_\_\_
- 8. \_\_\_\_\_
- 9. \_\_\_\_\_
- 10. \_\_\_\_\_



Determinar si el número de figuras en la caja es par o impar.

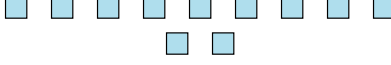
1)   
18

2)   
10

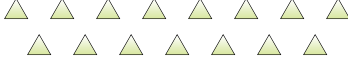
3)   
6

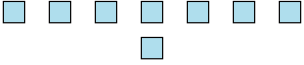
4)   
13


5)   
6

6)   
11

7)   
12

8)   
15

9)   
8

10)   
16

**Respuestas**

1. Par
2. Par
3. Par
4. Impar
5. Par
6. Impar
7. Par
8. Impar
9. Par
10. Par