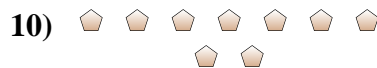
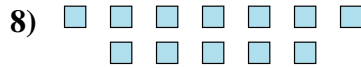
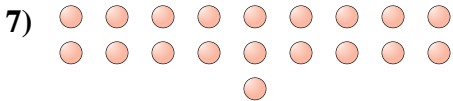
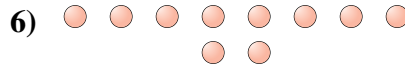
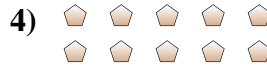

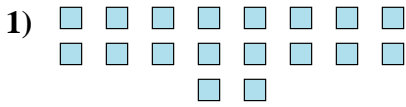




Determinar si el número de figuras en la caja es par o impar.

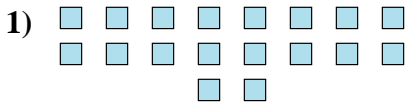


Respuestas


- 1. _____
- 2. _____
- 3. _____
- 4. _____
- 5. _____
- 6. _____
- 7. _____
- 8. _____
- 9. _____
- 10. _____



Determinar si el número de figuras en la caja es par o impar.



18



20



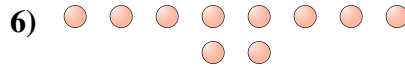
14



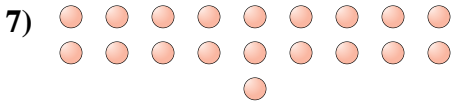
10



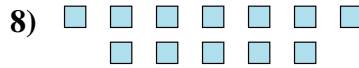
12



10



19



12



7



9

Respuestas

1. **Par**

2. **Par**

3. **Par**

4. **Par**

5. **Par**

6. **Par**

7. **Impar**

8. **Par**

9. **Impar**

10. **Impar**