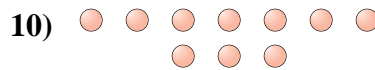
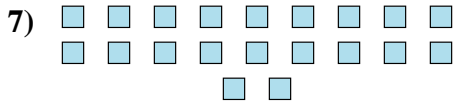
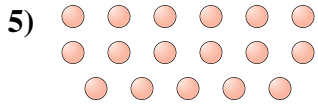
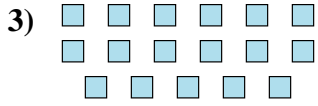
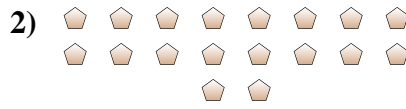




Determinar si el número de figuras en la caja es par o impar.



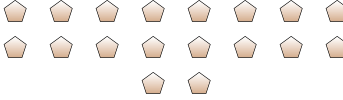
Respuestas

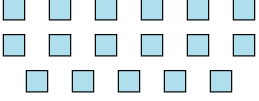
1. _____
2. _____
3. _____
4. _____
5. _____
6. _____
7. _____
8. _____
9. _____
10. _____




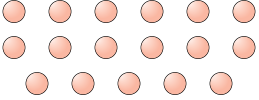
Determinar si el número de figuras en la caja es par o impar.


1) 
19

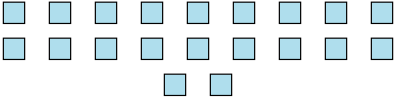
2) 
18


3) 
17

4) 
15

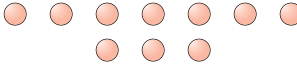
5) 
17

6) 
13

7) 
20

8) 
7

9) 
6

10) 
10

Respuestas

1. **Impar**

2. **Par**

3. **Impar**

4. **Impar**

5. **Impar**

6. **Impar**

7. **Par**

8. **Impar**

9. **Par**

10. **Par**