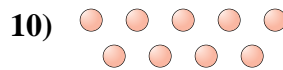
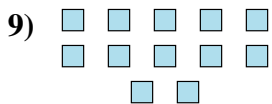

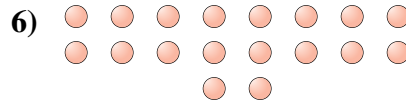

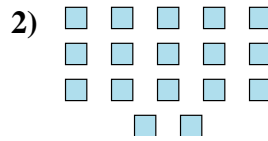




Determinar si el número de figuras en la caja es par o impar.

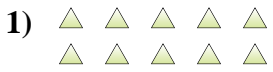


Respuestas

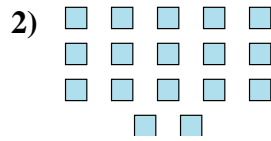
1. _____
2. _____
3. _____
4. _____
5. _____
6. _____
7. _____
8. _____
9. _____
10. _____



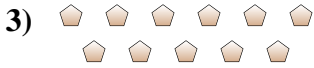
Determinar si el número de figuras en la caja es par o impar.




10



17



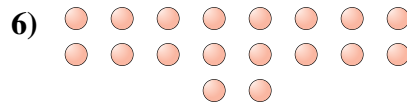
11



19



14



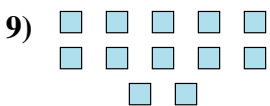
18



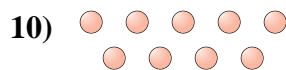
18



8



12



9

Respuestas

1. **Par**

2. **Impar**

3. **Impar**

4. **Impar**

5. **Par**

6. **Par**

7. **Par**

8. **Par**

9. **Par**

10. **Impar**