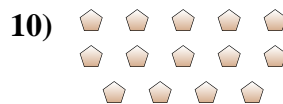
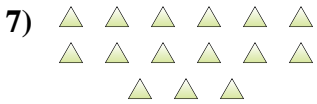
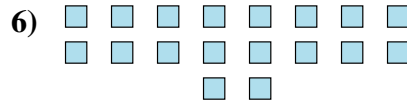
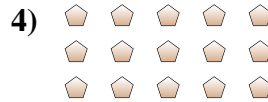

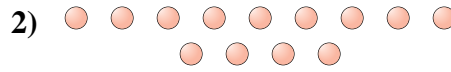




Determinar si el número de figuras en la caja es par o impar.



**Respuestas**

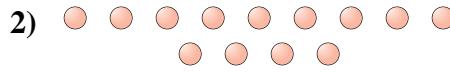
1. \_\_\_\_\_
2. \_\_\_\_\_
3. \_\_\_\_\_
4. \_\_\_\_\_
5. \_\_\_\_\_
6. \_\_\_\_\_
7. \_\_\_\_\_
8. \_\_\_\_\_
9. \_\_\_\_\_
10. \_\_\_\_\_




Determinar si el número de figuras en la caja es par o impar.



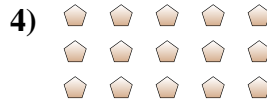
9



13



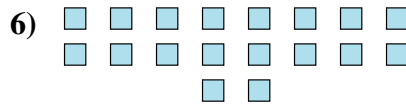
19



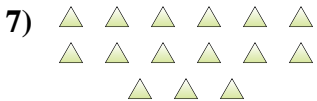
15



17



18



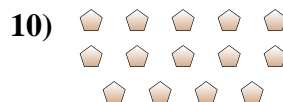
15



5



10



14

**Respuestas**

1. **Impar**

2. **Impar**

3. **Impar**

4. **Impar**

5. **Impar**

6. **Par**

7. **Impar**

8. **Impar**

9. **Par**

10. **Par**