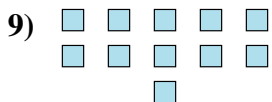
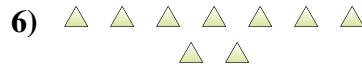
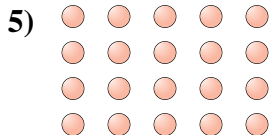
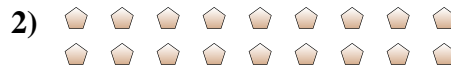




Determinar si el número de figuras en la caja es par o impar.



Respuestas

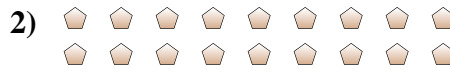
- 1. _____
- 2. _____
- 3. _____
- 4. _____
- 5. _____
- 6. _____
- 7. _____
- 8. _____
- 9. _____
- 10. _____



Determinar si el número de figuras en la caja es par o impar.



7



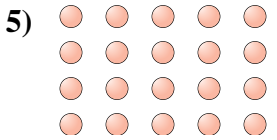
18



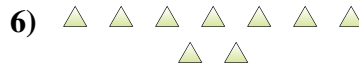
6



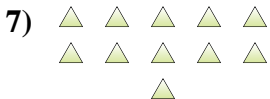
7



20



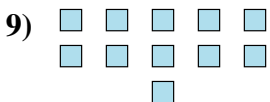
9



11



5



11



6

Respuestas

1. Impar

2. Par

3. Par

4. Impar

5. Par

6. Impar

7. Impar

8. Impar

9. Impar

10. Par