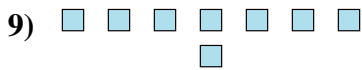
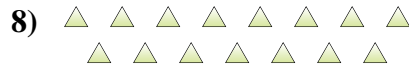
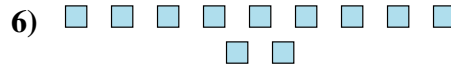
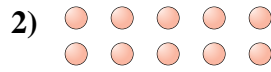





Determinar si el número de figuras en la caja es par o impar.



Respuestas

- 1. _____
- 2. _____
- 3. _____
- 4. _____
- 5. _____
- 6. _____
- 7. _____
- 8. _____
- 9. _____
- 10. _____



Determinar si el número de figuras en la caja es par o impar.

1) **18**

2) **10**

3) **6**

4) **13**

5) **6**

6) **11**

7) **12**

8) **15**

9) **8**

10) **16**

Respuestas

1. **Par**

2. **Par**

3. **Par**

4. **Impar**

5. **Par**

6. **Impar**

7. **Par**

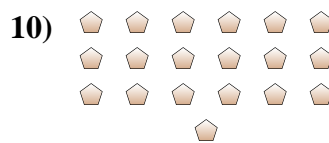
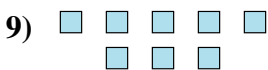
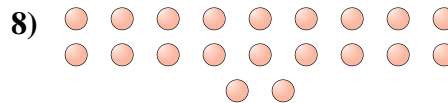
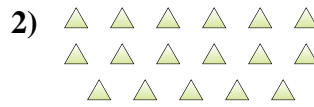
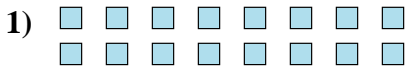
8. **Impar**

9. **Par**

10. **Par**



Determinar si el número de figuras en la caja es par o impar.

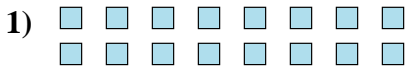


Respuestas

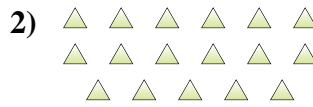
1. _____
2. _____
3. _____
4. _____
5. _____
6. _____
7. _____
8. _____
9. _____
10. _____



Determinar si el número de figuras en la caja es par o impar.



16



17



5



6



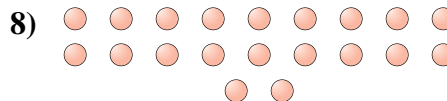
13



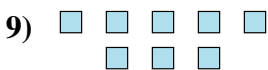
15



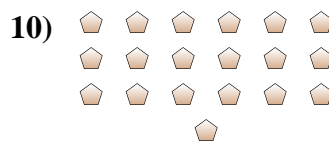
8



20



8



19

Respuestas

1. Par

2. Impar

3. Impar

4. Par

5. Impar

6. Impar

7. Par


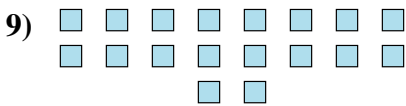
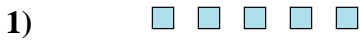
8. Par

9. Par

10. Impar



Determinar si el número de figuras en la caja es par o impar.



Respuestas

1. _____
2. _____
3. _____
4. _____
5. _____
6. _____
7. _____
8. _____
9. _____
10. _____



Determinar si el número de figuras en la caja es par o impar.



5



12



6



8



5



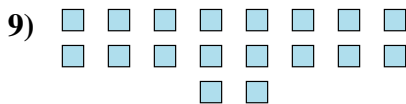
5




5



9



18



17

Respuestas

1. **Impar**

2. **Par**

3. **Par**

4. **Par**

5. **Impar**

6. **Impar**

7. **Impar**

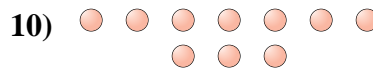
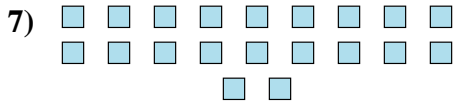
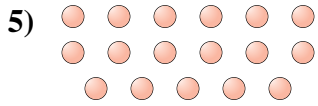
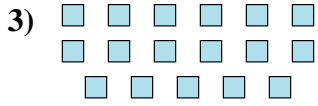
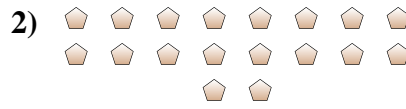
8. **Impar**

9. **Par**

10. **Impar**



Determinar si el número de figuras en la caja es par o impar.



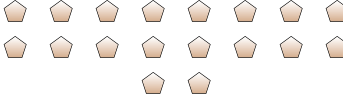
Respuestas

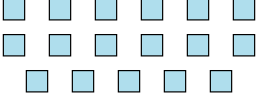
- 1. _____
- 2. _____
- 3. _____
- 4. _____
- 5. _____
- 6. _____
- 7. _____
- 8. _____
- 9. _____
- 10. _____




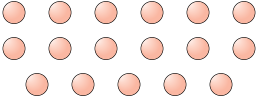
Determinar si el número de figuras en la caja es par o impar.


1) 
19

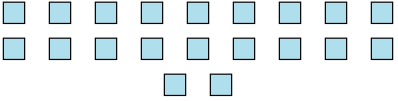
2) 
18


3) 
17

4) 
15

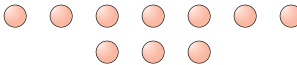
5) 
17

6) 
13

7) 
20

8) 
7

9) 
6

10) 
10

Respuestas

1. **Impar**

2. **Par**

3. **Impar**

4. **Impar**

5. **Impar**

6. **Impar**

7. **Par**

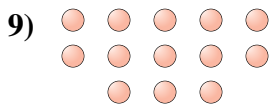

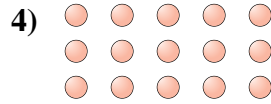
8. **Impar**

9. **Par**

10. **Par**



Determinar si el número de figuras en la caja es par o impar.



Respuestas

- 1. _____
- 2. _____
- 3. _____
- 4. _____
- 5. _____
- 6. _____
- 7. _____
- 8. _____
- 9. _____
- 10. _____



Determinar si el número de figuras en la caja es par o impar.



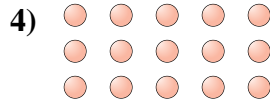
6




14



10



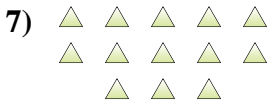
15



17



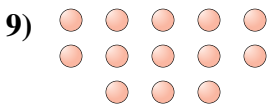
7



13



10



13



8

Respuestas

1. **Par**

2. **Par**

3. **Par**

4. **Impar**

5. **Impar**

6. **Impar**

7. **Impar**

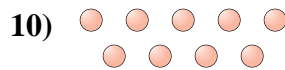
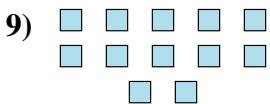

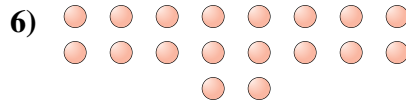

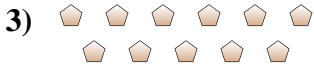
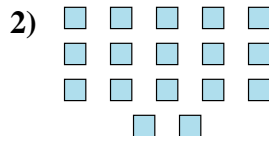
8. **Par**

9. **Impar**

10. **Par**



Determinar si el número de figuras en la caja es par o impar.



Respuestas

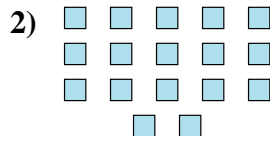
- 1. _____
- 2. _____
- 3. _____
- 4. _____
- 5. _____
- 6. _____
- 7. _____
- 8. _____
- 9. _____
- 10. _____



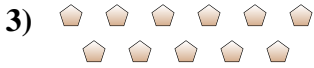
Determinar si el número de figuras en la caja es par o impar.




10



17



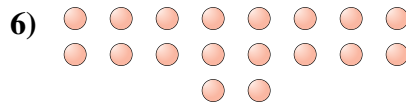
11



19



14



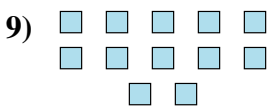
18



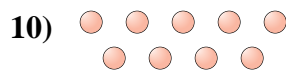
18



8



12



9

Respuestas

1. **Par**

2. **Impar**

3. **Impar**

4. **Impar**

5. **Par**

6. **Par**

7. **Par**

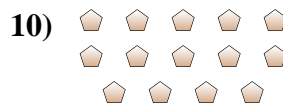
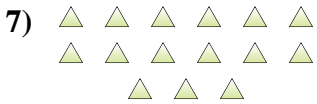
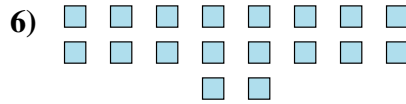
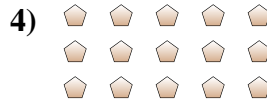

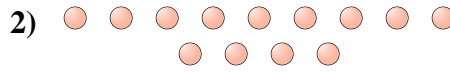
8. **Par**

9. **Par**

10. **Impar**



Determinar si el número de figuras en la caja es par o impar.



Respuestas

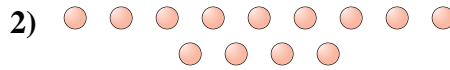
1. _____
2. _____
3. _____
4. _____
5. _____
6. _____
7. _____
8. _____
9. _____
10. _____




Determinar si el número de figuras en la caja es par o impar.



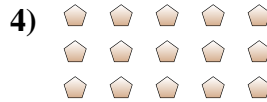
9



13



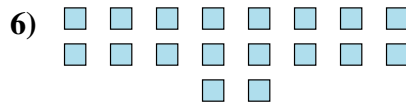
19



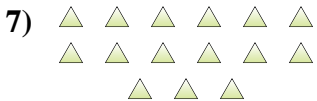
15



17



18



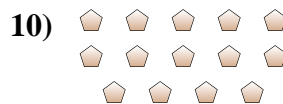
15



5



10



14

Respuestas

1. **Impar**

2. **Impar**

3. **Impar**

4. **Impar**

5. **Impar**

6. **Par**

7. **Impar**

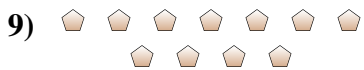
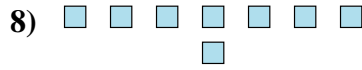
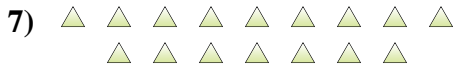
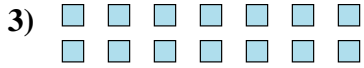
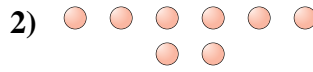
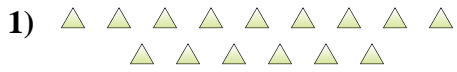
8. **Impar**

9. **Par**

10. **Par**



Determinar si el número de figuras en la caja es par o impar.

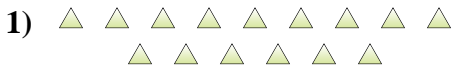


Respuestas

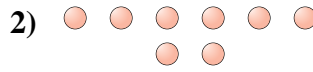
1. _____
2. _____
3. _____
4. _____
5. _____
6. _____
7. _____
8. _____
9. _____
10. _____



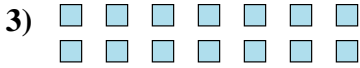
Determinar si el número de figuras en la caja es par o impar.



15



8



14



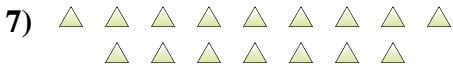
10



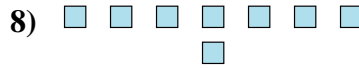
12



8



16



8



11



7

Respuestas

1. **Impar**

2. **Par**

3. **Par**

4. **Par**

5. **Par**

6. **Par**

7. **Par**

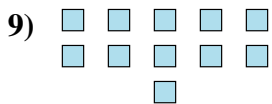
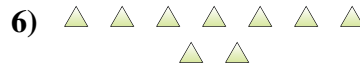
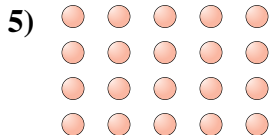
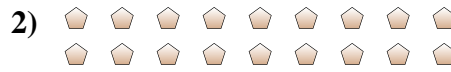
8. **Par**

9. **Impar**

10. **Impar**



Determinar si el número de figuras en la caja es par o impar.



Respuestas

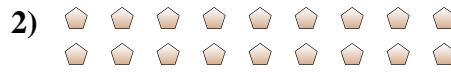
- 1. _____
- 2. _____
- 3. _____
- 4. _____
- 5. _____
- 6. _____
- 7. _____
- 8. _____
- 9. _____
- 10. _____



Determinar si el número de figuras en la caja es par o impar.



7



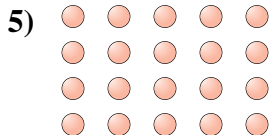
18



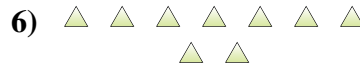
6



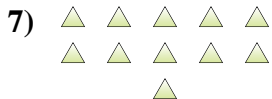
7



20



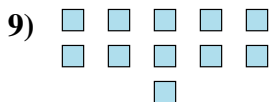
9



11



5



11



6

Respuestas

1. **Impar**

2. **Par**

3. **Par**

4. **Impar**

5. **Par**

6. **Impar**

7. **Impar**

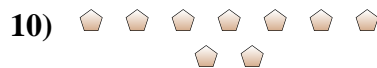
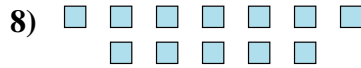
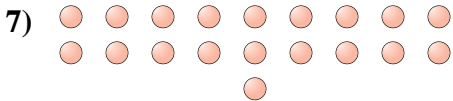
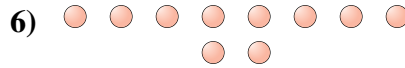
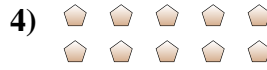

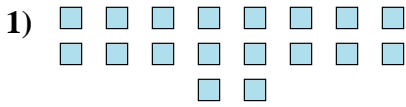
8. **Impar**

9. **Impar**

10. **Par**



Determinar si el número de figuras en la caja es par o impar.

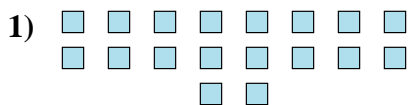


Respuestas


1. _____
2. _____
3. _____
4. _____
5. _____
6. _____
7. _____
8. _____
9. _____
10. _____



Determinar si el número de figuras en la caja es par o impar.



18



20



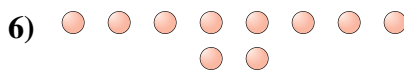
14



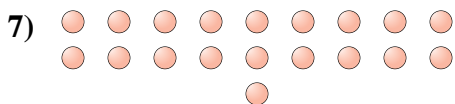
10



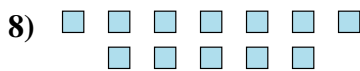
12



10



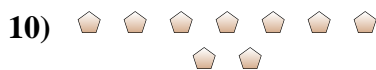
19



12



7



9

Respuestas

1. **Par**

2. **Par**

3. **Par**

4. **Par**

5. **Par**

6. **Par**

7. **Impar**

8. **Par**

9. **Impar**

10. **Impar**