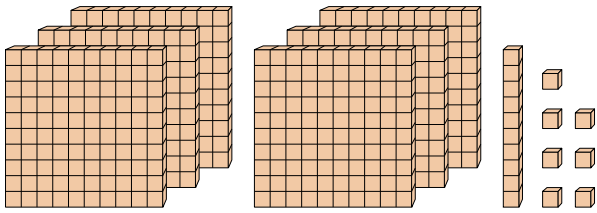




Cuente el número total de bloques pequeños.

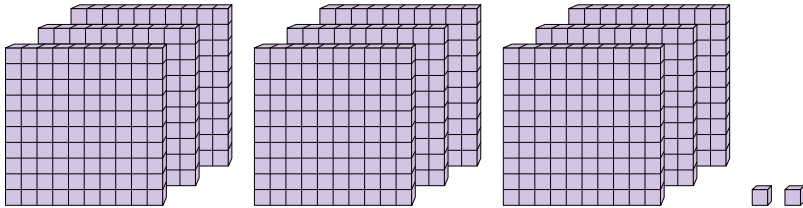
**Respuestas**

1)



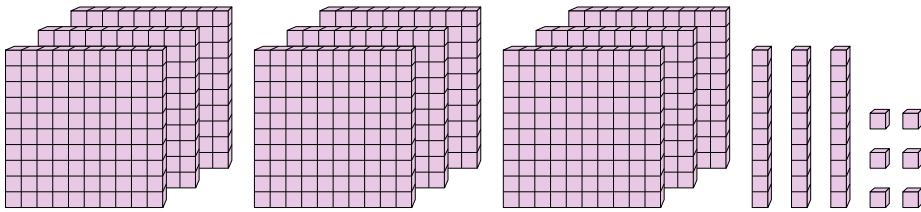
1. \_\_\_\_\_

2)



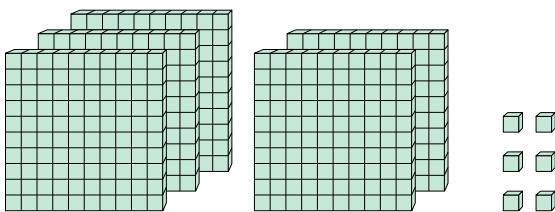
2. \_\_\_\_\_

3)



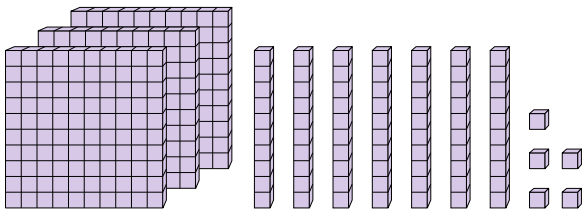
3. \_\_\_\_\_

4)



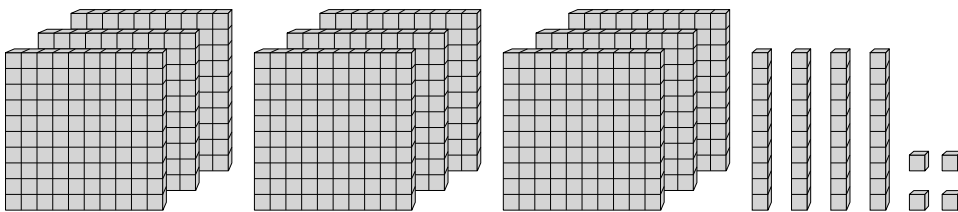
4. \_\_\_\_\_

5)



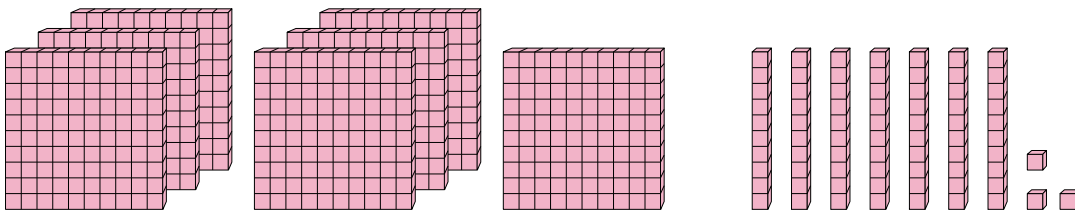
5. \_\_\_\_\_

6)



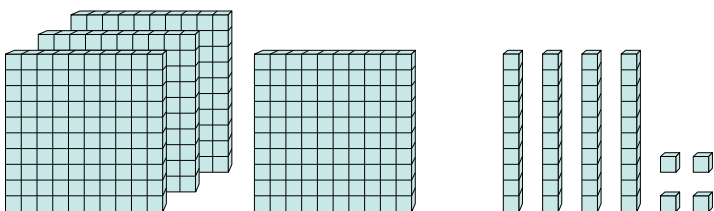
6. \_\_\_\_\_

7)



7. \_\_\_\_\_

8)



8. \_\_\_\_\_



Cuente el número total de bloques pequeños.

1)

2)

3)

4)

5)

6)

7)

8)

**Respuestas**

1. 617
2. 902
3. 936
4. 506
5. 375
6. 944
7. 773
8. 444