



Rellenar los espacios para encontrar las cantidades.

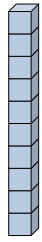
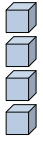
Respuestas

Ej)

1)

2)

Ej. 4



0

4

decenas

unos

decenas

unos

decenas

unos

1. _____

2. _____

3. _____

4. _____

3)

4)

5)

5. _____

6. _____

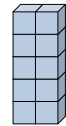
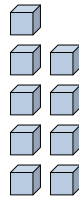
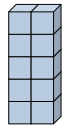
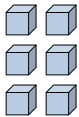
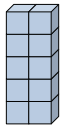
7. _____

8. _____

9. _____

10. _____

11. _____



decenas

unos

decenas

unos

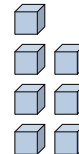
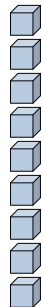
decenas

unos

6)

7)

8)



decenas

unos

decenas

unos

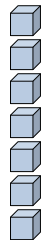
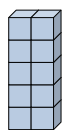
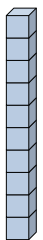
decenas

unos

9)

10)

11)



decenas

unos

decenas

unos

decenas

unos

